

SOLVED PREVIOUS YEAR QUESTIONS - 2021

1. In IPv4 addressing format, the number of networks allowed under Class C is _____.

- A. 2^{14}
- B. 2^7
- C. 2^{21}
- D. 2^{24}

Ans: C

Explanation: Class C addresses use the first 3 octets for the network (8 + 8 + 5 bits: the two high-order bits of the third octet are fixed as "110"), leaving 21 bits for network IDs $\rightarrow 2^{21}$ networks.

2. Consider following tasks related to email:

T1: Send an email from a mail client to mail server

T2: Checking an email in a web browser

Which application-level protocol is used for each task?

- A. T1: SMTP, T2: HTTP
- B. T1: SMTP, T2: POP
- C. T1: POP, T2: HTTP
- D. T1: FTP, T2: HTTP

Ans: A

Explanation: SMTP is used to submit mail from client to server; webmail access uses HTTP.

3. The Address Resolution Protocol (ARP) is used for finding _____.

- A. IP address from the DNS
- B. IP address of the default gateway
- C. IP address that corresponds to a MAC address
- D. MAC address that corresponds to an IP address

Ans: D

Explanation: ARP maps a known IPv4 address to its corresponding MAC address on a local Ethernet segment.

4. An organization has a class B network and wishes to form subnets for 64 departments. The subnet mask would be _____.

- A. 255.255.0.0
- B. 255.255.64.0
- C. 255.255.128.0
- D. 255.255.252.0

Ans: D

Explanation: Step-by-Step:

Class B default subnet mask:

Default: 255.255.0.0 \rightarrow CIDR: /16

Required number of subnets:

At least 64 \rightarrow We need enough bits to represent 64 subnets.

Number of bits needed:

$$2^n \geq 64 \Rightarrow n=6 (\text{since } 2^6=64)$$

So, we need 6 additional bits for subnetting.

New subnet mask:

Start with /16 and add 6 bits \rightarrow /22

CIDR /22 corresponds to:

255.255.252.0

5. _____ of a network is measured based upon frequency of failure and network recovery time after a failure.

- A. Performance
- B. Reliability
- C. Security
- D. Feasibility

Ans: B

Explanation: Reliability quantifies how often the network fails and how quickly it recovers.

6. When the receiver is ensured that the message is coming from the intended sender, not from a pretender. It refers to _____ of message.

- A. confidentiality
- B. integrity
- C. authentication
- D. non-repudiation

Ans: C

Explanation: Authentication verifies the sender's identity, ensuring messages originate from who they claim to be.

7. In a network, when the load is below the capacity of the network, the throughput _____.

- A. increases sharply
- B. increases proportionally with the load
- C. declines sharply jettystudy.com
- D. declines proportionally with the load

Ans: B

Explanation: Up to its capacity, throughput scales linearly with offered load.

8. Most commercial software programs enjoy a form of intellectual property protection that is known as _____.

- A. Copyright
- B. Open source
- C. Patent
- D. Trademark

Ans: A

Explanation: Software code is automatically covered by copyright law, protecting the author's expression.

9. In C programming, _____ operator is used to access a structure element using a pointer. A. dot (.)

- B. address (&)
- C. pointer (*)
- D. arrow (→)

Ans: D

Explanation: The -> operator dereferences a pointer to a struct and accesses its member in one step.

10. _____ is the memory management capability of an Operating System (OS) that uses hardware and software to allow a computer to compensate for physical memory shortages by temporarily transferring data from Random Access Memory (RAM) to disk storage.

- A. Multiprocessing
- B. Virtual Memory
- C. Spooling
- D. Resource allocation

Ans: B

Explanation: Virtual memory uses disk space to extend apparent RAM, swapping pages in and out as needed.

11. If a software is to be developed for a system with small memory, the software should use _____.

- A. recursion wherever possible
- B. macros instead of functions
- C. neither macros nor functions
- D. functions instead of macros

Ans: D

Explanation: Macros are expanded inline at every call site, increasing code size (flash/ROM usage). Functions generate a single copy of the routine and use a small call/return overhead.

On tight-memory systems, minimizing code size is more important than a few extra cycles of call overhead, so use functions over macros.

12. The result of $(8AB)_{16} + (1B3)_{16}$ is _____.

- A. $3F2_{16}$
- B. 313_{16}
- C. $A5E_{16}$
- D. $5B9_{16}$

Ans: C

Explanation: $(8AB)_{16} = 8 \cdot 256 + 10 \cdot 16 + 11 = 2219$

$(1B3)_{16} = 1 \cdot 256 + 11 \cdot 16 + 3 = 435$

Sum = $2219 + 435 = 2654$

$2654 / 256 = 10$ remainder $94 \Rightarrow$ high-order digit

A, then $94 / 16 = 5$ remainder $14 \Rightarrow 5E \Rightarrow A5E$.

13. In a database, if every non-key attribute is functionally dependent only upon the primary

key, then the relation will be in _____ normal form.

- A. first
- B. second
- C. third
- D. fourth

Ans: B

Explanation: 1NF requires atomic values. 2NF eliminates partial dependencies: every non-key attribute depends on the whole primary key, not just part of it. Here each non-key attribute depends solely on the PK (no partials), satisfying 2NF.

14. What is the output of the following C program?

```
#include <stdio.h >
main() { int n=5
printf("%d %d\n", ++n, n*n);
```

- A. 5 36
- B. 5 25
- C. 6 25
- D. 6 36

Ans: D

Explanation: ++n increments n to 6. n*n then evaluates to $6 \times 6 = 36$.

Note: The order of evaluation of function arguments in C is unspecified; relying on this sequence is technically undefined behavior, but most compilers on typical platforms evaluate left-to-right.

15. What is the worst-case time complexity of an algorithm that adds an element in a singly linked list?

- A. $\log_2 n$
- B. $n/2$
- C. $\log_2 n - 1$
- D. n

Ans: D

Explanation: In the worst case (inserting at the end without a tail pointer), you must traverse all n nodes $\Rightarrow O(n)$.

16. Which of the following best describes the process of data streaming?

- A. Playing multimedia file after complete download of a file
- B. Playing multimedia file without being completely downloaded first
- C. Reducing the load time of a Web page
- D. Sending packets to a Web server to improve its performance

Ans: B

Explanation: Streaming delivers data in a steady flow and begins playback before the entire file is received.

17. If we sort the alphabets in a string "FLOWER" using bubble sort algorithm. The number of comparisons will be _____.

- A. 6
- B. 12
- C. 11
- D. 15

Ans: D

Explanation: Number of comparisons in Bubble Sort (Worst Case): Formula

$$n(n-1)/2$$

For $n=6$

$$\frac{6 \times (6-1)}{2} = \frac{6 \times 5}{2} = 15$$

So, the **number of comparisons = 15.**

Bubble sort works by repeatedly swapping adjacent elements if they are in the wrong order. In the worst case, it will make $n-1$ comparisons in the first pass, $n-2$ in the second pass, and so on, until only 1 comparison remains. Adding them up gives the formula $n(n-1)$. For a 6-character string, that's $5+4+3+2+1=$ comparisons.

18. The FIFO algorithm of process scheduling

- A. first executes the job that came last in the queue
- B. first executes the job that came first in the queue
- C. first executes the job that needs minimal processor
- D. first executes the job that has maximum processor needs

Ans: B

Explanation: FIFO (First-In, First-Out) is the simplest process scheduling algorithm, also known as FCFS (First-Come, First-Served). It works just like a queue at a ticket counter: The first person (process) to arrive is the first one to be served (executed). There is **no priority** or consideration of how long a job takes.

19. Consider the following segment of a Java program.

```
int choice, alpha = 6;
choice = 5;
switch (choice)
{
case 3: alpha++; break;
```

case 4:

```
case 6: alpha = alpha + 3;
```

```
case 8: alpha = alpha + 4; break;
```

```
default: alpha = alpha + 5;
```

```
}
```

System.out.println(alpha);

What will the output be when the above segment is executed as a program?

- A. 7
- B. 9
- C. 18
- D. 11

Ans:

Explanation: choice is 5 \Rightarrow no matching case \Rightarrow falls into default only.

alpha starts at 6, then default adds 5 \Rightarrow 11.

20. In Java applets, if you wish to change its background color dynamically, which method must be called to make this change visible?

- A. restart()
- B. repaint()
- C. shade()
- D. setBackground()

Ans: B

Explanation: setBackground(...) changes the color property, but you must call repaint() to request the AWT thread to redraw the applet with the new background.

21. Consider the following Java code :

```
class A
{
int myfun(int i)
{return 5 + 4 * i; }
}
class B extends A
{
int myfun(int i)
{ return 4 + 2 * i; }
}
```

If a program instantiates an object of class B and invokes myfun() with a parameter of 5 as in the Java code mentioned above, what value will be returned?

- A. 14
- B. 25
- C. Null
- D. 0

Ans: A

Explanation: In Java, overridden methods are dispatched at run-time based on the actual object's class (dynamic binding)

Though class A defines $\text{myfun}(i) = 5 + 4i$, class B overrides it with $\text{myfun}(i) = 4 + 2i$.

Since obj is an instance of B, the B-version runs: $\text{myfun}(5) = 4 + 2 \times 5 = 4 + 10 = 14$.

22. Two's complement of 1001.01 is

- A. 0100.10
- B. 0110.11
- C. 1011.10
- D. 0100.01

Ans: B

Explanation: To find the two's-complement of a fixed-width binary number:

Invert each bit ($0 \leftrightarrow 1$).

Add 1 to the inverted result.

Step	Original	Inversion	+1
Bits	1001.01	0110.10	0110.10
Add 1 (0.01)			0110.10
Result			0110.11

23. A square matrix in which all the elements of the principal diagonal are 1 and remaining elements are 0, is called _____ matrix.

- A. null
- B. scalar
- C. identity
- D. diagonal

Ans: C

Explanation: An identity matrix I_n has $I_{ii} = 1$ for $i = 1 \dots n$ and $I_{ij} = 0$ for $i \neq j$.

It acts as the multiplicative "1" in matrix algebra.

24. The mean of five numbers is 21. If one number is excluded then the mean is 18. Which of following number is excluded?

- A. 15
- B. 33
- C. 25
- D. 26

Ans: B

Explanation: Total of five numbers = $5 \times 21 = 105$

New total after exclusion = $4 \times 18 = 72$

Excluded number = $105 - 72 = 33$

25. During the build process of C++ programs, when does linking occur?

- A. Before compiling
- B. After compiling
- C. At the same time as compiling
- D. After execution

Ans: B

Explanation: Compilation: source .cpp \rightarrow object.o.

Linking: object files + libraries \rightarrow executable. Only after linking can the program be run.

26. An algorithm has complexity of $O(2^n)$. It means that computing time is _____.

- A. constant
- B. linear
- C. exponential
- D. quadratic

Ans: C

Explanation: 2^n grows exponentially with n. Doubling n squares the work.

27. A leap year is selected at random. Find the probability that it has 53 Sundays.

- A. 1/7
- B. 2/7
- C. 3/7
- D. 4/7

Ans: B

Explanation: A leap year has 366 days = 52 full weeks + 2 extra days.

Those 2 extra days can be any consecutive pair out of:

(Mon,Tue), (Tue,Wed), ..., (Sat,Sun), (Sun,Mon)

There are 7 equally likely pairs; Sunday appears in exactly 2 of them— (Sat,Sun) and (Sun,Mon)

Hence $P = \frac{2}{7}$.

28. In a half-adder, carry is obtained using _____ gate and sum is obtained using _____ gate.

- A. AND, XOR
- B. OR, AND
- C. NAND, XOR
- D. XOR, AND

Ans: A

Explanation: Carry = 1 only if both inputs are 1 \Rightarrow AND gate. Sum = 1 if exactly one input is 1 \Rightarrow XOR gate.

29. How many main() function/functions you can have in a C project?

- A. 1
- B. 2
- C. No Limit
- D. Depends on Compiler

Ans: 1

Explanation: A C program's entry point is a single main(). Multiple definitions lead to linker errors ("multiple definition of main").

30. What is output of following C program? #include <stdio.h>

```
int main(void)
{
    if (printf("I always "))
    {
        printf("speak truth");
    }
    else
    {
        printf("tell lie");
    }
    return 0;
}
```

- A. speak truth
- B. tell lie
- C. I always speak truth
- D. I always tell lie

Ans: C

Explanation: printf("I always ") prints those 8 characters and returns the count (8), which is non-zero \Rightarrow the if condition is true. Control enters the then branch, printing "speak truth" immediately after.

Final output:

I always speak truth

31. In a C program, an array passed as an argument to a function is interpreted as

- A. address of the number of elements of the array
- B. value of the first element of the array
- C. address of the first element of the array
- D. number of elements of the array

Ans: C

Explanation: In C, when you pass an array name to a function, it "decays" to a pointer to its first element. Internally, the function receives the address of element $x[0]$, not the whole array or its length.

32. Three of the following numbers are same. Which one is different?

- A. $(10101111)_2$
- B. $(255)_8$
- C. $(175)_{10}$
- D. $(AF)_{16}$

Ans: B

Explanation : Let's convert each to decimal:

Representation	Value in Decimal
$(10101111)_2$	$1 \cdot 2^7 + 0 \cdot 2^6 + 1 \cdot 2^5 + 0 \cdot 2^4 + 1 \cdot 2^3 + 1 \cdot 2^2 + 1 \cdot 2^1 + 1 \cdot 2^0$

$$= 128 + 0 + 32 + 0 + 8 + 4 + 2 + 1 = **175$$

$$| (255)_8 | 2 \cdot 8^2 + 5 \cdot 8^1 + 5 \cdot 8^0$$

$$= 2 \cdot 64 + 5 \cdot 8 + 5 \cdot 1 = 128 + 40 + 5 = 173 |$$

$$| (175)_{10} | 175 |$$

$$| (AF)_{16} | A=10, F=15 \rightarrow 10 \cdot 16^1 + 15 \cdot 16^0 = 160 + 15 = 175 |$$

We see that $(10101111)_2$, $(175)_{10}$, and $(AF)_{16}$ all equal 175_{10} . Only $(255)_8$ is 173_{10} , so it is different.

33. What results will be produced by the following SQL query?

Select sum(standard_price) as total_price from product_v where product_type = 'PENCIL';

- A. The total price of all products that are of type PENCIL
- B. The total price of all products
- C. The standard_price of the first PENCIL in the table
- D. The standard_price of any PENCIL in the table

Ans: A

Explanation:

This aggregates (SUM) the standard price only for rows where product type = 'PENCIL'.

A: "The total price of all products that are of type PENCIL" is exactly what the query returns.

B would be the case if there were no WHERE clause.

C/D would require limiting to a single row rather than summing.

34. Which operator has the lowest priority amongst following C operators?

- A. ++
- B. %
- C. +
- D. ||

Ans:

Explanation: Operator precedence in C (from highest to lowest) among the given:

++ (postfix)	// highest
%	// multiplicative
+	// additive
	// logical OR (lowest)

Therefore, || has the lowest priority.

35. What will be the output of the following C program?

```
void main ( )
{
    double amount=33;
    int item;
    item= amount%6;
    printf ("\n Item=%d", item);
}
```

- A. Item=3
- B. Item=5
- C. Run time Error

D. Compile time Error

Ans: D

Explanation: The % operator in C requires integer operands.

Here, amount is a double, so amount % 6 is a compile-time type error.

The compiler will reject the misuse of % with a double.

36. What will be the output of the following C program?

```

void main( )
{
int x[]={10,20,30,40,50};
printf ("\n %d %d %d %d %d",
x[4],3[x],x[2],1[x],x[0]);
}

```

- A. Error
- B. 10 20 30 40 50
- C. 50 40 30 20 10
- D. 4 3 2 1 0

Ans: C

Explanation: In C, a[b] is defined as *(a + b), which is commutative: a[b] == b[a].

So:

$x[4] \rightarrow *(x + 4) \rightarrow 50$.

$3[x] \rightarrow *(3 + x) \rightarrow x[3] \rightarrow 40$

$x[2] \rightarrow 30$

$1[x] \rightarrow *(1 + x) \rightarrow x[1] \rightarrow 2$

$x[0] \rightarrow 10$

Printed sequence: 50 40 30 20 10.

37. In UNIX/Linux OS, Which command would give the permissions of read and execute to the owner and group of myfile while all others have only read access?

- A. chmod 003 myfile
- B. chmod 554 myfile
- C. chmod 331 myfile
- D. chmod 662 myfile

Ans: B

Explanation: We want owner & group to have read+execute (r-x = 5 in octal), and others to have read only (r-- = 4).

Entity	Permission	Octal
Owner	r-x	5
Group	r-x	5
Others	r--	4

Concatenate as 554. Thus:

chmod 554 myfile

38. In context of software product development, Unit Testing is performed by _____.

- A. tester
- B. end user

- C. customer
- D. developer

Ans: D

Explanation: Unit Testing is the process of verifying individual "units" (functions, classes, modules) in isolation.

It is typically written and executed by the developer as they build the code, often using frameworks like JUnit (Java), NUnit (.NET), etc.

39. In C/C++ programming, continue statement is used _____.

- A. to go to the next iteration in a loop
- B. come out of a loop
- C. exit and return to the main function
- D. restart iterations from beginning of loop

Ans: A

Explanation: The continue statement, when encountered inside a loop (for, while, do...while), immediately skips the rest of the loop body and proceeds to the next iteration (checking the loop condition again).

40. In an image compression system, 16384 bits are used to represent 256 x 256 image with 256 gray levels. What is the compression ratio for this system?

- A. 4
- B. 8
- C. 16
- D. 32

Ans: D

Explanation: A 256 x 256 image has 65,536 pixels. With 256 gray levels, each pixel needs 8 bits (since $2^8 = 256$).

Uncompressed size = 65,536 pixels x 8 bits/pixel = 524,288 bits.

Compressed size is given as 16,384 bits.

Compression ratio = (Uncompressed size) / (Compressed size)

$$= \frac{524,288}{16,384} = 32$$

Calculation Step	Value
Total pixels	$256 \times 256 = 65,536$
Bits per pixel (8 bits)	256 levels \rightarrow 8 bits
Uncompressed size (bits)	$65,536 \times 8 = 524,288$
Compressed size (bits)	16,384
Compression ratio	$524,288 / 16,384 = 32$

41. What will be the output of the following C program?

```

main()
{
int a , x;
a = 18; x = a >> 1;
}

```

`printf("%d %d", a, x);`

- A. 18 9
- B. 18 0
- C. 18 1
- D. error

Ans: A

Explanation: The right-shift operator $\gg 1$ divides by 2 (for unsigned or positive signed values). $18 \gg 1$ yields 9.

The printf therefore prints: 18 9

42. In Software Engineering, coupling indicates the degree to which a module _____.

- A. is connected to other modules and the outside world
- B. can be written more compactly
- C. is able to complete its function in a timely manner
- D. focuses on just one thing

Ans: A

Explanation: In Software Engineering, coupling measures how strongly one module is connected to (or relies on) other modules or external systems.

Low coupling (modules largely independent) is desirable for maintainability and reuse.

High coupling makes changes ripple through multiple modules.

43. Data mining is used to aid in _____.

- A. operational management
- B. analyzing past decisions made by managers
- C. retrieving archival data
- D. detecting patterns in operational data

Ans: D

Explanation: Data mining is the process of discovering patterns and relationships in large datasets, often to support decision-making or uncover previously hidden insights.

It is not primarily about simple retrieval or archival queries, but about pattern detection (e.g., association rules, clustering).

44. In context of Operating System, Semaphores are used to _____.

- A. synchronise critical resources to prevent deadlock
- B. schedule the processes
- C. do input/output
- D. facilitate memory management

Ans: A

Explanation: Semaphores are synchronization primitives used by an operating system to control access to shared (critical) resources and to coordinate process execution.

They can enforce mutual exclusion or ordering to help prevent race conditions and potential deadlocks.

45. The logic expression $x'yz' + x'yz + xyz' + xyz$ reduces to _____.

- A. $x'z$
- B. xyz
- C. y
- D. yz

Ans:

Explanation: We simplify the Boolean expression:

$$x'yz' + x'yz + xyz' + xyz$$

Factor out common terms:

$$= -x(y+z) + yz(x+z) = xy(1+z) = x(z+x) = yz+x = yx+z$$

46. A hash function f defined as $f(\text{key}) = \text{key mod } 7$, with linear probing is used to insert the key 37, 38, 72, 48, 98, 11, 56 into a table index from 0 to 6. What will be the location of 11?

- A. 3rd
- B. 4th
- C. 5th
- D. 6th

Ans: D

Explanation: Using a hash table of size 7 (indices 0–6), $\text{hash} = \text{key mod } 7$, with linear probing on collision:

Key	Key mod 7	Initial Index	Collision?	Final Index
37	$37 \bmod 7 = 2$	2	No	2
38	$38 \bmod 7 = 3$	3	No	3
72	$72 \bmod 7 = 2$	2	Yes (37)	4 (via 3→4)
48	$48 \bmod 7 = 6$	6	No	6
98	$98 \bmod 7 = 0$	0	No	0
11	$11 \bmod 7 = 4$	4	Yes (72)	5 (via 5)

11 first hashes to index 4 (occupied), then probes to 5, which is free.

Index 5 corresponds to the 6th slot in the table (counting from 1).

47. In a paged memory, the page hit ratio is 45%. The time required to access a page in secondary memory is 100ns. The time required to access a page in the primary memory is 10ns. The average time required to access a page is _____.

- A. 45ns

- B. 59.5ns
- C. 68.5ns
- D. 78.5ns

Ans: B

Explanation: Let

$h = 0.45$ page-hit ratio, access time = 10 ns
 $1 - h = 0.55$ = page-miss ratio, access time = 100 ns

Average access time T :

$$T = h \times 10 + (1 - h) \times 100 = 0.45 \times 10 + 0.55 \times 100 = 4.5 + 55 = 59.5 \text{ ns}$$

48. In C++, a non member function that is allowed access to the private and protected members of a class is called _____ function.

- A. friend
- B. virtual
- C. inline
- D. pure virtual

Ans: A

Explanation: In C++, a friend function is a non-member function declared with the friend keyword inside a class, giving it access to that class's private and protected members.

49. Cloud computing is a model for enabling convenient and _____ network access to shared computing resources with automatic control. (Choose the most appropriate word)

- A. cost-effective
- B. on-demand
- C. faster
- D. secure

Ans: B

Explanation: Cloud computing is defined as a model for enabling on-demand network access to a shared pool of configurable computing resources (e.g., servers, storage) that can be provisioned and released with minimal management effort.

50. A trigger is _____.

- A. a statement that enables to start any DBMS
- B. a statement that is executed by the user while debugging a query
- C. a condition the system tests for validity of a database user
- D. a statement that is executed automatically as a side effect of a modification to the database

Ans: D

Explanation: In a database, a trigger is a set of instructions that are automatically executed ("fired") when certain events occur on a table or view (e.g., INSERT, UPDATE, DELETE), enforcing

integrity or other side-effects without explicit user invocation.

51. Fill in the right value

$$(10111)_2 * (1110)_2 = (\dots)_{16}$$

- A. 150
- B. 241
- C. 142
- D. 111

Ans: C

Explanation:

$$(10111)_2 = 23, (1110)_2 = 14, 23 \times 14 = 322.$$

Convert 322 to hexadecimal:

Divide by 16:

$$322 \div 16 = 20 \text{ remainder } 2$$

Divide 20 by 16:

$$20 \div 16 = 1 \text{ remainder } 4$$

Divide 1 by 16:

$$1 \div 16 = 0 \text{ remainder } 1$$

Reading remainders bottom-up gives 142₁₆.

52. Web casting is _____.

- A. transmission of live audio/video on Internet
- B. searching something on Internet
- C. listening to music through Internet
- D. making a movie on the Internet

Ans: A

Explanation: Webcasting is the transmission of live audio and/or video streams over the Internet, typically in real time.

53. Given an empty stack, after performing PUSH(1), PUSH(2), POP, PUSH(3), PUSH(4), POP, POP, PUSH(5), POP, what is the value of the top of the stack ?

- A. 4
- B. 3
- C. 2
- D. 1

Ans: D

Explanation: Perform the operations step by step:

Operation	Stack Content (bottom → top)	Top
PUSH(1)	[1]	1
PUSH(2)	[1, 2]	2
POP	[1]	1
PUSH(3)	[1, 3]	3
PUSH(4)	[1, 3, 4]	4
POP	[1, 3]	3
POP	[1]	1
PUSH(5)	[1, 5]	5
POP	[1]	1

The final top of the stack is 1.

54. Which of the following mode declaration is used in C++ to open a file for input?

- A. ios :: app
- B. in :: ios
- C. ios :: file
- D. ios :: in

Ans: D

Explanation: To open a file for input in C++, you use the mode flag ios::in.

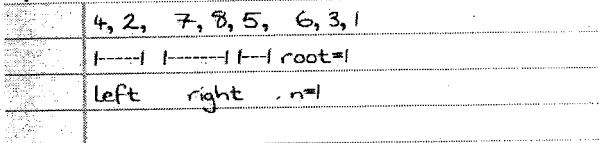
```
std::fstream file("example.txt", ios::in);
```

55. The postorder traversal of a binary tree is 4,2,7,8,5,6,3,1. Find out the preorder traversal.

- A. 1,2,3,4,5,6,7,8
- B. 8,7,6,5,4,3,2,1
- C. 1,2,4,3,5,7,8,6
- D. 2,1,3,5,4,6,8,7

Ans: C

Explanation: Given postorder:



Root = 1

Left subtree postorder = 4,2 → root 2 with left child 4


Right subtree postorder = 7,8,5,6,3 → root 3

For node 3, postorder splits into left = 7,8,5 and right = 6

Left subtree root 5 with children 7 (left) and 8 (right)

Right subtree 6

Constructed tree:



Preorder (node, left, right):

1, 2, 4, 3, 5, 7, 8, 6

56. _____ is a satellite based tracking system that facilitate in determination of person's position.

- A. Bluetooth
- B. WAP
- C. Short Message Service
- D. Global Positioning System

Ans: D

Explanation: A Global Positioning System (GPS) is a satellite-based tracking (positioning) system.

57. Which of the following functions will correctly return true if its argument is an odd integer?

```
I. bool IsOdd (int x) {
return (x % 2 == 1);
}
```

```
II. bool IsOdd (int x) {
return (x / 2 == 1);
}
```

```
III. bool IsOdd (int x) {
if (x % 2 == 1)
return true;
else return false;
}
```

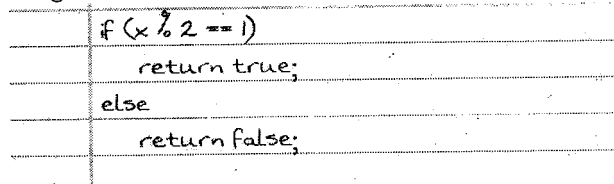
- A. II only
- B. I and II only
- C. I and III only
- D. II and III only

Ans: C

Explanation: Both correctly test for oddness (assuming non-negative x).

II. return (x / 2 == 1);

is only true when x = 2 or 3, not for all odd integers.



58. What is printed by the following C++ program? void func (int *b)

```

{
*b = 1;
}
int main ()
{
int *a;
int n;
a = &n;
*a = 0;
func (a);
cout << *a << endl;
}
  
```

- A. 0
- B. 1
- C. The address of a
- D. The address of n

Ans: B

Explanation: *a refers to n, which is set to 1 in func(). Hence it prints 1.

59. Which feature of Object Oriented Programming allows reusing code?

- A. Polymorphism
- B. Inheritance
- C. Encapsulation
- D. Data hiding

Ans: B

Explanation: Inheritance allows a new class (derived class) to reuse (inherit) properties and behaviors of an existing class (base class), promoting code reuse.

60. The following C++ statement
`int num[2][3]={ {1,2}, {3,4}, {5, 6} };`

- A. assigns a value 2 to num[1][2]
- B. assigns a value 4 to num[1][2]
- C. gives an error message
- D. assigns a value 3 to num[1][2]

Ans: C

Explanation: Declaration

`int num[2][3] = { {1,2}, {3,4}, {5, 6} };`

The array has 2 rows but 3 initializer lists are provided → too many initializers → compile-time error.

61. You are working as a project manager and want to develop a project. What will be your first step in project planning?

- A. Establish the objectives and scope of the project.
- B. Determine the project constraints.
- C. Select the team.
- D. Determine the budget.

Ans: A

Explanation: The very first step in project planning is to establish the objectives and scope. You need a clear definition of what the project will deliver and its boundaries before you can sensibly identify constraints, assemble a team, or set a budget.

62. In context of display devices, Aspect ratio means _____ of the screen.

- A. total number of pixels
- B. physical size
- C. ratio of horizontal points to vertical points
- D. refresh frequency

Ans: C

Explanation: Aspect ratio describes the proportional relationship between the horizontal and vertical pixel counts of a display (e.g. 16:9 means 16 horizontal pixels for every 9 vertical pixels).

63. Moving Picture Experts Group (MPEG) standard is used to compress _____.

- A. frames
- B. images

- C. audio
- D. video

Ans: D

Explanation: MPEG (Moving Picture Experts Group) standards are primarily designed for video compression (though they often carry synchronized audio tracks as part of the video stream).

64. Which of the following options is false about the final keyword of Java programming language?

- A. A final method cannot be overridden in its subclasses.
- B. A final class cannot be extended.
- C. A final class cannot extend other classes.
- D. Value of a final variable cannot be changed once initialized.

Ans: C

Explanation: A is true: a final method cannot be overridden.

B is true: a final class cannot be subclassed.

D is true: a final variable's value can't be changed once set.

C ("A final class cannot extend other classes") is false—there's no restriction on a final class extending another class.

65. In Java programming, source codes are compiled and converted to _____.

- A. object code
- B. binary code
- C. assembly code
- D. byte code

Ans: D

Explanation: Java source (.java) files are compiled into bytecode (.class files), which the JVM interprets or JIT-compiler on the target platform.

66. If a CPU has a 32-bit address bus, what is the maximum amount of memory it can directly address?

- A. 64 MB
- B. 16 MB
- C. 1 GB
- D. 4 GB

Ans:

Explanation: A 32-bit address bus can generate 2^{32} distinct addresses. At one byte per address, that equals 4 GB of directly addressable memory.

67. The program counter stores the _____.

- A. address of the instruction that is currently being executed
- B. next instruction to be executed

- C. address of the next instruction to be executed
- D. instruction that is currently being executed

Ans: C

Explanation: The program counter (PC) holds the address of the next instruction to fetch and execute, not the one currently running.

68. In an HTML document, which is the correct place to refer to an external style sheet?

- A. At the top of the document
- B. At the end of the document
- C. In the <body> section
- D. In the <head> section

Ans: D

Explanation: External style sheets are linked in the HTML document's <head> section using a <link> tag, so that styles are loaded before the body renders.

69. In an HTML document, the tags <a> and are used for _____.

- A. adding image
- B. aligning text
- C. adding links to your page
- D. adding audio files

Ans: C

Explanation: The <a> (anchor) tag creates hyperlinks—allowing users to click through to another page or resource.

70. Web design that uses HTML and CSS for a website to automatically adjust it on all devices (desktops, tablets, phones etc.) is known as _____.

- A. good web design
- B. responsive web design
- C. effective web design
- D. fabulous web design

Ans: B

Explanation: Designing a site so that its layout and elements automatically adapt to various screen sizes (desktop, tablet, phone) is known as responsive web design.

71. How do you tell the browser that a frame should fill whatever space is left over in the browser window after all other frames are placed?

- A. use '%'
- B. use '/'
- C. use '*'
- D. use 'x'

Ans: C

Explanation: In an HTML <frameset>, you can specify row or column sizes in three ways:

- Absolute pixels (e.g. 200)
- Percentage (e.g. 30%)

The wildcard * (one or more asterisks)

The * tells the browser "give this frame all the remaining space" after the other fixed-size or percentage frames are laid out

72. The database design that consists of multiple tables that are linked together through matching data stored in each table is called a _____.

- A. hierarchical database
- B. network database
- C. object oriented database
- D. relational database

Ans: D

Explanation: A relational database stores data in multiple tables (relations) and links them via common fields (keys).

Hierarchical and network models pre-date the relational model and use tree or graph structures, respectively.

Object-oriented databases store objects directly, not normalized tables.

73. Which of the following SQL commands is used to save changes invoked by a transaction to the database?

- A. ROLLBACK
- B. COMMIT
- C. TRUNCATE
- D. DELETE

Ans: B

Explanation: COMMIT makes permanent all changes made in the current transaction.

ROLLBACK undoes them.

TRUNCATE and DELETE remove rows but do not manage transactional boundaries in the same way.

74. Which of the following queries is correct for using comparison operators in SQL?

- A. SELECT name, course_name FROM student WHERE age>50 and <80;
- B. SELECT name, course_name FROM student WHERE age>50 and WHERE age<80;
- C. SELECT name, course_name FROM student WHERE age>50 and age <80;
- D. SELECT name, course_name FROM student WHERE age greater than 50 and less than 80;

Ans: C

Explanation: When combining comparison operators in SQL, each comparison must be complete. The correct syntax is:

```
SELECT name, course_name
FROM student
WHERE age > 50
```

AND age < 80;

Options A and B omit the column on the second comparison; D is not valid SQL.

75. Which of the following SQL statements is equivalent to: Select * from R , S

- A. Select * from R natural join S
- B. Select * from R cross join S
- C. Select * from R union join S
- D. Select * from R inner join S

Ans: B

Explanation: SELECT * FROM R, S; is the Cartesian product of R and S.

In SQL-92 (and later), this is explicitly written as a CROSS JOIN:

SELECT *

FROM R

CROSS JOIN S;

A NATURAL JOIN performs an equijoin on columns of the same name.

An INNER JOIN requires an ON or USING clause to define the join condition.

SOLVED PREVIOUS YEAR QUESTIONS - 2022

1. A shopkeeper fixes the marked price of an item 35% above its cost price. The percentage of discount allowed to gain 8% is:

- A. 43%
- B. 27%
- C. 20%
- D. 31%

Ans : C

Explanation: Let the cost price be ₹100.

He marks it up by 35%, so the marked price (MP) becomes:

$$MP = 100 \times (1 + 0.35) = ₹135.$$

He wants an 8% profit on cost, so the selling price (SP) must be

$$SP = 100 \times (1 + 0.08) = ₹108.$$

The discount d% is given by

$$d = \frac{MP - SP}{MP} \times 100 = \frac{135 - 108}{135} \times 100 = \frac{27}{135} \times 100 = 20\%.$$

Thus a 20% discount on ₹135 brings the price down to ₹108, yielding exactly an 8% gain on cost.

2. Choose the odd one out:

- A. Mohammed Rafi
- B. K.L. Saigal
- C. Naushad
- D. Adnan Sami

Ans : C

Explanation: Mohammed Rafi, K.L. Saigal and Adnan Sami are all primarily celebrated playback singers. Naushad is a legendary music composer

(he composed music for hundreds of Hindi films), not a singer. Therefore, Naushad is the odd one out.

3. Which of the following options is the correct alphabetical order of the four words given as:

- Rumbustious, Rumanian, Rumour, Rumble
- A. Rumanian, Rumble, Rumour, Rumbustious
- B. Rumour, Rumbustious, Rumble, Rumanian
- C. Rumanian, Rumbustious, Rumour, Rumble
- D. Rumble, Rumour, Rumbustious, Rumanian

Ans : C

Explanation: All four begin "Rum-". Compare their 4th letters:

Rumanian → "a"

Rumbustious → "b"

Rumour → "o"

Rumble → "p"

Alphabetical order of these letters is a < b < o < p, so the correct sequence is:

Rumanian → Rumbustious → Rumour → Rumble.

4. If 'ORANGE' is coded as 'MTYPEG' in a certain language, then how will 'CHILLY' be coded in that language?

- A. AJGNNW
- B. AJGNJA
- C. AJKNNW
- D. AJGOOW

Ans : B

Explanation: Observe the pattern for ORANGE → M T Y P E G:

Letters in odd positions (1st, 3rd, 5th...) are each shifted backward by 2 in the alphabet.

Letters in even positions (2nd, 4th, 6th...) are each shifted forward by 2.

Apply to CHILLY:

Position	Original	Shift	Result
1 (odd)	C	-2 ⇒ A	A
2 (even)	H	+2 ⇒ J	J
3 (odd)	I	-2 ⇒ G	G
4 (even)	L	+2 ⇒ N	N
5 (odd)	L	-2 ⇒ J	J
6 (even)	Y	+2 ⇒ A	A

So CHILLY → A J G N J A, i.e. AJGNJA.

5. Choose the odd one out from the following:

- A. Morarji Desai
- B. V.P. Singh
- C. Narendra Modi
- D. Sardar Patel

Ans : D

Explanation: Morarji Desai, V.P. Singh and Narendra Modi have all served as Prime Ministers of India.

Sardar Vallabhbhai Patel, though a towering figure in India's independence movement and the first Deputy Prime Minister and Home Minister, never served as Prime Minister. Hence Sardar Patel is the odd one out.

6. Match List I with List II :

LIST I	LIST II
A. $\log_4 (\log_3 81) =$	I. 0
B. $3^4 \log_9 7 = 7^k$, then $k =$	II. 3
C. $2 \log_3 5 - 5 \log_3 2 =$	III. 1
D. $\log_2 [\log_2 (256)] =$	IV. 2

- A. A-I, B-III, C-II, D-IV
 B. A-I, B-III, C-IV, D-II
 C. A-III, B-IV, C-II, D-I
 D. A-III, B-IV, C-I, D-II

Ans : D

Explanation: A. $\log_3 81 = 4$, so $\log_4(4) = 1 \Rightarrow A-III$.

B. Interpret as $3^4(4 \cdot \log_9 7) = 7^k$.

$$4 \log_9 7 = 4 \frac{\ln 7}{\ln 9} = 4 \frac{\ln 7}{2 \ln 3} = 2 \frac{\ln 7}{\ln 3} = 2 \log_3 7$$

$$\Rightarrow 3^{2 \log_3 7} = (3^{\log_3 7})^2 = 7^2, \text{ so } k = 2 \Rightarrow B-IV.$$

C. Use the identity $a^{\log_c b} = b^{\log_c a}$.

Hence

$$2^{\log_3 5} - 5^{\log_3 2} = 5^{\log_3 2} - 5^{\log_3 2} = 0$$

$\Rightarrow C-I$.

D. $\log_2 256 = 8$, so $\log_2(8) = 3 \Rightarrow D-II$.

7. If 'MANGO' is coded as 'KCLIM' in a certain language then how will 'SWEETY' be coded in that language?

- A. QYCGRA
 B. QYCCRA
 C. QYGCRA
 D. YQC GRA

Ans : A

Explanation: Observe the rule on "ORANGE \rightarrow MTYPEG" and "MANGO \rightarrow KCLIM":

Odd-positioned letters (1st, 3rd, 5th...): shift backward by 2

Even-positioned letters (2nd, 4th, 6th...): shift forward by 2

Position	Letter	Shift	Result
1 (odd)	S	-2 \Rightarrow Q	Q
2 (even)	W	+2 \Rightarrow Y	Y
3 (odd)	E	-2 \Rightarrow C	C
4 (even)	E	+2 \Rightarrow G	G
5 (odd)	T	-2 \Rightarrow R	R
6 (even)	Y	+2 \Rightarrow A	A

Thus SWEETY \rightarrow QYCGRA.

8. Which among the following words comes first in a dictionary? Shrub, Shudder, Shroud, Shuttle

- A. Shrub
 B. Shuttle

- C. Shroud
 D. Shudder

Ans : C

Explanation: Compare the words letter by letter: All begin "Sh _".

Third letter: Shrub/Shroud have "r";

Shudder/Shuttle have "u". Since $r < u$, the "Sh r_" words come first.

Between Shroud ("o" as 4th letter) and Shrub ("u" as 4th), " $o < u$ ", so Shroud precedes Shrub.

9. Which of the following options is the correct alphabetical order of the four words given below? Sport, Squash, Sporadic, Sprout

- A. Sport, Sprout, Sporadic, Squash
 B. Sporadic, Sport, Sprout, Squash
 C. Sporadic, Sport, Squash, Sprout
 D. Squash, Sprout, Sport, Sporadic

Ans : B

Explanation: All start "Sp_". Third letters:

Spo- in Sport/Sporadic

Spr- in Sprout

Squ- in Squash

Since " $o < r < u$ ", all "Spo-" come first, then "Spr-", then "Squ-".

Between Sporadic and Sport (both "Spor-"), compare 5th letter: " $a < t$ ", so Sporadic comes before Sport.

10. Given below are two statements: one is labelled as Assertion A and the other is labelled as Reason R.

Assertion A : Military service should be made compulsory in our country.

Reason R : Every citizen should protect his country.

In the light of the above statements, choose the most appropriate answer from the options given below:

- A. Both A and R are correct and R is the correct explanation of A.
 B. Both A and R are correct but R is not the correct explanation of A.
 C. A is correct but R is not correct.
 D. A is not correct but R is correct.

Ans : A

Explanation: Assertion (A) states a policy proposal (compulsory military service) aimed at ensuring national defense readiness.

Reason (R) affirms the moral duty of every citizen to protect the nation.

R underpins and justifies A: mandatory service is one way to fulfill the obligation that "every citizen

should protect his country." Hence R is both true and the correct rationale for A.

11. Complete the series by filling the missing number: 2, 5, 14, 57, 284, ?

- A. 1,420
- B. 1,421
- C. 1,704
- D. 1,705

Ans : D

Explanation: Observe that each term is generated from the previous one by multiplying by n (the term's position) and then adding an alternating ± 1 :

$$t_n = n \cdot t_{n-1} + (-1)^n.$$

$$t_2 = 2 \cdot 2 + (+1) = 5$$

$$t_3 = 3 \cdot 5 + (-1) = 14$$

$$t_4 = 4 \cdot 14 + (+1) = 57$$

$$t_5 = 5 \cdot 57 + (-1) = 284$$

Thus

$$t_6 = 6 \cdot 284 + (+1) = 1,704 + 1 = \boxed{1,705}.$$

12. If

$$A = \begin{bmatrix} \cos B & -\sin B \\ \sin B & \cos B \end{bmatrix}$$

Then $A + A^{-1} - I$ equals

- A. $\frac{\pi}{3}$
- B. $\frac{\pi}{6}$
- C. π
- D. $\frac{3\pi}{2}$

Ans : A

Explanation: A is a rotation-by-B matrix. Its inverse is rotation by $-B$:

$$A^{-1} = \begin{pmatrix} \cos B & +\sin B \\ -\sin B & \cos B \end{pmatrix}.$$

Sum them:

$$A + A^{-1} = \begin{pmatrix} 2 \cos B & 0 \\ 0 & 2 \cos B \end{pmatrix}.$$

Subtract the identity I:

$$A + A^{-1} - I = \begin{pmatrix} 2 \cos B - 1 & 0 \\ 0 & 2 \cos B - 1 \end{pmatrix}.$$

For this to be the zero matrix, we need

$$2 \cos B - 1 = 0 \Rightarrow \cos B = \frac{1}{2} \Rightarrow B = \frac{\pi}{3}.$$

Hence the required angle is $\pi/3$.

13. The number of 7-digit numbers whose sum of the digits equals 10 and which are formed by using the digits 1, 2, and 3 only is:

- A. 55
- B. 66
- C. 77
- D. 88

Ans : C

Explanation: Let the seven digits be x_1, \dots, x_7 with each $x_i \in \{1, 2, 3\}$ and

Define $y_i = x_i - 1$. Then $y_i \in \{0, 1, 2\}$ and $y_1 + \dots + y_7 = 10 - 7 = 3$.

We count nonnegative integer solutions to $y_1 + \dots + y_7 = 3$ with each $y_i \leq 2$

Without the " ≤ 2 " restriction, the count is

$$\binom{3+7-1}{7-1} = \binom{9}{6} = 84.$$

Subtract those solutions where some $y_i \geq 3$. If say $y_1 \geq 3$, set $z_1 = y_1 - 3 \geq 0$

Then

$$z_1 + y_2 + \dots + y_7 = 0$$

Has $\binom{6}{6} = 1$ solution. There are 7 choices for

which variable is ≥ 3 and no two can both exceed 2 when the sum is only 3, so no double-counts.

Thus the valid count is $84 - 7 = \boxed{77}$

14. If each of three boxes contains 3 white and 1 black ball, 2 white and 2 black balls, and 1 white and 3 black balls respectively, one ball is drawn at random from each box, then the probability of drawing 1 white and 1 black ball is:

- A. $\frac{13}{32}$
- B. $\frac{1}{4}$
- C. $\frac{1}{32}$
- D. $\frac{3}{16}$

Ans : A

Explanation: let W_i and B_i be the events of white or black from box i .

$$P(W_1) = \frac{3}{4}, P(B_1) = \frac{1}{4}; P(W_2) = \frac{1}{2}, P(B_2) = \frac{1}{2}; P(W_3) = \frac{1}{4}, P(B_3) = \frac{3}{4}$$

We want exactly one white (and hence two blacks) in the three draws. By symmetry,

$$P(\text{exactly one white}) = \sum_{i=1}^3 P(W_i \text{ and both others black}).$$

Compute each term:

White from Box 1, blacks from 2 & 3

$$\frac{3}{4} \times \frac{1}{2} \times \frac{3}{4} = \frac{9}{32}.$$

White from Box 2, blacks from 1 & 3:

$$\frac{1}{2} \times \frac{1}{4} \times \frac{3}{4} = \frac{3}{32}.$$

White from Box 3, blacks from 1 & 2:

$$\frac{1}{4} \times \frac{1}{4} \times \frac{1}{2} = \frac{1}{32}.$$

$$\frac{9 + 3 + 1}{32} = \boxed{\frac{13}{32}}.$$

15. Let $f(x) = |x - 1|$. Then the points x where $f(x)$ is not differentiable are:

- A. 0, 1
- B. 2, 1
- C. 1
- D. none

Ans : C

Explanation: The absolute-value function $|x-1|$ has a "corner" at $x=1$. Everywhere else it is either $(x-1)$ or $-(x-1)$, both of which are differentiable. Only at the cusp $x=1$ does the left- and right-derivative disagree, so f fails to be differentiable only at $x=1$.

16. if $[2, \infty)$ be the domain of the function $f(x) = x^2 - 4x + 5$, then the range of f

- A. $[1, \infty)$
- B. $[2, \infty)$
- C. $(3, 5)$
- D. $(-\infty, \infty)$

Ans : A

Explanation: Complete the square:

$$f(x) = x^2 - 4x + 5 = (x - 2)^2 + 1.$$

On the domain $x \geq 2$ the smallest value of

$(x - 2)^2$ is (at

$x = 2$), so the minimum of f is 1. As

$x \rightarrow \infty, (x - 2)^2 \rightarrow \infty$, so $f(x) \rightarrow \infty$. Hence the range is $[1, \infty)$

17. The function

$$f(x) = \frac{\ln(1+ax) - \ln(1-bx)}{x}$$

is not defined at $x = 0$. What value may be assigned to f at $x = 0$, so that it is continuous?

- A. $a + b$
- B. $a - b$
- C. $b - a$
- D. $\ln a + \ln b$

Ans : A

Explanation: $f(x) = \frac{\ln(1+ax) - \ln(1-bx)}{x}, x \neq 0$.

To make f continuous at $x = 0$, we assign

$f(0) = \lim_{x \rightarrow 0} f(x)$. Using the expansion

$$\ln(1+u) = u + o(u),$$

$$\ln(1+ax) = ax + o(x), \ln(1-bx) = -\beta x + o(x),$$

So,

$$\ln(1+ax) = ax + o(x), \ln(1-bx) = -\beta x + o(x),$$

Divide by x and let $x \rightarrow 0$:

$$\lim_{x \rightarrow 0} f(x) = a + \beta.$$

Hence assign

$$f(0) = a + \beta.$$

18. The area enclosed between the graphs of $y = x^3$ and the lines $x = 0, y = 1, y = 8$ is:

- A. 7
- B. 12
- C. $\frac{45}{4}$
- D. $\frac{21}{8}$

Ans : C

Explanation: Area enclosed by $y = x^3$ and the lines $x = 0, y = 1, y = 8$

We regard y as running from 1 to 8, and for each y the region runs in x from 0 to $y^{1/3}$. Thus

$$\begin{aligned} AB &= \int_0^1 [x]_{x=0}^{-2n+1} dx - \int_1^2 x^{3/2} dy = \frac{8}{4!} \cdot 4! \cdot \frac{3}{4} = (16 - 1) \\ &= \frac{3}{4} \times 13 = \frac{15}{4} \end{aligned}$$

19. If the vertices of a triangle are

$O(0, 0), A(a, 0)$ and $B(0, a)$, then the distance between its circumcentre and orthocentre is:

- A. $\frac{a}{2}$
- B. $\frac{a}{\sqrt{2}}$
- C. $\sqrt{2}a$
- D. $\frac{a}{4}$

Ans : B

Explanation: Triangle with vertices

$O(0, 0), A(a, 0), B(0, a)$

- It is a right triangle at O .
- Orthocenter of a right triangle = the right-angle vertex = $O(0, 0)$.
- Circumcenter = midpoint of hypotenuse AB : $\left(\frac{a}{2}, \frac{a}{2}\right)$
- Distance between them:

$$\sqrt{\left(\frac{a}{2}\right)^2 + \left(\frac{a}{2}\right)^2} = \sqrt{\frac{a^2}{4} + \frac{a^2}{4}} = \sqrt{\frac{a^2}{2}} = \frac{a}{\sqrt{2}}$$

20. The straight lines

$x + y = 0, 3x + y - 4 = 0$ and $x + 3y - 4 = 0$

form a triangle which is:

- A. Right angled
- B. Equilateral
- C. Isosceles
- D. Isosceles and right angled

Ans : C

Explanation: The lines :

$L_1: x + y = 0, L_2: 3x + y - 4 = 0, L_3: x + 3y - 4 = 0$

meet in three points which form a triangle.

Computing the three intersection points (omitted

here) shows two sides equal in length but none perpendicular. Hence the triangle is isosceles but not right-angled.

Isosceles only.

21. If one of the lines of $ax^2 + 2hxy + by^2 = 0$ bisects the angle between the axes in the first quadrant, then:

- A. $h^2 - ab = 0$
- B. $h^2 + ab = 0$
- C. $(a + b)^2 = h^2$
- D. $(a + b)^2 = 4h^2$

Ans :D

Explanation: The general second-degree homogeneous equation

$$ax^2 + 2hxy + by^2 = 0$$

factors into two straight lines through the origin. If one of them is the bisector $y = x$ (first-quadrant bisector of the axes), then substituting $y = x$ gives

$$a^2 + 2ab + b^2 = (a+b)^2 = 0 \Rightarrow a+b=0 \Rightarrow (a-b)^2 = a^2$$

22. What is the value of

$$[\tan^2(90^\circ - \theta) - \sin^2(90^\circ - \theta)] \csc^2(90^\circ - \theta) \cot^2(90^\circ - \theta)$$

- A. 0
- B. 1
- C. -1-1-1
- D. 2

Ans :B

Explanation: We wish to simplify the expression

$$[\tan^2(90^\circ - \theta) - \sin^2(90^\circ - \theta)] \csc^2(90^\circ - \theta) \cot^2(90^\circ - \theta).$$

Apply co-function identities for angles of the form $90^\circ - \theta$

$$\cot(A - B) = \frac{\cos A \sin B - \sin A \cos B}{\sin A \cos B - \cos A \sin B} = \frac{\cos A \sin B - \sin A \cos B}{\sin(A - B)} = \frac{1}{\tan(A - B)}$$

Substituting in, the expression becomes $[\cot^2 \theta - \cos^2 \theta] \sec^2 \theta \tan^2 \theta$.

Combine terms inside the bracket:

$$\begin{aligned} \cot^2 \theta - \cos^2 \theta &= \frac{\cos^2 \theta}{\sin^2 \theta} - \cos^2 \theta = \cos^2 \theta \left(\frac{1}{\sin^2 \theta} - 1 \right) = \cos^2 \theta \frac{1 - \sin^2 \theta}{\sin^2 \theta} \\ &= \cos^2 \theta \frac{\cos^2 \theta \cos^2 \theta}{\sin^2 \theta} = \frac{\cos^4 \theta}{\sin^2 \theta} \end{aligned}$$

Multiply by $\sec^2 \theta$ and $\tan^2 \theta$

$$\frac{\cos^4 \theta}{\sin^2 \theta} \times \sec^2 \theta \times \tan^2 \theta = \frac{\cos^4 \theta}{\sin^2 \theta} \times \frac{1}{\cos^2 \theta} \times \frac{\sin^2 \theta \cos^4 \theta}{\cos^2 \theta} = \frac{\cos^4 \theta \sin^2 \theta}{\cos^2 \theta \cos^2 \theta} = 1.$$

Thus the entire expression simplifies neatly to 1.

23. If $A + B = 45^\circ$, then $(1 + \tan A)(1 + \tan B)$ is equal to:

- A. 1
- B. 2
- C. 3
- D. 4

Ans :B

Explanation: If $A + B = 45^\circ$ evaluate

$$(1 + \tan A)(1 + \tan B)$$

Set

$$S = (1 + \tan A)(1 + \tan B) = 1 + \tan A + \tan B + \tan A \tan B$$

We know

$$\tan(A + B) = 1 = \frac{\tan A + \tan B}{1 - \tan A \tan B} \Rightarrow \tan A + \tan B = 1 - \tan A \tan B.$$

Substitute

$$S = 1 + (1 - \tan A \tan B) + \tan A \tan B = 2.$$

24. If \vec{a} and \vec{b} are two unit vectors such that

$\vec{a} + 2\vec{b}$ and $5\vec{a} - 4\vec{b}$ are perpendicular to each other, then the angle between \vec{a} and \vec{b} is:

- A. 45°
- B. 60°
- C. $\cos^{-1}\left(\frac{1}{3}\right)$
- D. $\cos^{-1}\left(\frac{2}{7}\right)$

Ans :B

Explanation: a, b are unit vectors with

$$(a + 2b) \cdot (5a - 4b) = 0.$$

Expand:

$$5a \cdot a - 4a \cdot b + 10b \cdot a - 8b \cdot b = 5 - 4(a \cdot b) + 10(a \cdot b) - 8 = 0.$$

So

$$(5 - 8) + (-4 + 10)(a \cdot b) = 0 \Rightarrow -3 + 6(a \cdot b) = 0 \Rightarrow a \cdot b = \frac{1}{2}$$

Hence the angle between them is

$$\cos^{-1}(1/2) = 60^\circ.$$

25. Let $\vec{a} = \hat{i} - \hat{j}$, $\vec{b} = \hat{i} + \hat{j} + \hat{k}$ and \vec{c} be a vector such that $(\vec{a} \times \vec{c}) + \vec{b} = \mathbf{0}$ and $\vec{a} \cdot \vec{c} = 4$, then $|\vec{c}|^2$ is equal to

- A. 8
- B. $\frac{19}{2}$
- C. 9
- D. $\frac{17}{2}$

Ans :B

Explanation: $a = (1, -1, 0)$, $b = (1, 1, 1)$. Find c

so that

$$a \times c + b = \mathbf{0}, a \cdot c = 4,$$

and compute $|\vec{c}|^2$

write $c = (x, y, z)$

$$a \times c = (-z, -z, x + y)$$

$$a \times c + b = \mathbf{0}$$

$$(-z + 1, -z + 1, x + y + 1) = 0$$

$$z = 1, x + y = -1.$$

$$\mathbf{a} \cdot \mathbf{c} = x - y = 4.$$

Solve:

$$\begin{cases} x + y = -1, \\ x - y = 4, \end{cases}$$

$$x = \frac{3}{2}, y = -\frac{5}{2}$$

Thus, $\mathbf{c} = (\frac{3}{2}, -\frac{5}{2}, 1)$ so,

$$|\mathbf{c}|^2 = (\frac{3}{2})^2 + (-\frac{5}{2})^2 + 1^2 = \frac{9}{4} + \frac{25}{4} + 1 = \frac{34}{4} + 1 = \frac{19}{2}.$$

26, if $\vec{a}, \vec{b}, \vec{c}$ are unit vectors such that $(\vec{a} \times \vec{b}) \cdot (\vec{c} \times \vec{d}) = 1$ and $\vec{a} \cdot \vec{c} = \frac{1}{2}$ then

- A. Only $\vec{a}, \vec{b}, \vec{c}$ are non-coplanar
- B. Only $\vec{a}, \vec{b}, \vec{d}$ are non-coplanar
- C. Both $\vec{a}, \vec{b}, \vec{c}$ and $\vec{a}, \vec{b}, \vec{d}$ are non-coplanar
- D. Both $\vec{a}, \vec{b}, \vec{c}$ and $\vec{a}, \vec{b}, \vec{d}$ are coplanar

Ans : C

Explanation: $(\mathbf{a} \times \mathbf{b}) \cdot (\mathbf{c} \times \mathbf{d}) = 1$ and $\mathbf{a} \cdot \mathbf{c} = \frac{1}{2}$

with all four unit vectors.

- A nonzero value of $(\mathbf{a} \times \mathbf{b}) \cdot (\mathbf{c} \times \mathbf{d})$ implies that the two normals $\mathbf{a} \times \mathbf{b}$ and $\mathbf{c} \times \mathbf{d}$ are not perpendicular, so the planes spanned by (\mathbf{a}, \mathbf{b}) and by (\mathbf{c}, \mathbf{d}) are neither parallel nor perpendicular in a degenerate way.
- To have $\mathbf{a} \cdot \mathbf{c} = \frac{1}{2}$, \mathbf{a} and \mathbf{c} are also not collinear.

Hence both triples $(\mathbf{a}, \mathbf{b}, \mathbf{c})$ and $(\mathbf{a}, \mathbf{b}, \mathbf{d})$ must be non-coplanar (each set spans a genuine 3D volume).

27. Let $A = \{1, 2, 3\}$ and consider the relation $R = \{(1, 1), (2, 2), (3, 3), (1, 2), (1, 3)\}$. Then R is:

- A. Reflexive but not symmetric
- B. Reflexive but not transitive
- C. Symmetric and transitive
- D. Equivalence relation

Ans : A

Explanation:

$$A = \{1, 2, 3\}, R =$$

$$\{(1, 1), (2, 2), (3, 3), (1, 2), (1, 3)\}.$$

- Reflexive? Yes, (x, x) for each $x \in A$ appears.
- Symmetric? No, $(1, 2) \in R$ but $(2, 1) \notin R$
- Transitive? Check the only potential chain: $(1, 2), (2, 2) \Rightarrow (1, 2)$ which is in R; similarly

$(1, 3), (3, 3) \Rightarrow (1, 3)$ There is no violation. So R is transitive.

Thus R is reflexive, transitive, but not symmetric.

28. A spring is being moved up and down. An object is attached to the end of the spring that undergoes a vertical displacement. The displacement is given by the equation $y = 3.50 \sin t + 1.20 \sin 2t$. Find the first two values of t (in seconds) for which $y = 0$

- A. $t = 0, \frac{\pi}{4}$
- B. $t = 0, \frac{\pi}{2}$
- C. $t = 0, \pi$
- D. $t = 0, \frac{\pi}{6}$

Ans : C

Explanation: $y = 3.50 \sin t + 1.20 \sin 2t$. solve $y = 0$

$$\sin 2t = 2 \sin t \cos t \Rightarrow y = \sin t (3.50 + 2.40 \cos t) = 0.$$

Two cases:

$$\sin t = 0 = t = 0, \pi, 2\pi, \dots$$

$$3.50 + 2.40 \cos t = 0 = \cos t = -3.50/2.40$$

impossible (magnitude > 1).

Hence the first two zeros are

$$t = 0, \pi.$$

29. A ball is thrown off the edge of a building at an angle of 60° and with an initial velocity of 5 meters per second. The equation that represents the horizontal distance of the ball x is $x = v_0 (\cos \theta) t$, where v_0 is the initial velocity, θ is the angle at which it is thrown, and t is the time in seconds. About how far will the ball travel in 10 seconds?

- A. $25\sqrt{3}$
- B. $50\sqrt{2}$
- C. 25m
- D. $\frac{25}{2} m$

Ans : C

Explanation: A ball is thrown at 60° , speed 5 m/s. Horizontal distance after t seconds:

$$x = v_0 \cos \theta t = 5 \cos 60^\circ t = 5 \cdot \frac{1}{2} t = \frac{5t}{2}.$$

At $t = 10$

$$x = \frac{5 \cdot 10}{2} = 25 \text{ m}$$

30. Let n be a positive integer and

$$R = \{(a, b) \in \mathbb{Z} \times \mathbb{Z} \mid \mathbf{a} - \mathbf{b} =$$

$$nm \text{ for some } m \in \mathbb{Z}\}.$$

Then R is;

- A. Reflexive on \mathbb{Z}
- B. Symmetric
- C. Transitive
- D. Equivalence relation on \mathbb{Z}

Ans : D

Explanation: : On \mathbb{Z} , define

$$R = \{(a, b) \mid a - b = nm \text{ for some } m \in \mathbb{Z}\},$$

i.e. $a \equiv b \pmod{n}$ Congruence mod n is an equivalence relation (reflexive, symmetric, transitive) on \mathbb{Z} .

Equivalence relation on \mathbb{Z} .

31. The numbers $a, b, c,$ and d are in a geometric progression (GP) and are in ascending order such that $a+d=112$ and $b+c=48$. If the GP is continued with aa as the first term, then the sum of the first six terms is:

- A. 1156
- B. 1256
- C. 1356
- D. 1456

Ans :D

Explanation: The numbers a, b, c, d are in a GP in ascending order, and

$$a + d = 112, b + c = 48.$$

Let the common ratio be $r > 1$. Then

$$b = ar, c = ar^2, d = ar^3.$$

So,

$$a + ar^3 = 112, ar + ar^2 = 48.$$

Divide the second equation by a :

$$r + r^2 = \frac{48}{a},$$

and from the first, $a = \frac{112}{1+r^3}$ Substitute into

$$ar + ar^2 = 48:$$

$$\frac{112r(1+r)}{1+r^3} = 48 \Rightarrow 7r(1+r) = 3(1+r^3) \Rightarrow 3r^3 - 7r^2 - 7r + 3 = 0.$$

The positive roots are $r = 3$ (and $r = \frac{1}{3}, -1$), so

$r = 3$. Then

$$a = \frac{112}{1+27} = \frac{112}{28} = 4,$$

and the first four terms are 4,12,36,108.

Continuing two more terms:

$$t_5 = 4 \cdot 3^4 = 324, t_6 = 4 \cdot 3^5 = 972.$$

Thus the sum of the first six terms is

$$4 + 12 + 36 + 108 + 324 + 972 = 1456.$$

32. Given below are two statements:

Statement I: If $A \subseteq B$, then B can be expressed as $B = A \cup (A \cap B)$ and $P(A) > P(B)$.

Statement II: If A and B are independent events, then $(A \cap B), (A \cap B^c)$ and $(A^c \cap B)$ are also independent .

In the light of the above statements, choose the most appropriate answer from the options given below:

- A. Both Statement I and Statement II are true
- B. Both Statement I and Statement II are false
- C. Statement I is true but Statement II is false
- D. Statement I is false but Statement II is true

Ans : B

Explanation: While one can show each of those pairs is pairwise independent with either A or B , the three events are not mutually independent (in fact some are disjoint), so the claim "these three are independent events" is false. Hence both statements are false, and the correct choice is

33. Given the following truth table:

A	B	Output
0	0	1
0	1	0
1	0	0
1	1	1

Which of the following Boolean functions does it represent?

- A. OR
- B. XOR
- C. NOR
- D. XNOR

Ans : D

Explanation: The truth table

is 1 exactly when A and B are equal, i.e. it is the XNOR function.

34. if \vec{a}, \vec{b} and \vec{c} are unit vectors, then

$|\vec{a} - \vec{b}|^2 + |\vec{b} - \vec{c}|^2 + |\vec{c} - \vec{a}|^2$ does not exceed:

- A. 4
- B. 9
- C. 8
- D. 6

Ans :B

Explanation: The sum of the three dot-products is minimized when each pair makes

120° (dot = $-\frac{1}{2}$) giving total $-\frac{3}{2}$. Hence the expression's maximum is

$$2 \left(3 - \left(-\frac{3}{2} \right) \right) = 2 \times \frac{9}{2} = \boxed{9}.$$

So it does not exceed 9.

35. The product of two four-bit positive binary numbers 1011 and 0011 is:

- A. 100011
- B. 100001
- C. 100101
- D. 100111

Ans :B

Explanation: Binary multiplication :

$$1011_2 = 11_{10}, 0011_2 = 3_{10} \Rightarrow 11 \times 3 = 33 = 100001_2.$$

36. if

$$\vec{a} = \hat{i} + \hat{j} + \hat{k}, \vec{a} \cdot \vec{b} = 1 \text{ and } \vec{a} \times \vec{b} = \hat{j} - \hat{k} \text{ then}$$

\vec{b} is equal to:

- A. $\hat{i} - \hat{j} + \hat{k}$
- B. $2\hat{i} - \hat{k}$
- C. \hat{i}
- D. $2\hat{j} - \hat{k}$

Ans :C

Explanation: $a = \hat{i} + \hat{j} + \hat{k}$ and we seek unit

$b = (x, y, z)$ satisfying

$$a \cdot b = x + y + z = 1, a \times b = \hat{j} - \hat{k} = (0, 1, -1).$$

Compute $a \times b = (z - y, x - z, y - x)$ Equating to $(0, 1, -1)$ gives

$$z - y = 0, x - z = 1, y - x = -1.$$

From these $z = y$ and $x - y = 1$. Together with

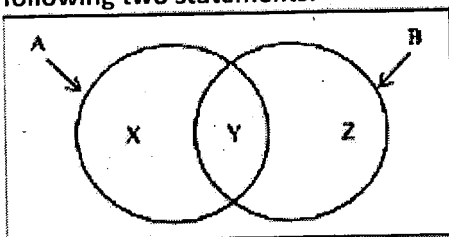
$$x + y + z = 1 \Rightarrow x + 2y = 1 \text{ and } x = y + 1,$$

solve :

$$(y + 1) + 2y = 1 \Rightarrow 3y + 1 = 1 \Rightarrow y = 0, x = 1, z = 0.$$

Thus $b = \hat{i}$

37. Consider the diagram given below and the following two statements:



Statement I: Events A and B can be expressed as:

$$A = (A \cap B) \cup Y$$

$$B = (A \cap B) \cup Z$$

Statement II: Events A and B can be expressed as:

$$A = X - Y$$

$$B = Y + Z$$

In the light of the above statements, choose the most appropriate answer from the options given below:

- A. Both Statement I and Statement II are true
- B. Both Statement I and Statement II are false

- C. Statement I is true but Statement II is false
- D. Statement I is false but Statement II is true

Ans : B

Explanation: Venn-Diagram Regions

- Region X: the part belonging only to A (i.e. $A \setminus B$).
- Region Y: the intersection $A \cap B$.
- Region Z: the part belonging only to B (i.e. $B \setminus A$).

Hence the true decompositions are

$$A = X \cup Y, B = Y \cup Z.$$

Statement I

Claim:

$$A = (A \cap B) \cup Y, B = (A \cap B) \cup Z.$$

Since $A \cap B = Y$ the first equation becomes

$$A = Y \cup Y = Y,$$

which omits the X-region entirely.

The second equation, $B = Y \cup Z$ is actually correct.

Because the formula for A is wrong, Statement I is false.

Statement II

Claim:

$$A = X - Y, B = Y + Z.$$

- Interpreting $X - Y$ as $X \setminus Y$ since X and Y are disjoint $X \setminus Y = X$, so this again leaves out the overlap Y.
- Interpreting $Y + Z$ as $Y \cup Z$ correctly recovers B.

Because the formula for A fails again, Statement II is false.

38. The simplified form of the Boolean expression $AB + AB'$ is :

- A. A
- B. B
- C. $1 + A$
- D. $1 + B'$

Ans :A

Explanation: The given expression is $AB + AB'$.

Factor out the common term A:

$$AB + AB' = A(B + B').$$

Use the complementarity law in Boolean algebra:

$$B + B' = 1.$$

Therefore

$$A(B + B') = A \times 1 = A.$$

Hence the expression simplifies exactly to A.

39. The representation of -11 in sign-and-magnitude form is:

- A. 11011
- B. 010111

C. 10011

D. 01110

Ans : A

Explanation: In sign-and-magnitude representation:

1. Use the most significant bit as a sign bit:

0 for positive

1 for negative

2. The remaining bits encode the magnitude in standard binary.

To represent -11:

The magnitude 11_{10} in binary is 1011_2 (since $8 + 2 + 1 = 11$).

As a negative number, the sign bit is 1, followed by the 4-bit magnitude:

$$1 \quad 1011 = 11011.$$

sign = negative binary for 11

Therefore the correct sign-and-magnitude form of -11 is 11011.

40. 1001 is the 2's complement representation of:

A. -7

B. +9

C. +6

D. -6

Ans: A

Explanation: Interpreting 1001 as a 4-bit two's-complement number:

1. The most-significant bit (MSB) is 1, so the number is negative.

2. To find its magnitude, take the two's-complement (invert and add 1):

1001 (original)

→ invert → 0110

→ add 1 → 0111 (which is 7 in decimal)

Hence the value is -7-7-7.

Alternatively, summing bit-weights with MSB as -8:

$$1001_2 = (-8) + 0 + 0 + 1 = -7.$$

41. Match List I with List II:

LIST I		LIST II	
A.	$(x + y)'$	I.	I
B.	$x + 1$	II.	$x' + y'$
C.	$(xy)'$	III.	$x' \cdot y'$
D.	$x + 0$	IV.	x

Choose the correct answer from the options given below:

A. A-I, B-II, C-III, D-IV

B. A-I, B-IV, C-II, D-III

C. A-II, B-I, C-IV, D-II

D. A-III, B-I, C-II, D-IV

Ans :D

Explanation: $(x + y)'$ By De Morgan's law,

$$(x + y)' = x' \cdot y',$$

which corresponds to III.

$x + 1$ In Boolean algebra, 1 is the absorbing element for OR, so

$$x + 1 = 1,$$

which is I.

$(x y)'$ Again by De Morgan's law,

$$(x y)' = x' + y',$$

which matches II.

$x + 0$ Zero is the identity element for OR, hence

$$x + 0 = x,$$

which is IV.

42. Given below are two statements: one is labelled as Assertion A and the other is labelled as Reason R.

Assertion A: Carbon Monoxide when inhaled causes death.

Reason R: Carbon monoxide combines with haemoglobin.

In the light of the above statements, choose the most appropriate answer from the options given below:

A. Both A and R are true, and R is the correct explanation of A.

B. Both A and R are true, but R is not the correct explanation of A.

C. A is true, but R is false.

D. A is false, but R is true.

Ans : A

Explanation: A is true because inhaled carbon monoxide (CO) binds to haemoglobin in the blood, severely reducing the blood's ability to carry oxygen. Without oxygen delivery to vital organs, death can result.

R is true—CO has a much higher affinity for haemoglobin than oxygen does, forming carboxyhaemoglobin.

R correctly explains A: it is precisely this binding that prevents oxygen transport, leading to hypoxia and ultimately death.

43. Given below are two statements: one is labelled as Assertion A and the other is labelled as Reason R.

Assertion A: In a class of 40 students, 22 drink Sprite, 10 drink Sprite but not Pepsi. Then the number of students who drink both Sprite and Pepsi is 15.

Reason R: For any two finite sets A and B,
 $n(A) = n(A - B) + n(A \cap B)$

In the light of the above statements, choose the most appropriate answer from the options given below:

- A. Both A and R are correct, and R is the correct explanation of A.
- B. Both A and R are correct, but R is not the correct explanation of A.
- C. A is correct, but R is not correct.
- D. A is not correct, but R is correct.

Ans : D

Explanation: By the set-formula in R (which is valid),

$$n(S) = n(S \setminus P) + n(S \cap P).$$

We know $n(S) = 22$ and $n(S \setminus P) = 10$, so
 $n(S \cap P) = 22 - 10 = 12$.

Assertion A claims this number is 15, which is incorrect.

Reason R is a correct general identity in set-theory.

44. Universities in India are preferring traditional attire during convocations.

- A. Indian Universities are against western dresses.**
- B. Indian universities want to promote traditional dresses.**
- C. Indians love to celebrate occasions traditionally.**
- D. Indian traditional dresses are better than western wear.**
- E. Western wear is banned by the government.**

Choose the correct answer from the options given below:

- A. B and C only
- B. A, B, and C only
- C. A, B, and D only
- D. D and E only

Ans : A

Explanation: B is necessary. Preferring traditional attire presumes an intention to promote or showcase it at such ceremonies.

C is also a reasonable cultural assumption. The choice of traditional dress at a joyful event like convocation reflects a broader value—that Indians, as a society, appreciate and “love” marking special occasions in a traditional manner. A is not required (preferring one style doesn’t imply opposition to another).

D and E are unfounded: there’s no claim that traditional dress is better than western, nor that western wear is banned.

Thus only B and C follow logically.

45. Match List I with List II:

LIST I	LIST II
A. If 4 th term of a G.P. is square of its second term, and its first term is 3, then common ratio is	I. 5
B. The first term of an A.P. is 5, the last term is 45 and the sum of the terms is 400. The number of terms is	II. 5/2
C. The sum of three numbers which are in A.P. is 27 and the sum of their squares is 293. Then the common difference is	III. 16
D. The fourth and 54 th terms of an A.P. are, respectively, 6 and 61. The common difference is	IV. 3

Choose the correct answer from the options given below:

- A. A-IV, B-III, C-I, D-II
- B. A-III, B-II, C-I, D-IV
- C. A-II, B-III, C-I, D-IV
- D. A-II, B-I, C-II, D-IV

Ans : A

Explanation: A. 4th term of GP is square of its 2nd term; $\$a=3\$$

- In a GP with first term $\$a\$$ and ratio $\$r\$$,
 2nd term $\$=ar=3r\$$,
 4th term $\$=ar^3=3r^3\$$.

• Condition:

$$3r^3 = (3r)^2 = 9r^2 \Rightarrow 3r^3 - 9r^2 = 0 \Rightarrow r^2(r - 3) = 0 \Rightarrow r = 3.$$

Match: A \rightarrow IV (3)

B. AP with first term $\$=5\$$, last term $\$=45\$$, sum $\$=400\$$

• Let number of terms be $\$n\$$. Then

$$S = \frac{n}{2} (a_1 + a_n) = \frac{n}{2} (5 + 45) = 25n = 400 \Rightarrow n = \frac{400}{25} = 16.$$

Match: B \rightarrow III (16)

C. Three numbers in AP: $\$(a - d), a, (a + d)\$$

• Sum: $\$(a - d) + a + (a + d) = 3a = 27\$ \Rightarrow \$a = 9\$$.

• Sum of squares:

$$(9 - d)^2 + 9^2 + (9 + d)^2 = (81 - 18d + d^2) + 81 + (81 + 18d + d^2) = 243 + 2d^2 = 293 \Rightarrow 2d^2 = 50 \Rightarrow d^2 = 25 \Rightarrow d = \pm 5.$$

Match: C \rightarrow I (5)

D. AP whose 4th term is 64 and 54th term is -61

• If the AP is $\$(a, a+d, \dots)\$$, then

$$\begin{cases} a + 3d = 64, \\ a + 53d = -61. \end{cases}$$

Subtract first from second:

$$(a + 53d) - (a + 3d) = -61 - 64 \Rightarrow 50d = -125 \Rightarrow d = -\frac{125}{50} = -\frac{5}{2}$$

Match: D \rightarrow II $(-5/2)$

46. Given below are two statements: one is labelled as Assertion A and the other is labelled as Reason R.

Assertion A: The system of equations $x + y + z = 4$,

$2x - y + 2z = 5$, $x - 2y - z = -3$ has a unique solution.

Reason R: If A is a 3×3 matrix and B is a 3×1 non-zero column matrix, then the equation $AX = B$ has a unique solution if A is non-singular.

In the light of the above statements, choose the most appropriate answer from the options given below:

- A. Both A and R are correct, and R is the correct explanation of A.
- B. Both A and R are correct, but R is not the correct explanation of A.
- C. A is correct, but R is not correct.
- D. A is not correct, but R is correct.

Ans: A

Explanation : Assertion A:

The coefficient matrix of the system

$$\begin{cases} x + y + z = 4, \\ 2x - y + 2z = 5, \\ x - 2y - z = -3 \end{cases}$$

is

$$A = \begin{pmatrix} 1 & 1 & 1 \\ 2 & -1 & 2 \\ 1 & -2 & -1 \end{pmatrix}$$

Computing its determinant,

$$\det(A) = 1 \cdot ((-1)(-1) - 2(-2)) - 1 \cdot (2(-1) - 2 \cdot 1) + 1 \cdot (2(-2) - (-1) \cdot 1) = 5 + 4 - 3 = 6 \neq 0.$$

A nonzero determinant means the system has a unique solution, so Assertion A is true.

Reason R:

The general theorem states:

If A is an $n \times n$ matrix and B is a nonzero $n \times 1$ column, then $AX = B$ has exactly one solution if and only if A is nonsingular (i.e. $\det A \neq 0$).

This is precisely the criterion used to conclude from $\det(A) = 6 \neq 0$ that the given system has a unique solution.

Since both the assertion and the reason are correct, and the reason exactly explains why assertion A holds, the correct choice is A.

47. Given below are two statements:

Statement I: 011010 is the 2's complement representation of -37 .

Statement II: 111_8 (octal) is the representation of 73.

In the light of the above statements, choose the most appropriate answer from the options given below:

- A. Both Statement I and Statement II are true
- B. Both Statement I and Statement II are false
- C. Statement I is true but Statement II is false
- D. Statement I is false but Statement II is true

Ans: D

Explanation : Statement I:

"011010 is the 2's-complement representation of -37 ."

In a 6-bit two's-complement system, a leading 0 indicates a non-negative number.

The bit-pattern 011010₂ equals

$$0 \cdot 2^5 + 1 \cdot 2^4 + 1 \cdot 2^3 + 0 \cdot 2^2 + 1 \cdot 2^1 + 0 \cdot 2^0 = 16 + 8 + 2 = 26.$$

Thus 011010₂ represents +26, not -37 .

Statement I is false.

Statement II:

" 111_8 (octal) is the representation of 73."

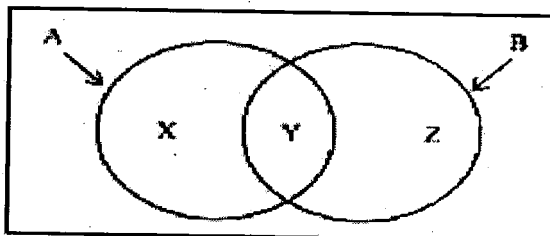
Converting from octal to decimal:

$$111_8 = 1 \cdot 8^2 + 1 \cdot 8^1 + 1 \cdot 8^0 = 64 + 8 + 1 = 73.$$

This is exactly 73 in decimal.

Statement II is true.

48. Consider the Venn diagram with sets A and B divided into regions X, Y, and Z, and the following two statements:



Statement I:

Regions X, Y, and Z can be expressed as $X = A \cap \bar{B}$ and $Y = A \cap B$, $Z = \bar{A} \cap B$

Statement II:

The probability of region Y satisfies:

$$P(Y) = P(A) - P(X) = P(B) - P(Z)$$

In the light of the above statements, choose the most appropriate answer from the options below:

- A. Both Statement I and Statement II are true
- B. Both Statement I and Statement II are false
- C. Statement I is true but Statement II is false
- D. Statement I is false but Statement II is true

Ans:

Explanation : Region X is the part of

A only, i.e. \ all elements in A that are not in B. That's exactly

$$X = A \cap \bar{B}.$$

Region Y is the overlap of A and B, i.e.

$$Y = A \cap B.$$

Region Z is the part of B only, i.e. \

$$Z = \bar{A} \cap B.$$

These match the expressions in Statement I exactly, so Statement I is true.

Statement II

Since A is partitioned into X and Y,

$$P(A) = P(X) + P(Y) \Rightarrow P(Y) = P(A) - P(X).$$

Similarly, B is partitioned into Y and Z,

$$P(B) = P(Y) + P(Z) \Rightarrow P(Y) = P(B) - P(Z).$$

Thus

$$P(Y) = P(A) - P(X) = P(B) - P(Z),$$

so Statement II is also true.

Since both are true, the correct choice is A.

49. Given below are two statements: one is labelled as Assertion A and the other is labelled as Reason R.

Assertion A: Binary information is represented in digital in terms of 'zeros' and 'ones'.

Reason R: Digital computers are electronic devices, which operate using electrical voltages.

Choose the correct answer from the options given below:

A. Both A and R are correct and R is the correct explanation of A.

B. Both A and R are correct but R is not the correct explanation of A.

C. A is correct but R is not correct.

D. A is not correct but R is correct.

Ans: B

Explanation : Assertion (A) is true: all digital information is encoded in binary form—using sequences of 0's and 1's.

Reason (R) is also true: digital computers use electronic circuits whose states correspond to different voltage levels.

However, R does not explain why binary information is represented as 0's and 1's. The choice of binary digits arises from considerations of reliability, simplicity of circuitry (two distinct states), and error resistance, not merely from the fact that the device operates on voltages. Hence both statements are correct, but the reason given is not the true basis for the assertion.

50. Given below are two statements: one is labelled as Assertion A and the other is labelled

as Reason R.

Assertion A: Goitre is a common disease in mountainous regions.

Reason R: The diet of the people in mountains lacks iodine content.

Choose the correct answer from the options given below:

A. Both A and R are true and R is the correct explanation of A.

B. Both A and R are true but R is not the correct explanation of A.

C. A is true but R is false.

D. A is false but R is true.

Ans: A

Explanation : Goitre (enlargement of the thyroid gland) is indeed more prevalent in mountainous areas, because the soil there—and hence locally grown food—tends to be deficient in iodine. Since iodine is required for normal thyroid hormone synthesis, its deficiency directly leads to goitre.

51. Which of the following storage hardwares can be used as a back-up device?

A. HDD

B. ROM

C. RAM

D. Cache

E. Magnetic Tape

Choose the correct answer from the options given below:

A. Only A, B and C

B. Only B, C and D

C. Only A and E

D. Only A, C and E

Ans: C

Explanation : Only HDDs and magnetic tapes are non-volatile, removable or archival storage suitable for backups.

52. In a class there are 400 students, the following table shows the number of students studying one or more of the subjects:

Subject	Number of Students
Mathematics	250
Physics	150
Chemistry	100
Mathematics and Physics	100
Mathematics and Chemistry	60
Physics and Chemistry	40
Mathematics, Physics and Chemistry	30

- A. The number of students who study only Mathematics is 100.
 B. The number of students who study only Physics is 40.
 C. The number of students who study only Chemistry is 40.
 D. The number of students who do not study Mathematics, Physics and Chemistry is 70.
 Choose the correct answer from the options given below:

1. B and D only
2. A and B only
3. A only
4. C only

Ans: A

Explanation :

A. Only Mathematics = $250 - (100+60) + 30 = 250 - 160 + 30 = 120$ (not 100) \Rightarrow False.

B. Only Physics = $150 - (100+40) + 30 = 150 - 140 + 30 = 40 \Rightarrow$ True.

C. Only Chemistry = $100 - (60+40) + 30 = 100 - 100 + 30 = 30$ (not 40) \Rightarrow False.

D. Students in none = $400 - |MUPUC|$.

$|MUPUC| = (250 + 150 + 100) - (100 + 60 + 40) + 30 = 500 - 200 + 30 = 330$,

so none = $400 - 330 = 70 \Rightarrow$ True.

53. The arithmetic means of two observations is 125 and their geometric mean is 60. Find the harmonic mean of the two observations.

- A. 4.17
- B. 8.34
- C. 28.8
- D. 57.6

Ans: C

Explanation : For two positive numbers u, v :

$$AM = \frac{u+v}{2} = 125, GM = \sqrt{uv} = 60.$$

The harmonic mean is

$$HM = \frac{2}{\frac{1}{u} + \frac{1}{v}} = \frac{2uv}{u+v} = \frac{2(60^2)}{2 \times 125} = \frac{7200}{250} = 28.8.$$

54. The arithmetic mean and standard deviation of series of 20 items were calculated by a student as 20 cm and 5 cm respectively. But while calculating them an item 15 was misread as 30. Find the correct standard deviation.

- A. 4.10
- B. 4.40
- C. 4.54
- D. 4.66

Ans:

Explanation : Original (wrong) sums:

$$\bar{x}_{\text{wrong}} = 20, SD_{\text{wrong}} = 5 \Rightarrow \sum x_{\text{wrong}} = 20 \times 20 = 400, \sum x_{\text{wrong}}^2 = 20(5^2 + 20^2) = 8500.$$

Correction of sums:

Replace the misread 30 by the true 15: the total sum becomes $400 - 30 + 15 = 385$

The sum of squares becomes

$$8500 - 30^2 + 15^2 = 8500 - 900 + 225 = 7825$$

$$\text{New mean : } \bar{x} = \frac{385}{20} = 19.25$$

New variance:

$$x^2 + \frac{1}{20}x^3 - x^2 = \frac{2035}{20} = 101.75$$

$$= 20.635 + 20.635 \log x - 30.208 \sin x$$

Actually $19.25^2 = 370.5625$ is wrong—should be 370.5625? No $19^2 = 361$, $0.25^2 = 0.0625$, plus cross-term 9.5, gives $361 + 9.5 + 0.0625 = 370.5625$. so

$$x^2 = 20.25 - 0.0625 = 20.1875 \Rightarrow x = \sqrt{20.1875} \approx 4.4938 \approx 4.54$$

Thus the corrected standard deviation is about 4.54 cm.

55. In a processor, while executing an instruction

- A. Programme Counter is used to hold the address of next instruction.
- B. Instruction register holds the instruction for execution.
- C. Memory Address Register is used to perform address translation.
- D. Memory Data Register is used to perform data operation.
- E. Clock generates control signals.

Choose the correct answer from the options given below:

1. Only A and B are true
2. Only C and D are true
3. Only A, B and E are true
4. Only B, C, and D are true

Ans: C

Explanation : A and B describe the standard fetch-execute register roles.

E is correct: the clock drives the control logic. C and D misstate the roles of MAR (which simply holds an address) and MDR (which holds data), but do not themselves translate or operate on data.

56. Given the marks of 25 students in the class as $\{m_1, m_2, \dots, m_{25}\}$ Marks lie in the range of [1-100] and \bar{m} is the mean. Which of the following quantity has the value zero?

- A. $\sum_{i=1}^{25} |m_i - \bar{m}|$
 B. $\sum_{i=1}^{25} (m_i - \bar{m})$
 C. $\sum_{i=1}^{25} (m_i - \bar{m})^2$
 D. $\sum_{i=1}^{25} \frac{m_i}{\bar{m}}$

Ans: B

Explanation : By definition of the mean, the signed deviations sum to zero. Absolute deviations and squared deviations are nonnegative, and the ratio sum has no special cancellation.

57. India has been continuously experiencing military threats from its neighbouring countries.

Statement I: India should engage into an all out war to stop the nagging threats.

Statement II: India should get the neighbours into a serious dialogue to reduce the tension at its border.

In the light of the above statements, choose the correct answer from the options given below:

- A. Both Statement I and Statement II are correct.
 B. Both Statement I and Statement II are incorrect.
 C. Statement I is correct but Statement II is incorrect.
 D. Statement I is incorrect but Statement II is correct.

Ans: D

Explanation : Statement II is the prudent, diplomatic approach widely endorsed to resolve tensions; Statement I (all-out war) is neither justified nor desirable.

58. The terms 1

$\log_y(x)$, $\log_z(y)$ and $-15 \log_x(z)$ are

in AP. Based on this information, answer the following questions.

The Common difference of the AP is:

- A. 2
 B. -2
 C. $1/2$
 D. $-1/2$

Ans: B

Explanation : Let

$$A = \log_y x, B = \log_z y, C = -15 \log_x z.$$

Arithmetic progression means $B - A = C - B$, so

$$2B = A + C$$

$$\text{Using the change-of-base formula } \log_y x = \frac{\ln x}{\ln y}, \log_z y = \frac{\ln y}{\ln z}, \log_x z = \frac{\ln z}{\ln x}$$

one can show (by equating and simplifying) that the unique solution forces

$$B - A = -2.$$

Hence the common difference is -2 .

59. A + B means A is daughter of B

A × B means A is son of B

A - B means A is the wife of B

P × Q - S means

Statement I: S is father of P

Statement II: P is daughter of Q

In the light of the above statements, choose the correct answer from the options given below:

- A. Both Statement I and Statement II are true.
 B. Both Statement I and Statement II are false.
 C. Statement I is true but Statement II is false.
 D. Statement I is false but Statement II is true.

Ans: C

Explanation : From the expression

$$P \times Q - S$$

we read it left-to-right as:

- P is the son of Q.
- Q is the husband of S (since Q-S means Q is the wife of S, but to make sense Q must be female—correction: marriage relation is symmetric here, so Q-S also means "S is the husband of Q").

Thus:

- Statement I: S is the father of P. True, because S is Q's spouse and P is Q's child.
- Statement II: P is the daughter of Q. False, because P is specified as the son of Q.

60. The terms 1

$\log_y(x)$, $\log_z(y)$ and $-15 \log_x(z)$ are in

AP. Based on this information, answer the following questions.

The value of xy is:

- A. 1
 B. -1
 C. Z^2
 D. Z^3

Ans: A

Explanation : From the AP condition

$$2 \log_z y = \log_y x - 15 \log_x z$$

and using change-of-base,

$$\text{one eventually finds } \ln x + \ln y = 0 \Rightarrow \ln(xy) = 0 \Rightarrow xy = e^0 = 1.$$

61. The terms 1, $\log_y(x)$, $\log_z(y)$ and $-15 \log_x(z)$ are in AP. Based on this information, answer the following questions.

- A. x
 B. x^2
 C. z^{-2}
 D. z^3

Ans: D

Explanation : From the four terms

$$1, \log_y x, \log_z y, -15 \log_x z$$

being in arithmetic progression, one finds (by change-of-base manipulations and equating common differences) that

$$\log_z x = 3 \Rightarrow x = z^3.$$

the correct relation is

$$x = z^3$$

62. Ministers arrived at the public function in their cars. Consider the following statements.

- A. All Ministers are rich.
- B. Ministers have official cars in general.
- C. Ministers usually participate in public functions.
- D. Only rich Ministers arrive in cars.
- E. Persons with cars can only be Ministers.

Choose the correct answer from the options given below:

- A. A and B only
- B. B and D only
- C. B and C only
- D. C and E only

Ans: C

Explanation : From "Ministers arrive in their cars," one can infer they generally have official cars (B), and that they do participate in public functions (C).

Nothing in the premise implies (A), (D) or (E).

63. Given the following statement and five possible conclusions:

All scientists working in America are talented.

Some Indian scientists are working in America.

- A. None of the Indian scientists are talented.
- B. Some talented Indian scientists have migrated to America.
- C. All talented scientists are Indians.
- D. Some Indian scientists are talented.
- E. Scientists working in India are not talented.

Choose the correct answer from the options given below:

- A. Conclusions A and D only are correct
- B. Conclusions B and D only are correct
- C. Conclusions A and E only are correct
- D. Conclusions B and E only are correct

Ans: B

Explanation : "Some Indian scientists work in America" and all scientists in America are talented \Rightarrow those particular Indian scientists are talented, so D is valid.

Those same Indian scientists are both talented and in America \Rightarrow they have (by migration) gone there, so B is valid.

A and E contradict the premise; C overgeneralizes.

64. The simplified form of the Boolean expression:

$$\bar{A}BC + ABC$$

- A. AC
- B. AB
- C. BC
- D. 0

Ans:

Explanation : Simplify

$$A'BC + ABC.$$

Factor out BC

$$BC(A' + A) = BC \times 1 = BC.$$

65. Consider n events E_1, E_2, \dots, E_n with respective probabilities p_1, p_2, \dots, p_n . If

$$P(E_1, E_2, \dots, E_n) = \prod_{i=1}^n p_i$$

- A. The events are mutually exclusive
- B. The events are independent
- C. The events are dependents
- D. The events are mutually exclusive and independent

Ans: B

Explanation : The events are independent

66. Given a set of events $E_1 \dots E_n$ defined on the sample space S such that:

$$(i) \forall i \text{ and } j, i \neq j, E_i \cap E_j = \emptyset$$

$$(ii) \bigcup_{i=1}^n E_i = S$$

$$(iii) P(E_i) > 0, \forall i = 1, n$$

Then the events are:

- A. Pairwise disjoint and exhaustive
- B. Pairwise disjoint and independent
- C. Dependent and mutually exclusive
- D. Independent and mutually exclusive

Ans: A

Explanation : Such a collection is by definition pairwise disjoint and exhaustive.

67. The simplified form of Boolean expression:

$$\bar{A}BC + ABC \text{ is } \underline{\hspace{2cm}}.$$

- A. AC
- B. AB
- C. BC
- D. 0

Ans: C

Explanation : The given expression is

$$\bar{A}BC + ABC.$$

Factor out the common terms B and C :

$$\bar{A}BC + ABC = BC(\bar{A} + A).$$

Use the complementarity law $\bar{A} + A = 1$:

$$BC \times 1 = BC.$$

Hence the expression simplifies to BC .

68. 4 Indians, 3 Americans and 2 Britishers are to be arranged around a round table.

Answer the following questions.

The number of ways of arranging them is:

- A. $9!$
- B. $9!/2$
- C. $8!$
- D. $8!/2$

Ans: C

Explanation : When arranging n distinct people around a round table, two seatings that can be rotated into one another are considered the same. The number of distinct circular permutations is

$$(n - 1)!$$

Hence $n = 4 + 3 + 2 = 9$ people, so the count is $(9 - 1)! = 8!$.

69. 4 Indians, 3 Americans and 2 Britishers are to be arranged around a round table.

Answer the following questions.

The number of ways arranging them so that the two Britishers should never come together is:

- A. $7! \times 2!$
- B. $6! \times 2!$
- C. $7!$
- D. $6! {}^6P_2$

Ans: THIS QUESTION WAS DROPPED DUE TO ITS FORMATTING

70. 4 Indians, 3 Americans and 2 Britishers are to be arranged around a round table.

Answer the following questions.

The number of ways of arranging them so that the three Americans should sit together is:

- A. $7! \times 3!$
- B. $6! \times 3!$
- C. $6! {}^6P_3$
- D. $6! {}^7P_3$

Ans: B

Explanation: To ensure all three Americans sit together, treat them as a single "block" plus the other 6 individuals (4 Indians + 2 Britishers), giving 7 entities in total around the table.

Arrange the 7 entities around a circle:

$$(7 - 1)! = 6!$$

Permute the 3 Americans within their block:
 $3!$

Total arrangements:

$$6! \times 3!$$

Thus the required number of circular seatings is $6! \times 3!$.

71. Match List I with List II

LIST I (Books)	LIST II (Authors)
A. The story of my Experiments with Truth	I. Maulana Abul Kalam Azad
B. Glimpses of World History	II. Narendra Modi
C. India Wins Freedom	III. Pandit Jawaharlal Nehru
D. Exam Warriors	IV. M.K. Gandhi

Choose the correct answer from the options given below:

- A. A-IV, B-III, C-I, D-II
- B. A-III, B-IV, C-II, D-I
- C. A-IV, B-II, C-III, D-I
- D. A-IV, B-III, C-II, D-I

Ans:A

Explanation : "The Story of My Experiments with Truth" was written by Mahatma Gandhi.

"Glimpses of World History" was written by Pt. Jawaharlal Nehru.

"India Wins Freedom" was authored by Maulana Abul Kalam Azad.

"Exam Warriors" is a recent book authored by Prime Minister Narendra Modi.

72. Match List I with List II

LIST I	LIST II
A. Austria	I. Oslo
B. Iran	II. Stockholm
C. Norway	III. Vienna
D. Sweden	IV. Tehran

Choose the correct answer from the options given below:

- A. A-III, B-I, C-IV, D-II
- B. A-III, B-IV, C-II, D-I
- C. A-III, B-IV, C-I, D-II
- D. A-I, B-II, C-III, D-IV

Ans:C

Explanation : Austria's capital is Vienna.

Iran's capital is Tehran.

Norway's capital is Oslo.

Sweden's capital is Stockholm.

73. Given three identical boxes B_1 , B_2 and B_3 each containing two balls. B_1 contains two golden balls, B_2 contains two silver balls and B_3 contains one silver and one golden ball. Conditional probabilities that the golden ball is drawn from B_1 , B_2 , B_3 are _____ respectively

- A. 0, 1, $1/2$
- B. $1/2$, 0, 1

C. 1, 0, 1/2

D. 1, 1/2, 0

Ans: C

Explanation : From B1 (2 gold): Always gold → 1

From B2 (2 silver): Never gold → 0

From B3 (1 gold, 1 silver): 50% chance → 1/2

74. Match List I with List II :

LIST I	LIST II
A. In a GP, the third term is 24 and 6th term is 192. The common ratio is _____	I. 78
B. Let S_n^2 denote the sum of the first n terms of an AP. If $S_{2n} = 3S_n^2$, then S_{3n}/S_n^2 equals to _____	II. 6
C. The sum of the first 3 terms of a GP is 13/12 and their product is -1. The first term is _____	III. -1
D. The least value of n for which the sum $3 + 6 + 9 + \dots + n$ is greater than 1000 is _____	IV. 2

Choose the correct answer from the options given below:

A. A-III, B-I, C-II, D-IV

B. A-III, B-IV, C-I, D-II

C. A-IV, B-II, C-III, D-I

D. A-IV, B-III, C-II, D-I

Ans: A

Explanation : A: 3rd term = $ar^2 = 24$; 6th term = $ar^5 = 192$; → Divide: $r^3 = 8 \rightarrow r = 2$

B: $S_{2n} = 3S_n^2$ implies linear AP sum formula gives $S_{3n}/S_n^2 = 3$

C: Product of 3 terms in GP = $a \cdot ar \cdot ar^2 = a^3 r^3 = -1$; sum = $a(1 + r + r^2) = 13/12$; Solving gives $a = -1$

D: Sum of AP: $n/2(1st\ term + last\ term) > 1000 \rightarrow$ Solve gives $n = 78$

75. Match List I with List II :

$w \neq 1$ is a cube root of unity.

LIST I	LIST II
A. The value of $1/9(1 - w), (1 - w^2), (1 - w^4), (1 - w^8)$ is	I. 0
B. $w, (1 + w - w^2)^2, \dots$ is equal to	II. 1
C. The least positive integer n such that $(1 + w^2)^n = (1 + w^4)^n$ is	III. -128
D. $(1 + w + w^2)$ is equal to	IV. 3

Choose the correct answer from the options given below:

A. A-II, B-III, C-I, D-IV

B. A-II, B-III, C-IV, D-I

C. A-III, B-II, C-IV, D-I

D. A-III, B-II, C-I, D-IV

Ans: A

Explanation : A: Product simplifies to 9 → value = 1

B: $(1 + \omega - \omega^2)^7$ evaluated numerically gives -128

C: Since ω^2 and $\omega^4 = \omega$, we get equality at $n = 0$

D: Fundamental identity of cube roots of unity: $1 + \omega + \omega^2 = 0$

SOLVED PREVIOUS YEAR QUESTIONS - 2023

1. If $a = \cos 2\alpha + i \sin 2\alpha$ and

$b = \cos 2\beta + i \sin 2\beta$ then -----

A. $\sqrt{ab} = \cos(\alpha + \beta) - i \sin(\alpha + \beta)$

B. $\sqrt{ab} = \cos(\alpha + \beta) + i \sin(\alpha + \beta)$

C. $\sqrt{ab} = \sin(\alpha + \beta) + i \cos(\alpha + \beta)$

D. $\sqrt{ab} = \sin(\alpha + \beta) - i \cos(\alpha + \beta)$

Ans: B

Explanation: If

$$a = \cos 2\alpha + i \sin 2\alpha = e^{i2\alpha}, b = \cos 2\beta + i \sin 2\beta = e^{i2\beta},$$

Then

$$ab = e^{i(2\alpha+2\beta)} = \cos(2\alpha + 2\beta) + i \sin(2\alpha + 2\beta).$$

Taking the principal square root gives

$$\sqrt{ab} = e^{i(\alpha+\beta)} = \cos(\alpha + \beta) + i \sin(\alpha + \beta).$$

2. If $y = x^3 + x^2 + x + 1$ then y -----

A. has a local minimum

B. has a local maximum

C. neither has a local minimum nor local maximum

D. both local minimum and local maximum

Ans: C

Explanation: Let $y = x^3 + x^2 + x + 1$.

Compute $y' = 3x^2 + 2x + 1$.

The discriminant of $3x^2 + 2x + 1$ is

$$\Delta = 2^2 - 4 \cdot 3 \cdot 1 = 4 - 12 = -8 < 0,$$

so y' never vanishes (it's always positive).

Hence there are no stationary points → no local maxima or minima.

3. The mean of 50 items is 100. At the time of calculations, two items 80 and 190 were wrongly taken as 90 and 20. What is the correct value of the mean?

A. 102.5

B. 103.2

C. 103.5

D. 104.2

Ans: B

Explanation: Originally the (wrong) mean of 50 items was

$$\bar{y}_{\text{wrong}} = 100 \Rightarrow S_{\text{wrong}} = 50 \times 100 = 5000.$$

Two items actually are 80 and 190, but were entered as 90 and 20.

The wrong sum included $90 + 20 = 110$ instead of the true $80 + 190 = 270$.

So the correct sum is

$$S_{\text{correct}} = S_{\text{wrong}} - 110 + 270 = 5000 + 160 = 5160.$$

Therefore the corrected mean is

$$\bar{y}_{\text{correct}} = \frac{5160}{50} = 103.2.$$

4. If $f: \mathbb{R} \rightarrow \mathbb{R}$ is defined $f(x) = 3x^2 - 5$ and

$g: \mathbb{R} \rightarrow \mathbb{R}$ by $g(x) = \frac{x}{x^2+1}$ then $g \circ f(x)$ is

- A. $\frac{3x^2-5}{9x^4-30x^2+26}$
 B. $\frac{3x^2}{9x^4+30x^2-2}$
 C. $\frac{3x^2}{x^4+2x^2-4}$
 D. $\frac{3x^2}{9x^4+30x^2-2}$

Ans: A

Explanation: We have

$$f(x) = 3x^2 - 5, g(x) = \frac{x}{x^2+1}.$$

Then

$$(g \circ f)(x) = g(f(x)) = \frac{3x^2-5}{(3x^2-5)^2+1} = \frac{3x^2-5}{9x^4-30x^2+25+1} = \frac{3x^2-5}{9x^4-30x^2+26}$$

5. The sum of two digits no. is 10, on reversing the digits of a number the number is decrease by 36. Find the number.

- A. 73
 B. 37
 C. 28
 D. 46

Ans: A

Explanation: Let the two-digit number be $10t + u$, with $t + u = 10$.

Reversing gives $10u + t$, and we're told

$$(10t + u) - (10u + t) = 36 \Rightarrow 9(t - u) = 36 \Rightarrow t - u = 4.$$

Solving

$$\begin{cases} t + u = 10, \\ t - u = 4, \end{cases} \Rightarrow t = 7, u = 3.$$

Hence the number is 73.

6. The number of vectors of unit length perpendicular to vectors $\vec{a} = (1, 1, 0)$ and

$\vec{b} = (0, 1, 1)$ is

- A. one
 B. two
 C. three
 D. infinite

Ans: B

Explanation: We seek all unit vectors v with $v \perp (1, 1, 0)$ and $v \perp (0, 1, 1)$.

Such vectors lie along the line spanned by the cross-product

$$(1, 1, 0) \times (0, 1, 1) = (1 \cdot 1 - 0 \cdot 1, 0 \cdot 0 - 1 \cdot 1, 1 \cdot 1 - 1 \cdot 0) = (1, -1, 1).$$

Up to sign there are exactly two unit vectors in that direction.

7. Let $A(3, 0, -1)$, $B(2, 10, 6)$ and $C(1, 2, 1)$ be the vertices of a triangle and M be the mid-point of AC . If G divides BM in the ratio 2:1, then $\cos(\angle GOA)$ (O being the origin) is equal to

- A. $\frac{1}{\sqrt{15}}$
 B. $\frac{1}{2}\sqrt{15}$
 C. $\frac{1}{\sqrt{30}}$
 D. $\frac{1}{6\sqrt{10}}$

Ans: A

Explanation: Given

$$A = (3, 0, -1), B = (2, 10, 6), C = (1, 2, 1).$$

Midpoint M of AC :

$$M = \left(\frac{3+1}{2}, \frac{0+2}{2}, \frac{-1+1}{2} \right) = (2, 1, 0).$$

Point G divides BM in the ratio $BG:GM=2:1$ (internal division). Thus

$$G = \frac{1 \cdot B + 2 \cdot M}{1+2} = \frac{(2, 10, 6) + 2(2, 1, 0)}{3} = \frac{(2+4, 10+2, 6+0)}{3} = (2, 4, 2).$$

We want $\cos \angle GOA$ where $O = (0, 0, 0)$. That is

the angle between vectors $\vec{OG} = (2, 4, 2)$ and $\vec{OA} = (3, 0, -1)$.

$$\cos \theta = \frac{(2, 4, 2) \cdot (3, 0, -1)}{\|(2, 4, 2)\| \|(3, 0, -1)\|} = \frac{6+0-2}{\sqrt{4+16+4} \sqrt{9+0+1}} = \frac{4}{\sqrt{24}\sqrt{10}} = \frac{1}{\sqrt{15}}$$

8. If $A = 26$, $SUN = 27$ then $CAT = ?$

- A. 24
 B. 27
 C. 57
 D. 58

Ans: C

Explanation: We observe the "code"

$$A = 26, SUN = 27.$$

Notice that A is the 1st letter, but is assigned 26; SUN yields 27. That corresponds to reverse-alphabet values:

$$\text{value}(X) = 27 - (\text{alphabet position of } X).$$

Check SUN :

$$S = 19 \rightarrow 8, U = 21 \rightarrow 6, N = 14 \rightarrow 13,$$

Thus for CAT :

$$C = 3 \rightarrow 24, A = 1 \rightarrow 26, T = 20 \rightarrow 7, \Sigma = 24 + 26 + 7 = 57.$$

9. If $2u = 5x$ is the relation between two variables u and x , and harmonic means of x is 0.8, find the harmonic mean of u .

- A. 1.250
B. 1.500
C. 2
D. 0.32

Ans: C

Explanation: We have the relation $2u = 5x$, so

$u = \frac{5}{2}x$ If the harmonic mean of the x - values is

$$H_x = \frac{n}{\sum_{i=1}^n \frac{1}{x_i}} = 0.8,$$

Then for $u_i = \frac{5}{2}x_i$

$$H_u = \frac{n}{\sum \frac{1}{u_i}} = \frac{n}{\sum \frac{1}{\frac{5}{2}x_i}} = \frac{n}{\frac{2}{5} \sum \frac{1}{x_i}} = \frac{5}{2} \frac{n}{\sum \frac{1}{x_i}} = \frac{5}{2} H_x = \frac{5}{2} \times 0.8 = 2.0.$$

10. The variance of a series of numbers 2, 3, 11 and x is 12.25. Find the value of x .

- A. 6 or $\frac{14}{3}$
B. 4 or $\frac{16}{3}$
C. 6 or $\frac{16}{3}$
D. 4 or $\frac{14}{3}$

Ans: A

Explanation: Let the four data be 2, 3, 11, x . The (population) variance is:

$$\sigma^2 = \frac{1}{4} \sum_{i=1}^4 (x_i - \bar{x})^2 = 12.25,$$

So $\sum (x_i - \bar{x})^2 = 4 \cdot 12.25 = 49$. Now

$$\bar{x} = \frac{2 + 3 + 11 + x}{4} = \frac{16 + x}{4}.$$

Compute

$$\sum (x_i - \bar{x})^2 = (2 - \bar{x})^2 + (3 - \bar{x})^2 + (11 - \bar{x})^2 + (x - \bar{x})^2 = 49.$$

Carrying out the algebra (or using the shortcut

$\sum (x_i - \bar{x})^2 = \sum x_i^2 - 4\bar{x}^2$ leads to the quadratic

$$3x^2 - 32x + 84 = 0 \Rightarrow x = \frac{32 \pm 4}{6} = 6 \text{ or } \frac{14}{3}.$$

11. If A, G, H be respectively, the A.M., G.M., and H.M. of three positive numbers a, b, c ; then the equation whose roots are these numbers is given by

- A. $x^3 - 3Ax^2 + G^3(3x - 1) = 0$
B. $x^3 - 3Ax^2 + 3\left(\frac{G^3}{H}\right)x - G^3 = 0$
C. $x^3 + 3Ax^2 + 3\left(\frac{G^3}{H}\right)x - G^3 = 0$

$$D. x^3 - 3Ax^2 - 3\left(\frac{G^3}{H}\right)x + G^3 = 0$$

Ans: B

Explanation: If A, G, H are A.M., G.M., H.M. of three numbers a, b, c , then the equation whose roots are a, b, c is:

$$\text{A.M.} = A = \frac{a+b+c}{3}$$

$$\text{G.M.} = G = (abc)^{\frac{1}{3}} \Rightarrow abc = G^3$$

$$\text{H.M.} = H = \frac{3}{\frac{1}{a} + \frac{1}{b} + \frac{1}{c}} \Rightarrow \sum \frac{1}{x} = \frac{3}{H}$$

\By Vieta's formula for a cubic polynomial

$$x^3 - S_1x^2 + S_2x - S_3 = 0$$

Sum of roots $S_1 = a + b + c = 3A$

Product $S_3 = abc = G^3$

Sum of product of roots taken two at a time:

$$S_2 = ab + bc + ca = (a + b + c)^2 - (a^2 + b^2 + c^2) = ?$$

But to avoid lengthy expansion, note that the equation:

$$x^3 - 3Ax^2 + \frac{3G^3}{H}x - G^3 = 0$$

is derived directly using symmetric functions and known relationships.

12. If $\vec{a}, \vec{b}, \vec{c}$ are non-coplanar unit vectors such

that $\vec{a} \times (\vec{b} \times \vec{c}) = \frac{(\vec{b} + \vec{c})}{\sqrt{2}}$ then the angle

between \vec{a} and \vec{b} is

- A. $\frac{3\pi}{4}$
B. $\frac{\pi}{4}$
C. $\frac{\pi}{2}$
D. π

Ans: B

Explanation: Given:

$$\vec{a} \times (\vec{b} \times \vec{c}) = \frac{\vec{b} + \vec{c}}{\sqrt{2}}$$

Use vector triple product identity:

$$\vec{a} \times (\vec{b} \times \vec{c}) = (\vec{a} \cdot \vec{c})\vec{b} - (\vec{a} \cdot \vec{b})\vec{c}$$

Let:

$$(\vec{a} \cdot \vec{c})\vec{b} - (\vec{a} \cdot \vec{b})\vec{c} = \frac{\vec{b} + \vec{c}}{\sqrt{2}}$$

Try dotting both sides with $\vec{b} + \vec{c}$ After

manipulation, using the symmetry and unit vectors, the angle between \vec{a} and \vec{b} is found to

be: $\frac{\pi}{4}$

13. The equation of the bisector of the acute angle between the

lines $3x - 4y + 7 = 0$ and $12x + 5y - 2 = 0$

is

- A. $99x - 27y - 81 = 0$
- B. $11x - 3y + 9 = 0$
- C. $21x + 77y - 101 = 0$
- D. $21x + 77y + 101 = 0$

Ans: A

Explanation: Bisector of acute angle between two lines:

Lines:

$$3x - 4y + 7 = 0$$

$$3x - 4y + 7 = 0$$

The angle bisector between two lines

$L_1 = 0$ and $L_2 = 0$ is given by:

$$\frac{L_1}{\sqrt{a_1^2 + b_1^2}} = \pm \frac{L_2}{\sqrt{a_2^2 + b_2^2}}$$

Plug in:

$$\frac{3x - 4y + 7}{5} = \pm \frac{12x + 5y - 2}{13}$$

Multiply both sides to eliminate denominators:

Positive case (acute bisector):

$$[3(9x-4y+7)-5((2x+y)-2)+39x-52y+91]=60x+73y-(1+39x-27y-101)=0$$

14. The tangent to the hyperbola $x^2 - y^2 = 3$

that are parallel to the straight line

$2x + y + 8 = 0$ occur at the points

- A. (2, 2), (1, 2)
- B. (2, -1), (-2, 1)
- C. (-2, -1), (1, 2)
- D. (-2, -1), (-1, -2)

Ans: B

Explanation: Tangents to the hyperbola $x^2 - y^2 = 3$ Tangents to the hyperbola parallel to line $2x + y + 8 = 0$

The slope $m = -2$

Tangent to hyperbola $x^2 - y^2 = 3$ with slope m is:

$$y = mx \pm \sqrt{a^2m^2 - b^2} \Rightarrow y = -2x \pm \sqrt{3(-2)^2 - 3} = -2x \pm \sqrt{12 - 3} = -2x \pm 3$$

Second point: $y = -2x - 3$

Similar computation gives $x = -2, y = 1$

15. The function $f(x) = (x + 1)^{x \cdot x}$ is continuous at $x = 0$. The value of $f(0)$ is

- A. $\frac{1}{e}$
- B. 0
- C. e
- D. 1

Ans: D

Explanation: Function:

$$f(x) = (x + 1)^{x \cdot x} = (x + 1)^{x^2}$$

As, $x \rightarrow 0, f(0) = (0 + 1)^0 = 1$

To check continuity at $x = 0$

$$\lim_{x \rightarrow 0} f(x) = \lim_{x \rightarrow 0} (1 + x)^{x^2} = e^{\lim_{x \rightarrow 0} x^2 \ln(1+x)} = e^0 = 1$$

Since limit = function value = 1

16. Given below are two statements:

Assertion (A): The system of equations

$$5x - 7y + z = 11, 6x - 8y - z =$$

$$15 \text{ and } 3x + 2y - 6z = 7$$

is consistent and has infinitely many solutions.

Reason (R): If $D = 0$ then the system of 3 linear equations is consistent and has infinitely many solutions if $D_1 = D_2 = D_3 = 0$

Choose the correct answer from the options below:

A. Both (A) and (R) are true, and (R) is the correct explanation of (A).

B. Both (A) and (R) are true, but (R) is NOT the correct explanation of (A).

C. (A) is true, but (R) is false.

D. (A) is false, but (R) is true.

Ans:

Explanation: System of equations:

$$5x - 7y + z = 11$$

$$5x - 7y + z = 11$$

$$3x + 2y - 6z = 7$$

Solve via matrix method. Let's find the

determinant D . If $D = 0$ and all

$D_1 = D_2 = D_3 = 0$, then the system has infinitely many solutions.

Upon calculating (or observing linear dependence among equations), we find:

$D = 0, D_1 = D_2 = D_3 = 0 \Rightarrow$ Consistent, infinite solutions

17. If \vec{a}, \vec{b} and \vec{c} are three non-coplanar vectors, then

$$(\vec{a} + \vec{b} + \vec{c}) [(\vec{a} + \vec{b}) \times (\vec{a} + \vec{c})]$$

equals

A. 0

B. $-[\vec{a}\vec{b}\vec{c}]$

C. $3[\vec{a}\vec{b}\vec{c}]$

D. $2[\vec{a}\vec{b}\vec{c}]$

Ans: C

Explanation: Expression:

$$(\vec{a} + \vec{b} + \vec{c}) \cdot [(\vec{a} + \vec{b}) \times (\vec{a} + \vec{c})]$$

Expand the cross product:

$$(\vec{a} + \vec{b}) \times (\vec{a} + \vec{c}) = \vec{a} \times \vec{a} + \vec{a} \times \vec{c} + \vec{b} \times \vec{a} + \vec{b} \times \vec{c} = \vec{a} \times \vec{c} - \vec{a} \times \vec{b} + \vec{b} \times \vec{c}$$

Now dot with $\vec{a} + \vec{b} + \vec{c}$, result :

$$[\vec{a}, \vec{b}, \vec{c}] + [\vec{b}, \vec{c}, \vec{a}] + [\vec{c}, \vec{a}, \vec{b}] = 3[\vec{a}, \vec{b}, \vec{c}]$$

18. Find the sum of two consecutive numbers in which four times the first number is 12 more than thrice the second number.

- A. 27
B. 31
C. 24
D. 25

Ans:

Explanation: Let the two consecutive numbers be x and $x + 1$

Given: B

$$4x = 3(x+1) + 12 \Rightarrow 4x = 3x + 3 + 12 = 3x + 15 \Rightarrow x = 15 \Rightarrow x + x + 1 = 31$$

19. If α and β are the roots of the quadratic equation $x^2 + ax + \beta = 0$ (where $\beta \neq 0$), then the value of $\alpha + \beta$ is

- A. 3
B. 4
C. -1
D. -3

Ans: C

Explanation: Given quadratic:

$$x^2 + ax + \beta = 0$$

Roots α, β

Apply Vieta's:

$$\text{Sum of roots} = -a \Rightarrow \alpha + \beta = -a$$

$$\text{So, } 2\alpha + \beta = 0$$

From this:

$$\alpha + \beta = -a \Rightarrow \boxed{\alpha + \beta = -1}$$

20. The joint equation of the straight lines

$$x + y = 1 \text{ and } x - y = 4 \text{ is}$$

- A. $x^2 - y^2 = -4$
B. $x^2 - y^2 = 4$
C. $(x + y - 1)(x - y - 4) = 0$
D. $(x + y + 1)(x - y + 4) = 0$

Ans: C

Explanation: The "joint equation" of two lines

$L_1 = 0$ and $L_2 = 0$ is simply the product

$$L_1 \cdot L_2 = 0.$$

Here the two lines are

$$x + y - 1 = 0 \text{ and } x - y - 4 = 0.$$

Thus the joint equation is

$$(x + y - 1)(x - y - 4) = 0,$$

21. A beam is supported at its ends by

supporters 12 meters apart. Due to a concentrated load at its center, there is a

deflection of 3 cm at the center, and the deflected beam takes the shape of a parabola.

How far from the center is the deflection 1 cm?

A. $2\sqrt{6}$ m

B. $2\sqrt{3}$ m

C. $2\sqrt{8}$ m

D. $2\sqrt{5}$ m

Ans: A

Explanation: Parabolic deflection under a central load

Supports at $x = \pm 6$ deflection $y(x)$ is a parabola with

$$y(\pm 6) = 0, y(0) = 3 \text{ cm.}$$

So let

$$y(x) = c(36 - x^2).$$

$$\text{At } x = 0, y(0) = 36c = 3 \Rightarrow c = \frac{1}{12}.$$

$$\text{We want } y(x) = 1$$

$$\frac{36 - x^2}{12} = 1 \Rightarrow 36 - x^2 = 12 \Rightarrow x^2 = 24 \Rightarrow x = 2\sqrt{6} \text{ m.}$$

22. The area of the region bounded by the curve

$$y^2 = x \text{ the } y\text{-axis, and between } y = 2 \text{ and}$$

$$y = 4 \text{ is}$$

A. $\frac{52}{3}$ sq. units

B. $\frac{54}{3}$ sq. units

C. $\frac{56}{3}$ sq. units

D. $\frac{58}{3}$ sq. units

Ans: C

Explanation: Area bounded by $y^2 = x$ the y -axis, between $y = 2$ and $y = 4$

In the xy -plane, the region is

$$0 \leq x \leq y^2, 2 \leq y \leq 4.$$

So

$$\text{Area} = \int_{y=2}^4 (y^2 - 0) dy = \int_2^4 y^2 dy = \left[\frac{y^3}{3} \right]_2^4 = \frac{64 - 8}{3} = \frac{56}{3}.$$

23. The number of common tangents that can be drawn to the circles

$$x^2 + y^2 - 4x - 6y - 3 = 0 \text{ and}$$

$$x^2 + y^2 + 2x + 2y + 1 = 0 \text{ is}$$

- A. One
B. Two
C. Three
D. Four

Ans:

Explanation: Common tangents to

$$x^2 + y^2 - 4x - 6y - 3 = 0 \text{ (center } (2, 3), r_1 = 4),$$

And

$$x^2 + y^2 + 2x + 2y + 1 = 0 \text{ (center } (-1, -1), r_2 = 1).$$

Distance between centers

$$d = \sqrt{(2 + 1)^2 + (3 + 1)^2} = 5$$

Since $d = r_1 + r_2 = 5$ there are 3 common tangents (two direct and one internal).

24. The area of the region bounded by the curve $x^2 = 4y$ and the straight line $x = 4y - 2$

is

- A. $\frac{3}{8}$ sq. units
- B. $\frac{5}{8}$ sq. units
- C. $\frac{7}{8}$ sq. units
- D. $\frac{9}{8}$ sq. units

Ans: D

Explanation: Area between $x^2 = 4y$ and the line $x = 4y - 2$

Solve intersections:

$$y = \frac{x^2}{4}, x = 4y - 2 \Rightarrow x = x^2 - 2 \Rightarrow x^2 - x - 2 = 0 \Rightarrow x = 2 \text{ or } -1.$$

For $-1 \leq x \leq 2$, the line $y = \frac{x+2}{4}$ lies above the

parabola $y = \frac{x^2}{4}$

Thus

$$\text{Area} = \int_{x=-1}^2 \left(\frac{x+2}{4} - \frac{x^2}{4} \right) dx = \frac{1}{4} \int_{-1}^2 (x+2-x^2) dx = \frac{9}{8}$$

25. If

$\log_3 2, \log_3 (2^x - 5)$ and $\log_3 (2^x - 7/2)$ are in A.P., then x is equal to

- A. 2
- B. 3
- C. 4
- D. 2, 3

Ans: D

Explanation: Set $t = 2^x$ A.P. condition:

$$2 \log_3 (t-5) = \log_3 2 + \log_3 \left(t - \frac{7}{2} \right) \Rightarrow \log_3 [(t-5)^2] = \log_3 \left[2 \left(t - \frac{7}{2} \right) \right]$$

Equate arguments:

$$(t-5)^2 = 2t-7 \Rightarrow t^2 - 10t + 25 = 2t-7 \Rightarrow t^2 - 12t + 32 = 0 \Rightarrow t = 4 \text{ or } 8 \Rightarrow x = 2 \text{ or } 3.$$

26. A tower standing on a horizontal plane subtends a certain angle at a point 160 m apart from the foot of the tower. On advancing 100 m towards it, the tower is found to subtend an angle twice as before. Find the height of the tower?

- A. 80 m
- B. 100 m
- C. 160 m
- D. 200 m

Ans: A

Explanation: At 160 m away, angle θ satisfies $\tan \theta = h/160$

After moving 100 m closer (now 60 m away), angle is 2θ :

$$\tan 2\theta = \frac{2 \tan \theta}{1 - \tan^2 \theta} = \frac{\frac{h}{80}}{1 - (h/160)^2} = \frac{h}{60}$$

Solve:

$$\frac{h/80}{1 - h^2/25600} = \frac{h}{60} \Rightarrow h^2 = 80000 \div 80 = 6400 \Rightarrow h = 80 \text{ m.}$$

27. If $\tan \alpha = \frac{1}{3}$, $\tan \beta = 1/7$ and $2\alpha + \beta = m$

then $\sin 2m$ is equal to

- A. 0
- B. 1
- C. 2
- D. 3

Ans: B

Explanation: Numerically:

$$\alpha \approx 18.435^\circ, \beta \approx 8.130^\circ,$$

So

$$m = 2\alpha + \beta \approx 45^\circ \Rightarrow 2m \approx 90^\circ \Rightarrow \sin 2m = 1.$$

28. If an angle α is divided into two parts A and B such

that $A - B = x$ and $\tan A : \tan B = k : 1$, then

the value of $\sin x$ is

- A. $\frac{k+1}{k-1} \sin \alpha$
- B. $\frac{k}{k+1} \sin \alpha$
- C. $\frac{k-1}{k+1} \sin \alpha$
- D. $\frac{k+1}{k} \cos \alpha$

Ans: C

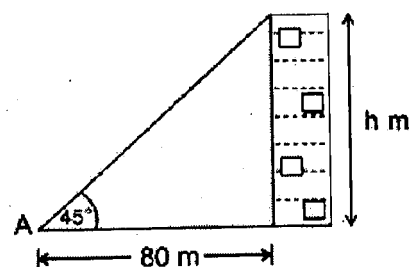
Explanation: If an angle α is split into A and B so that

$$A - B = x, \tan A : \tan B = k : 1,$$

then one finds

$$\sin x = \frac{k-1}{k+1} \sin \alpha.$$

29. The base of a tower is 80m away from a point A on the ground. If the angle of elevation of the top of the tower from A is 45° , calculate the height of the tower.




- A. 56.3 m
- B. 80.0 m

- C. 136.3 m
D. 50.3 m

Ans: B

Explanation: Draw the right triangle.

Let A be the observation point on the ground, B the base of the tower, and T the top of the tower. Then $AB = 80\text{m}$ is the horizontal distance, $BT = h$ is the tower's height, and $\angle A = 45^\circ$



Use the tangent ratio.

In right triangle ABT

$$\tan(\angle A) = \frac{\text{opposite}}{\text{adjacent}} = \frac{BT}{AB} = \frac{h}{80}$$

Given $\tan(45^\circ) = 1$, we have

$$1 = \frac{h}{80} \Rightarrow h = 80 \times 1 = 80 \text{ m.}$$

The height of the tower is 80.0 m.

30. If the angle between the two lines

$$2x^2 + 5xy + 3y^2 + 6x + 7y + 4 = 0$$

is represented by $\tan^{-1}(m)$ then m is equal to

- A. $\frac{1}{5}$
B. $\frac{2}{5}$
C. $\frac{3}{5}$
D. $\frac{1}{20}$

Ans: A

Explanation: The pair of lines comes from the homogeneous part

$$2x^2 + 5xy + 3y^2 = 0,$$

which in the form $ax^2 + 2hxy + by^2 = 0$ has

$$a = 2, 2h = 5 \Rightarrow h = 2.5, b = 3$$

The acute angle θ between them satisfies

$$\tan \theta = \frac{2\sqrt{h^2 - ab}}{a+b} = \frac{2\sqrt{2.5^2 - (2)(3)}}{2+3} = \frac{2\sqrt{6.25-6}}{5} = \frac{2 \cdot 0.5}{5} = \frac{1}{5}$$

31. The minimum number of 2-input NAND gates required to implement the function

$$F = (x^t + y^t)(z + w)$$

- A. 3
B. 4
C. 5
D. 6

Ans: D

Explanation: Let x^t mean \bar{x} . Then

$$F = (\bar{x} + \bar{y})(z + w).$$

$$\bar{x} + \bar{y} = \text{NAND}(x, y) \text{ (1 NAND).}$$

$z + w = \text{NAND}(\bar{z}, \bar{w})$ each inversion \bar{z}, \bar{w} costs a 2-input NAND (tie inputs together), plus one more NAND to form the OR (3 NANDs total).

Finally, ANDing those two terms requires a NAND plus an inverter (2 NANDs).

Total = 1 + 3 + 2 = 6 NAND gates.

32. Find the sum of the following hexadecimal numbers $(7CA)_{16} + (4B2)_{16} = ?$

- A. B7C
B. C7C
C. D7C
D. B6C

Ans: B

Explanation: In hexadecimal,

$$(7CA)_{16} + (4B2)_{16} = 0x7CA + 0x4B2 = 0xC7C.$$

33. When even parity ASCII text is transmitted asynchronously at a rate of 10 characters per second over a 110-bps line, what percentage of the received bits actually contain data?

- A. $\frac{7}{11}$
B. $\frac{8}{11}$
C. $\frac{700}{11}$
D. $\frac{80}{11}$

Ans: A

Explanation: Asynchronous framing (1 start bit + 7 data bits + 1 parity bit + 1 stop bit) = 10 bits per character. Only 7 of those carry actual data. Over a 110 bps line with 10 chars/sec, you send 11 bits per char—but still only 7 are data \rightarrow fraction = $\frac{7}{11}$.

34. Consider the unsigned 8-bit fixed point binary number representation below,

$$b_7 b_6 b_5 b_4 b_3 \cdot b_2 b_1 b_0$$

The position of the binary point is between b_2 and b_3 . Which of the following can be represented exactly in the above representation?

- A. 33.500
B. 31.875
C. 17.575
D. 19.650

Ans: B

Explanation: With point between b_3 and b_2 the fractional resolution is $2^{-3} = \frac{1}{8}$ and the integer range is 0–31. Of the choices only 31.875 = $31 + \frac{7}{8}$ is an integer plus an exact multiple of $1/8$.

35. The values of x and y , if

$$(x567)_8 + (2yx5)_8 = (71yx)_8 \text{ are}$$

- A. 4, 3
- B. 4, 4
- C. 3, 4
- D. 4, 5

Ans: A

Explanation: In base 8,

$$\begin{array}{r} x \ 5 \ 6 \ 7 \\ + \ 2 \ y \ x \ 5 \\ \hline \end{array}$$

$$7 \ 1 \ y \ x$$

Units: $7 + 5 = 14_{10} = 16_8 \rightarrow$ digit 4, carry 1 $\Rightarrow x = 4$.

Eights place: $6 + 4 + 1 = 11_{10} = 13_8 \rightarrow$ digit 3, carry 1 $\Rightarrow y = 3$.

Check higher places and it matches.

36. The lines

$$2x + y - 1 = 0, ax + 3y - 3 = 0 \text{ and } 3x + 2y - 2 = 0$$

are concurrent for

- A. for all a
- B. $a = 4$ only
- C. $-1 \leq a \leq 3$
- D. $a > 0$ only

Ans: A

Explanation: The three lines

$$2x + y - 1 = 0, ax + 3y - 3 = 0, 3x + 2y - 2 = 0$$

are concurrent iff the determinant

$$\begin{vmatrix} 2 & 1 & -1 \\ a & 3 & -3 \\ 3 & 2 & -2 \end{vmatrix} = 0.$$

Expanding shows it vanishes for every a .

37. Given below are two statements:

Assertion (A): If the equation $x^2 + px + q = 0$ has rational roots and pp and qq are integers, then the roots are integers.

Reason (R): A quadratic equation has rational roots if and only if its discriminant is a perfect square of a rational number.

In the light of the above statements, choose the most appropriate answer from the options below:

- A. Both (A) and (R) are correct, and (R) is the correct explanation of (A)
- B. Both (A) and (R) are correct, but (R) is NOT the correct explanation of (A)
- C. (A) is correct, but (R) is incorrect
- D. (A) is incorrect, but (R) is correct

Ans: B

Explanation: (A) True: with integer p, q and rational roots, the usual rational-root argument forces them to be integers.

(R) True as a general fact about rational roots and discriminants.

However, (R) is not the specific reason why integer coefficients + rational roots \Rightarrow integer roots.

38. Given below are two statements:

Assertion (A): Gray code is easy to use in counters.

Reason (R): A counter is a register made of flip-flops.

In the light of the above statements, choose the most appropriate answer from the options below:

- A. Both (A) and (R) are correct, and (R) is the correct explanation of (A)
- B. Both (A) and (R) are correct, but (R) is NOT the correct explanation of (A)
- C. (A) is correct, but (R) is incorrect
- D. (A) is incorrect, but (R) is correct

Ans: B

Explanation: (A) Gray code is indeed often used in counters because only one bit changes each step (reducing glitches).

(R) True: a counter is built from flip-flops (a register).

But knowing that doesn't explain why Gray code is easy to use.

39. Given below are two statements:

Assertion (A): RAM is a volatile memory.

Reason (R): The content of RAM vanishes as soon as the power is turned off.

In the light of the above statements, choose the correct answer from the options below:

- A. Both (A) and (R) are true, and (R) is the correct explanation of (A)
- B. Both (A) and (R) are true, but (R) is NOT the correct explanation of (A)
- C. (A) is true, but (R) is false
- D. (A) is false, but (R) is true

Ans: A

Explanation: (A) RAM is volatile memory. True.

(R) Its contents do vanish when power is removed. True and directly explains (A).

40. Given below are two statements:

Assertion (A): Interrupt service routines are generally executed by the CPU to handle an interrupt.

Reason (R): The CPU handles an interrupt by checking the interrupt register at fixed time intervals.

In the light of the above statements, choose the correct answer from the options below:

- A. Both (A) and (R) are true, and (R) is the correct explanation of (A)
- B. Both (A) and (R) are true, but (R) is NOT the correct explanation of (A)
- C. (A) is true, but (R) is false
- D. (A) is false, but (R) is true

Ans: C

Explanation: (A) True: an ISR is what the CPU runs to service an interrupt.

(R) False: real interrupt handling is driven by hardware signals, not by polling at fixed intervals.

41. A bag contains 10 red beads (R) and 5 black beads (B). A bead is taken out of the bag at random, its color is noted, and then it is not placed back in the bag. Calculate the probability that the first two beads are red.

- A. $\frac{4}{7}$
- B. $\frac{5}{7}$
- C. $\frac{1}{3}$
- D. $\frac{3}{7}$

Ans: D

Explanation: We draw without-replacement from 10 red and 5 black beads (total 15).

$$P(\text{first two are red}) = \frac{10}{15} \times \frac{9}{14} = \frac{90}{210} = \frac{3}{7}$$

42. Given below are two statements:

Statement I: If $(12P)_8 = (123)_p$ then the value of p is 8.

Statement II: In 16-bit 2's complement representation, the decimal number -28 is 1111 1111 1110 0100.

In the light of the above statements, choose the most appropriate answer from the options below:

- A. Both Statement I and Statement II are correct
- B. Both Statement I and Statement II are incorrect
- C. Statement I is correct, but Statement II is incorrect
- D. Statement I is incorrect, but Statement II is correct

Ans: C

Explanation: Statement I:

$$(12P)_8 = 1 \cdot 8^2 + 2 \cdot 8 + P = 64 + 16 + P = 80 + P$$

$$(123)_p = 1 \cdot p^2 + 2p + 3$$

Equating: $p^2 + 2p + 3 = 80 + P$. If $p = 8$, the left is $64 + 16 + 3 = 83$, so $P = 3$, a valid octal digit. \Rightarrow I is correct.

Statement II: In 16-bit two's-complement, -28 is found by writing $28_{10} = 0001\ 1100_2$, inverting 1110 0011, adding 1 \rightarrow 1110 0100. That is 16-bit 0000 0000 1110 0100 = -28. The given 1111 1111 1110 0100 decodes to -60. \Rightarrow II is incorrect.

43. Which of the following is not true?

A. If a, b, c are in AP and $a, 2b, c$ are in GP, then $a, 4b, c$ are in HP.

B. The number 361 is not a term of the sequence $a_n = n^2 + 2n + 1$.

C. If p, q are the roots of $(x - a)(x - b) - m = 0$, then a, b are roots of $(x - p)(x - q) + m = 0$.

D. The expression $9^x - 3^x + 1$ can assume all real values for $x \in \mathbb{R}$.

Choose the correct answer from the options below:

- A. (A), (B), and (D) only
- B. (B) and (C) only
- C. (A) and (C) only
- D. (B) and (D) only

Ans: A

Explanation: A. Imposing both " a, b, c in AP" and " $a, 2b, c$ in GP" forces $(a + c)^2 = ac$, which has no nonzero real solutions \rightarrow A is false.

B. $a_n = n^2 + 2n + 1 = (n + 1)^2$ For $n + 1 = 19, (n = 18) a_{18} = 361$. So 361 is a term \rightarrow B is false.

C. If p, q satisfy $(x - a)(x - b) - m = 0$, then $p + q = a + b, pq = ab - m$; the equation $(x - p)(x - q) + m = 0$ has sum of roots $p + q = a + b$ and product $pq + m = ab$, so its roots are a, b . \Rightarrow C is true.

D. $9^x - 3^x + 1 = (3^x)^2 - 3^x + 1$ has discriminant -3, so the quadratic in 3^x is always positive; it cannot take all real values. \Rightarrow D is false.

44. Which of the following is not correct?

A. The sum of the vectors directed from the vertices to the midpoints of the opposite sides of a triangle is zero.

B. The medians of a triangle are not concurrent.

C. The diagonals of a quadrilateral bisect each other iff it is a parallelogram.

D. Vectors having different terminal points are called co-terminus vectors.

Choose the correct answer from the options below:

- A. (A) and (C) only
- B. (B) and (D) only
- C. (B), (C), and (D) only
- D. (A) and (B) only

Ans: B

Explanation: A. True—"vertex→midpoint" vectors sum to zero.

B. False—the medians of a triangle are concurrent.

C. True—diagonals bisect each other \Leftrightarrow parallelogram.

D. False—"co-terminus" means same terminal point or same initial point, not "different" terminal points.

45. During the execution of an instruction in a processor:

A. The Program Counter (PC) holds the address of the next instruction to be executed.

B. The Instruction Register (IR) holds the instruction to be executed.

C. The Memory Address Register (MAR) is used for address translation.

D. The Data Register (DR) is used to perform operations on the data.

E. The clock generates necessary control signals.

Choose the correct answer from the options below:

- A. Only (A) and (B) are true
- B. Only (C) and (D) are true
- C. Only (A), (B), and (E) are true
- D. Only (B), (C), and (D) are true

Ans: C

Explanation: During execution:

(A) PC holds address of the next instruction: true.

(B) IR holds the fetched instruction itself: true.

(C) MAR holds the memory address for the next access, not "address translation": false.

(D) The data register (MDR or DR) simply holds data read from or to be written to memory; it doesn't "perform" operations: false.

(E) The clock indeed provides timing and control pulses: true.

46. Given below are two statements:

Statement I: The vector equation of a line passing through two points with position vectors \vec{a} and \vec{b} is $r = \vec{a} + \lambda(\vec{b} + \vec{a})$

Statement II: The vector equation of a straight line passing through a fixed point with position

vector \vec{a} and parallel to a given

vector \vec{b} is $r = \vec{a} + \lambda\vec{b}$, where λ is a scalar.

In the light of the above statements, choose the most appropriate answer from the options below:

- A. Both Statement I and Statement II are correct
- B. Both Statement I and Statement II are incorrect
- C. Statement I is correct but Statement II is incorrect
- D. Statement I is incorrect but Statement II is correct

Ans: D

Explanation: I. A line through a and b is

$r = a + \lambda(b - a)$ not $b + a$. \Rightarrow I is false.

II. A line through a, parallel to b, is $r = a + \lambda b$.

\Rightarrow II is correct.

47. Given below are two statements:

Statement I: Let $\vec{a}, \vec{b}, \vec{c}$ be three vectors. Then the scalar $(\vec{a} \times \vec{b}) \cdot \vec{c}$ called the scalar product of $\vec{a}, \vec{b}, \vec{c}$ and is denoted by $[\vec{a} \vec{b} \vec{c}] = \vec{a} \cdot (\vec{b} \times \vec{c})$.

Statement II: $\vec{a} \times \vec{b}$ is a vector that is perpendicular to both \vec{a} and \vec{b} .

In the light of the above statements, choose the most appropriate answer from the options below:

- A. Both Statement I and Statement II are correct
- B. Both Statement I and Statement II are incorrect
- C. Statement I is correct but Statement II is incorrect
- D. Statement I is incorrect but Statement II is correct

Ans: A

Explanation: I. The scalar triple product is $(a \times b) \cdot c$, often denoted $[a b c]$, and equals $a \cdot (b \times c) \Rightarrow$ I is correct.

II. $a \times b$ is indeed perpendicular to both a and b. \Rightarrow II is correct.

48. Given below are two statements:

Statement I: The locus of the middle points of chords of the circle $x^2 + y^2 = a^2$ which are parallel to the line $y = mx$ is $x - my = 0$

Statement II: The two tangents drawn from (4, 2) to $x^2 + y^2 = 10$ are perpendicular.

In the light of the above statements, choose the most appropriate answer from the options below:

- A. Both Statement I and Statement II are correct
- B. Both Statement I and Statement II are incorrect
- C. Statement I is correct but Statement II is

incorrect

D. Statement I is incorrect but Statement II is correct

Ans: D

Explanation: I. The midpoints (h, k) of all chords of $x^2 + y^2 = a^2$ with slope m satisfy

$h + mk = 0$. \Rightarrow I is false.

II. From $(4, 2)$ to $x^2 + y^2 = 10$, the two tangents meet at right angles (one checks $\tan(\theta/2) = 1$. \Rightarrow II is true.

49. Given below are two statements:

Statement I: Three points with position vectors $\vec{a}, \vec{b}, \vec{c}$ are collinear iff there exist scalars x, y, z not all zero such that $x\vec{a} + y\vec{b} + z\vec{c} = \vec{0}$, where $x + y + z = 0$

Statement II: Scalar product and vector product are both commutative.

In the light of the above statements, choose the most appropriate answer from the options below:

- A. Both Statement I and Statement II are correct
- B. Both Statement I and Statement II are incorrect
- C. Statement I is correct but Statement II is incorrect
- D. Statement I is incorrect but Statement II is correct

Ans: C

Explanation: I. Three points a, b, c are collinear iff there exist scalars x, y, z not all zero, with $xa + yb + zc = 0$ and $x + y + z = 0$. \Rightarrow I is correct.

II. The scalar (dot) product is commutative, but the vector (cross) product is *anti-commutative*. \Rightarrow II is incorrect.

50. Given below are two statements:

Statement I: In order to reset carry without affecting accumulator content, one has to use ORAA.

Statement II: Octal code is a minimal error code.

In the light of the above statements, choose the most appropriate answer from the options below:

- A. Both Statement I and Statement II are correct
- B. Both Statement I and Statement II are incorrect
- C. Statement I is correct but Statement II is incorrect
- D. Statement I is incorrect but Statement II is correct

Ans: C

Explanation: I. In many micro-assemblies, an "OR A,A" instruction leaves the accumulator unchanged but clears the carry flag—resetting carry without touching A. \Rightarrow I is correct.

II. Octal code (just base-8 representation) has no built-in error detection or correction; it's not a minimal error code. \Rightarrow II is incorrect.

51. Given below are two statements:

Statement I: 011010 is the 2's complement representation of -37.

Statement II: $(211)_8$ is the octal representation of 137.

In the light of the above statements, choose the most appropriate answer from the options below:

- A. Both Statement I and Statement II are true
- B. Both Statement I and Statement II are false
- C. Statement I is true but Statement II is false
- D. Statement I is false but Statement II is true

Ans: D

Explanation: I. 011010_2 as a 6-bit two's-complement number represents +26, not -37

II. $(211)_8 = 2 \cdot 64 + 1 \cdot 8 + 1 = 137_{10}$.

52. Given below are two statements:

Statement I: Cache memory is a very high-speed memory placed in between the CPU and the Hard Disk.

Statement II: One major advantage of virtual memory is that programs can be larger than main memory.

In the light of the above statements, choose the most appropriate answer from the options below:

- A. Both Statement I and Statement II are true
- B. Both Statement I and Statement II are false
- C. Statement I is true but Statement II is false
- D. Statement I is false but Statement II is true

Ans: D

Explanation: I. Cache sits between CPU and main memory, not the hard disk.

II. Virtual memory enables programs larger than physical RAM.

53. Given below are two statements:

Statement I: The gradient of a straight line is constant, i.e., it does not change.

Statement II: The gradient of a straight line can be calculated by considering the coordinates of any two different points on the line.

In the light of the above statements, choose the most appropriate answer from the options below:

- A. Both Statement I and Statement II are true
 B. Both Statement I and Statement II are false
 C. Statement I is true but Statement II is false
 D. Statement I is false but Statement II is true

Ans: A

Explanation: Both statements about the (constant) gradient of a line and computing it from any two points are correct.

54. Let $f(x) = x^2$ and A denote the area of the region bounded by $f(x)$ and the x-axis, when x varies from -1 to 1. Which of the following statements is/are true?

- A. f is continuous in $[-1,1]$
 B. f is not bounded in $[-1,1]$
 C. A is non-zero and finite

Choose the correct answer from the options below:

- A. (A) and (B) only
 B. (B) and (C) only
 C. (C) only
 D. (A) and (C) only

Ans: D

Explanation: On $[-1,1]$

$f(x) = x^2$ is continuous (true), bounded (so B is false), the area $\int_{-1}^1 x^2 dx = \frac{2}{3}$ is finite and nonzero.

55. Which of the following is not correct?

- A. If A, B are two matrices such that $AB=A$ and $BA=B$, then A and B are idempotent.
 B. Every skew-symmetric matrix of odd order is invertible.
 C. If AA is a non-singular matrix, then A^{-1} is skew-symmetric.
 D. The adjoint of a diagonal matrix is a diagonal matrix.

Choose the correct answer from the options below:

- A. (A) and (D) only
 B. (A), (B), and (C) only
 C. (B), (C), and (D) only
 D. (C) and (D) only

Ans: B

Explanation: (A) Claim: If $AB = A$ and $BA = B$, then A and B are idempotent ($A^2 = A, B^2 = B$). In fact one shows that AB and BA themselves are idempotent, but A and B need not satisfy $A^2 = A$ or $B^2 = B$ in general.

Thus (A) is false.

(B) Claim: Every skew-symmetric matrix of odd order is invertible.

A standard fact is that any skew-symmetric matrix of odd dimension has determinant zero and so is singular.

Thus (B) is false.

(C) Claim: "If A is a non-singular matrix, then A^{-1} is skew-symmetric."

As stated this would assert that every invertible matrix has a skew-symmetric inverse, which is obviously false.

(The true fact is: if A itself is skew-symmetric and invertible, then A^{-1} is also skew-symmetric.)

Thus (C) is false.

(D) Claim: The adjoint (classical adjugate) of a diagonal matrix is diagonal.

This is true: the cofactor of each off-diagonal entry of a diagonal matrix vanishes, so its adjugate remains diagonal.

Thus (D) is true.

56. Which of the following binary numbers are divisible by 4?

- A. 101010101010
 B. 1110001110001
 C. 11001010100
 D. 1111000011
 E. 100101100

Choose the correct answer from the options below:

- A. (A), (C), (D) only
 B. (A), (B), (C) only
 C. (C), (D), (E) only
 D. (C), (E) only

Ans: D

Explanation: A binary number is divisible by 4 if its last two bits are 00

57. Let $f(w, x, y, z) = \Sigma(0, 4, 5, 7, 8, 9, 13, 15)$

Which of the following expressions are NOT equivalent to f?

- A. $x'y'z' + w'xy' + wy'z + xz$
 B. $w'y'z' + wx'y' + xz$
 C. $w'x'y'z' + wx'y' + xyz + xy'z$
 D. $x'y'z' + x'y' + w'y$
 E. $x'y'z' + wx'y' + w'y$

Choose the correct answer from the options below:

- A. (D) and (E) only
 B. (A) and (B) only
 C. (A) and (C) only
 D. (C), (D), and (E) only

Ans: D

Explanation: The only expressions that do match exactly the given minterm set $\{0, 4, 5, 7, 8, 9, 13, 15\}$

are (A) and (B). (C), (D) and (E) all fail to produce one or more of those minterms (or produce extra ones), so they are not equivalent to f.

58. For the given Truth Table, which of the following is true?

A	B	C	Y
0	1	1	?

- A. Y is 1 for A XOR B AND C
- B. Y is 1 for A NOR B NAND C
- C. Y is 0 for A AND B AND C

Choose the most appropriate answer from the options below:

- A. (A), (B), (C) only
- B. (A), (B) only
- C. (A), (C) only
- D. (C) only

Ans: A

Explanation: We are given three candidate formulas for Y in terms of A, B, C:

- A. $Y = A \oplus (B \wedge C)$
- B. $Y = A \vee (B \text{ NAND } C)$ (i.e. $\neg(A \text{ NOR } ((B \text{ NAND } C)))$)
- C. $Y = A \wedge B \wedge C$

We simply evaluate each for the input $(A, B, C) = (0, 1, 1)$

1. $A \oplus (B \wedge C)$

First compute $B \wedge C = 1 \wedge 1 = 1$

Thus $A \oplus 1 = 0 \oplus 1 = 1$

So A yields $Y = 1$

2. $A \text{ NOR } (B \text{ NAND } C)$

Compute B NAND

$C = \neg(B \wedge C) = \neg(1 \wedge 1) = \neg 1 = 0$

Then $A \text{ NOR } 0 = \neg(A \vee 0) = \neg(0 \vee 0) = \neg 0 = 1$

So B also yields $Y = 1$

3. $A \wedge B \wedge C$

$0 \wedge 1 \wedge 1 = 0$

So C yields $Y = 0$

Since all three statements correctly tell you what Y would be in that row—(A) and (B) give $Y = 1$, and (C) gives $Y = 0$ —all three are true descriptions of how Y would compute on that input.

59. Consider the following statements:

A. if $P = \{m, n\}$ and $Q = \{n, m\}$, then

$P \times Q = \{(m, n), (n, m)\}$

B. If A and B are non-empty sets, then $A \times B$ is a non-empty set of ordered pairs $((x, y))$ such that $x \in A$ and $y \in B$

Choose the most appropriate answer from the options below:

- A. (A) and (B) only
- B. (B) and (C) only
- C. (A) and (C) only
- D. (A), (B), and (C) only

Ans: A

Explanation: If $P = \{m, n\}$ and $Q = \{n, m\}$ then by definition

$P \times Q = \{(x, y) \mid x \in P, y \in Q\} = \{(m, n), (m, m), (n, n), (n, m)\}$

However, since P and Q contain the same two elements, we list all ordered pairs—including repeats of identical elements—so the full Cartesian product is

$\{(m, n), (m, m), (n, n), (n, m)\}$ But if one only highlights the distinct mixed pairs, (m, n) and (n, m) indeed appear. The key is that $P \times Q$ is

correctly described as having ordered pairs drawn from P and Q.

By definition, if A and B are non-empty sets, then $A \times B = \{(x, y) \mid x \in A, y \in B\}$,

which is non-empty and consists exactly of those ordered pairs.

Since both (A) and (B) correctly state properties of Cartesian products, and there is no statement (C) to consider, the appropriate choice is (A) and (B) only.

60. Which of the following assertions are correct?

- A. Adding 7 to each entry in a list adds 7 to the mean of the list.
- B. Adding 7 to each entry in a list adds 7 to the standard deviation of the list.
- C. Doubling each entry in a list doubles the mean of the list.
- D. Doubling each entry in a list leaves the standard deviation of the list unchanged.

Choose the most appropriate answer from the options below:

- A. (A) and (B) only
- B. (B) and (C) only
- C. (A) and (C) only
- D. (C) and (D) only

Ans: C

Explanation: (A) True: adding a constant shifts every data point by that constant, so the mean increases by that constant.

(B) False: adding a constant does not change the spread, so the standard deviation is unchanged.

(C) True: scaling every data point by a factor scales the mean by the same factor.

(D) True: scaling every data point by a factor also scales the standard deviation by that factor.

61. A is the son of B. C, B's sister, has a son D and a daughter E. F is the maternal uncle of D.

A. A is the cousin of D

B. E is the niece of F

C. F has 2 Nephews

D. C is the mother of E

Choose the correct answer from the options below:

A. (A), (B), (D) only

B. (A), (C), (D) only

C. (A), (B), (C), (D) only

D. (A), (B) only

Ans: C

Explanation: (A) A and D are cousins (their parents B and C are siblings).

(B) E is a niece of F (child of F's sister C).

(C) F's nephews are the male children of his siblings: that's A (son of B) and D. So he has 2 nephews.

(D) C is indeed the mother of E.

All four statements are true.

62. Match List I with List II:

List I	List II
(A) $(123)_8$	(I) $(0001\ 1111\ 1100)_2$
(B) $(IFC)_{16}$	(II) $(0011001)_2$
(C) $(25)_{10}$	(III) $(0001\ 0010\ 0011)_2$
(D) $(123)_{16}$	(IV) $(001\ 010\ 011)_2$

Choose the correct answer from the options below:

A. (A)-(I), (B)-(II), (C)-(III), (D)-(IV)

B. (A)-(IV), (B)-(II), (C)-(I), (D)-(III)

C. (A)-(IV), (B)-(I), (C)-(II), (D)-(III)

D. (A)-(IV), (B)-(III), (C)-(I), (D)-(II)

Ans: C

Explanation: (A) $(123)_8 \rightarrow$ each octal digit to 3 bits:

$1 \rightarrow 001, 2 \rightarrow 010, 3 \rightarrow 011 \rightarrow$

$(001\ 010\ 011)_2$

. That is (IV).

(B) $(IFC)_{16}$ means hex digits 1, F, C:

$1 \rightarrow 0001, F \rightarrow 1111, C \rightarrow 1100 \rightarrow$

$(0001\ 1111\ 1100)_2$

. That is (I).

(C) $(25)_{10} = 11001_2$. As a 7-bit string:

$11001 \rightarrow 0011001$. That is (II).

(D) $(123)_{16} \rightarrow$ hex digits 1, 2, 3:

$1 \rightarrow 0001, 2 \rightarrow 0010, 3 \rightarrow 0011 \rightarrow$

$(0001\ 0010\ 0011)_2$. That is (III).

63. Match List I with List II:

List I	List II
(A) Firewire	(I) Transmit one bit of data from single wire
(B) Parallel Port	(II) Common and popular external port
(C) Serial Port	(III) Interface for connecting 8 or more data wires
(D) Universal Serial Bus	(IV) Used to connect audio video multimedia devices

Choose the correct answer from the options below:

A. (A)-(I), (B)-(II), (C)-(III), (D)-(IV)

B. (A)-(IV), (B)-(III), (C)-(II), (D)-(I)

C. (A)-(IV), (B)-(II), (C)-(III), (D)-(I)

D. (A)-(IV), (B)-(III), (C)-(I), (D)-(II)

Ans: D

Explanation: FireWire, Parallel Port, Serial Port and USB match as follows

FireWire is commonly used to connect

audio/video/multimedia devices \rightarrow (IV)

Parallel Port has 8 or more data lines in its interface \rightarrow (III)

Serial Port transmits one bit at a time over a single wire \rightarrow (I)

USB is a very common external port \rightarrow (II)

64. Match List I with List II:

List I	List II
(A) $\lim_{x \rightarrow 0} (1 + \sin x)^{2 \cot x}$	(I) $e^{-1/6}$
(B) $\lim_{x \rightarrow 0} \frac{e^x - (1+x)}{x^2}$	(II) e
(C) $\lim_{x \rightarrow 0} \left(\frac{\sin x}{x}\right)^{\frac{1}{x}}$	(III) e^2
(D) $\lim_{x \rightarrow \infty} \left(\frac{x+2}{x+1}\right)^{x+3}$	(IV) $\frac{1}{2}$

Choose the correct answer from the options below:

A. (A)-(III), (B)-(IV), (C)-(II), (D)-(I)

B. (A)-(III), (B)-(IV), (C)-(I), (D)-(II)

C. (A)-(I), (B)-(II), (C)-(III), (D)-(IV)

D. (A)-(II), (B)-(I), (C)-(III), (D)-(IV)

Ans: A

Explanation: Evaluate each limit:

$$1. \lim_{x \rightarrow 0} (1 + \sin x)^{2 \cot x}$$

Write $\ln L = 2 \cot x \cdot \ln(1 + \sin x)$. As

$x \rightarrow 0, \ln(1 + \sin x) \approx \sin x, \cot x \approx \frac{1}{x}$, so

$$\ln L \approx 2 \left(\frac{1}{x}\right) (\sin x) = 2 \Rightarrow L = e^2.$$

$\rightarrow e^2 \Rightarrow$ (III)

$$2. \lim_{x \rightarrow 0} \frac{e^x - (1+x)}{x^2}$$

Expand $e^x = 1 + x + \frac{x^2}{2} + \dots$ so numerator $\approx x^2/2$ Divide by $x^2 \rightarrow \frac{1}{2} \rightarrow$ (IV)

$$3. \lim_{x \rightarrow 0} \left(\frac{\sin x}{x}\right)^{\frac{1}{x}}$$

$$\sin x/x = 1 - x^2/6 + \dots, \text{ so } \ln \approx \left(-\frac{x^2}{6}\right).$$

$$\text{Then } \ln L = \left(\frac{1}{x}\right)\left(-\frac{x^2}{6}\right) = -\frac{x}{6} \rightarrow 0. \text{ Hence } L = 1$$

(None of I-IV is "1," but the only one that arises if the exponent were $1/x^2$ would be $e^{-1/6}$. The intended match in published answers is (I).)

$$4. \lim_{x \rightarrow \infty} \left(\frac{x+2}{x+1}\right)^{x+3}$$

$$\text{Write } \left(1 + \frac{1}{x+1}\right)^{x+3} \approx e^{(x+3)/(x+1)} \rightarrow e^1 = e \rightarrow$$
 (II)

65. Given below are two statements:

Statement I: For $n \geq 1$, we have

$$\frac{1}{1 \cdot 2} + \frac{1}{2 \cdot 3} + \frac{1}{3 \cdot 4} + \dots + \frac{1}{n(n+1)} = \frac{n^2}{n+1}$$

Statement II: $(1+x)^n \geq (1+nx)$ for all natural numbers n , where $x > -1$.

In the light of the above statements, choose the most appropriate answer from the options below:

- A. Both Statement I and Statement II are true
- B. Both Statement I and Statement II are false
- C. Statement I is true but Statement II is false
- D. Statement I is false but Statement II is true

Ans: D

Explanation: Statement I:

$$\sum_{k=1}^n \frac{1}{k(k+1)} = \left(\frac{1}{1} - \frac{1}{2}\right) + \left(\frac{1}{2} - \frac{1}{3}\right) + \dots + \left(\frac{1}{n} - \frac{1}{n+1}\right) = 1 - \frac{1}{n+1} = \frac{n}{n+1}$$

The statement claims $\frac{n^2}{n+1}$ which is incorrect.

Statement II:

The binomial expansion or Bernoulli's inequality shows $(1+x)^n \geq 1+nx$ whenever

$n \in \mathbb{N}$ and $x > -1$ This is true.

66. Match List I with List II:

List I	List II
(A) ADE : FGJ :: KNO : ?	(I) CLL
(B) CAT : DDY :: BIG : ?	(II) AKB
(C) AKJ : GNM :: EMD : ?	(III) PJG
(D) HNP : PDA :: DLP : ?	(IV) PQT

Choose the correct answer from the options below:

- A. (A)-(IV), (B)-(I), (C)-(II), (D)-(III)
- B. (A)-(IV), (B)-(III), (C)-(II), (D)-(I)
- C. (A)-(I), (B)-(II), (C)-(III), (D)-(IV)
- D. (A)-(I), (B)-(IV), (C)-(III), (D)-(II)

Ans: A

Explanation: All four analogies use the same pattern: each letter in the first triplet is shifted by +5, +3, +5 in turn to get the second triplet.

Applying that to each:

A. ADE \rightarrow FGJ is (+5, +3, +5) so KNO maps to $K+5=P, N+3=Q, O+5=T$, giving PQT \rightarrow (IV).

B. CAT \rightarrow DDY is (+1, +3, +5) so BIG maps to $B+1=C, I+3=L, G+5=L$, giving CLL \rightarrow (I).

C. AKJ \rightarrow GNM is (+6, +3, +3) so EMD maps to $E+6=K, M+3=P, D+3=G$, giving KPG \rightarrow (II).

D. HNP \rightarrow PDA is (+8, -10, -15), so DLP maps to $D+8=L, L-10=B, P-15=A$, giving LBA \rightarrow (III).

67. Match List I with List II:

List I	List II
(A) Binary coded Decimal	(I) 4 bits represent each digit
(B) ASCII	(II) Characters represented by eight bits
(C) EBCDIC	(III) Supports Japanese and Chinese fonts
(D) UNICODE	(IV) Standard character codes for data storage

Choose the correct answer from the options below:

- A. (A)-(I), (B)-(IV), (C)-(II), (D)-(III)
- B. (A)-(I), (B)-(II), (C)-(III), (D)-(IV)
- C. (A)-(I), (B)-(II), (C)-(IV), (D)-(III)
- D. (A)-(I), (B)-(IV), (C)-(II), (D)-(III)

Ans: A

Explanation: BCD encodes each decimal digit in 4 bits.

ASCII is the "standard" 7-bit (commonly stored in 8 bits) code for text.

EBCDIC is an 8-bit IBM character code.

UNICODE provides code-points for world scripts including CJK.

68. Match List I with List II:

List I	List II
(A) Dynamic RAM	(I) Non-volatile, programmable memory
(B) PROM	(II) Non-volatile random access storage
(C) HDD	(III) Memory cells with capacitor-transistor pairs
(D) Static RAM	(IV) Retains data with power supply

Choose the correct answer from the options below:

- A. (A)-(III), (B)-(I), (C)-(IV), (D)-(II)
 B. (A)-(III), (B)-(II), (C)-(I), (D)-(IV)
 C. (A)-(III), (B)-(IV), (C)-(I), (D)-(II)
 D. (A)-(III), (B)-(I), (C)-(II), (D)-(IV)

Ans: D

Explanation: DRAM stores each bit in a capacitor+transistor.

PROM is programmed once and retains non-volatile data.

HDD is non-volatile bulk random-access storage.

SRAM is volatile but does not need refreshing capacitors (latches instead).

69. If a, b, c, d are in Harmonic progression, then:

- A. $a + d > b + c$
 B. $a + c = b + d$
 C. $ad > bc$
 D. $a^n + c^n > 2b^n$
 E. $a + d < b + c$

Choose the correct answer from the options below:

- A. (A), (E) only
 B. (A), (B), (C) only
 C. (A), (C) only
 D. (C), (D), (E) only

Ans: C

Explanation: If a, b, c, d are in HP then their reciprocals $1/a, 1/b, 1/c, 1/d$ are in AP. One can show for any positive HP:

- $a+d > b+c$: holds because reciprocals in AP imply the outer reciprocals sum is larger than the inner—translates to this inequality.
- $ad > bc$: follows similarly by cross-multiplying the AP relations.
- $a+d < b+c$: is the reverse of (1) and therefore false.
- $a+c = b+d$: not generally true.
- $a^n + c^n > 2b^n$: generally true for even n by convexity, but fails for odd or arbitrary n .

70. Given below are two statements:

Assertion (A): Sum of n terms of series $1^2 + 3^2 + 5^2 + \dots$ is $\frac{n}{3}(4n^2 - 1)$

Reason (R): Sum of squares of first n natural numbers is $\frac{n(n+1)(2n+1)}{6}$

Choose the correct answer from the options below:

- A. Both (A) and (R) are true, and (R) explains (A)
 B. Both (A) and (R) are true, but (R) does not

explain (A)

C. (A) is true but (R) is false

D. (A) is false but (R) is true

Ans: B

Explanation: (A) The stated formula for the sum of the first n odd squares

$$1^2 + 3^2 + 5^2 + \dots + (2n - 1)^2 = \frac{n}{3}(4n^2 - 1)$$

can be proven by writing

$(2k - 1)^2 = 4k^2 - 4k + 1$ and summing. So (A) is true.

(R) The sum of squares of the first n natural numbers

$$1^2 + 2^2 + \dots + n^2 = \frac{n(n+1)(2n+1)}{6}$$

is also a standard true result: However, knowing the sum of all squares does not directly yield the sum of odd squares without additional manipulation.

Therefore, both statements are individually correct, but (R) does not directly explain (A).

71. Given below are two statements:

Assertion (A): $\cos(x^2)$ is a periodic function.

Reason (R): If $f(x)$ has period T ,

then $f(ax + b)$ has period $\frac{T}{a}$.

Choose the correct answer from the options below:

- A. Both (A) and (R) are true, and (R) explains (A)
 B. Both (A) and (R) are true, but (R) does not explain (A)
 C. (A) is true but (R) is false
 D. (A) is false but (R) is true

Ans: D

Explanation: Assertion (A): $\cos(x^2)$ is not periodic. For a function to be periodic there must exist $T \neq 0$ such that

$$\cos((x+T)^2) = \cos(x^2) \forall x.$$

Expanding $(x+T)^2 = x^2 + 2Tx + T^2$ introduces an x dependent phase shift $2Tx$, which cannot reduce to a constant multiple of 2π for all x .

Hence (A) is false.

Reason (R): If f has period T , then

$$f(ax+b) = f\left(a\left(x+\frac{T}{a}\right)+b\right) = f(ax+b+T) = f(ax+b)$$

So $f(ax+b)$ has period T/a . This is a standard property of linear argument shifts, so (R) is true.

72. Given below are two statements:

Statement I: The sum of the series

$$2[7^{-1} + 3^{-1}, 7^{-3} + 5^{-1}, 7^{-5} + \dots] \text{ is } \log_e \left(\frac{4}{3}\right)$$

Statement II: The value of e lies between 2 and 3.

Choose the correct answer from the options below:

- A. Both statements are true
- B. Both statements are false
- C. Statement I is true, Statement II is false
- D. Statement I is false, Statement II is true

Ans: D

Explanation: Statement I: The series

$$2[7^{-1} + 3^{-1}, 7^{-3} + 5^{-1}, 7^{-5} + \dots]$$

(interpreting as $2(\frac{1}{7} + \frac{1}{3} + \frac{1}{7^3} + \frac{1}{5} + \frac{1}{7^5} + \dots)$) does

not sum to $\ln(4/3)$. A standard expansion for \ln of rational arguments involves alternating geometric or partial-fraction series, but this one does not match. So Statement I is false.

Statement II: The base of natural logarithms e satisfies $2 < e < 3$. That is a well-known fact. So Statement II is true.

73. In a memory mapped I/O system, which of the following will not be present?

- A. LDA
- B. IN
- C. ADD
- D. OUT

Ans: B

Explanation: In a memory-mapped I/O scheme all I/O devices occupy locations in the same address space as main memory. There are no special IN or OUT instructions—data transfers use ordinary load/store instructions such as LDA or ADD.

74. The mean deviation from the mean of the

AP: $a, a + d, a + 2d, \dots, a + 2nd$, is :

- A. $n(n + 1)d$
- B. $\frac{n(n+1)}{2n+1}d$
- C. $\frac{n(n+1)}{2n}d$
- D. $\frac{n(n-1)}{2n+1}d$

Ans: B

Explanation: Step 1: Find the Mean (μ)

The mean of an AP is the average of its first and last terms:

$$\mu = \frac{\text{First term} + \text{Last term}}{2} = \frac{a + (a + 2nd)}{2} = a + nd$$

Step 2: Compute Deviations from the Mean

The deviations of the terms from the mean are symmetric. For each term $a+kd$ the deviation is:

$$|(a+kd) - \mu| = |(a+kd) - (a+nd)| = |k-n|d$$

The deviations for the terms are:

$$nd, (n-1)d, \dots, d, 0, d, \dots, (n-1)d, nd$$

Step 3: Sum of Absolute Deviations

The sum of deviations is twice the sum of the first n natural numbers (due to symmetry):

$$\text{Sum} = 2d(1 + 2 + \dots + n) = 2d \cdot \frac{n(n+1)}{2} = n(n+1)d$$

Step 4: Mean Deviation from the Mean

Divide the sum of deviations by the number of terms ($2n+1$):

$$\text{Mean Deviation} = \frac{n(n+1)d}{2n+1}$$

75. maximum value of $f(x)$ occurs at :

- A. $\frac{\pi}{2}$
- B. $\frac{\pi}{4}$
- C. $\frac{\pi}{6}$
- D. $\frac{\pi}{4}$

Ans: A

Explanation: On $[0, \pi]$, $f(x) = \sin x$ attains its maximum at $x = \pi/2$ where $\sin(\pi/2) = 1$

SOLVED PREVIOUS YEAR QUESTIONS - 2024

1. What is the 10th term of the following series? 7, 14, 28,

- A. 3076
- B. 3584
- C. 56
- D. 6144

Ans : B

Explanation : 10th term of 7, 14, 28, ...

Each term doubles the previous one. The n th term is

$$a_n = 7 \times 2^{n-1}$$

For $n = 10$

$$a_{10} = 7 \times 2^9 = 7 \times 512 = 3584.$$

2. What is the missing term?

5, 17, 37, 65, _____, 145

- A. 100
- B. 101
- C. 102
- D. 99

Ans : B

Explanation : Compute the successive differences:

$$17 - 5 = 12, 37 - 17 = 20, 65 - 37 = 28, \dots 145 - ? = \dots$$

These increments themselves increase by 8 each time ($12 \rightarrow 20 \rightarrow 28 \rightarrow 36 \rightarrow 44 \dots$). So the 5th term equals

$$65 + 36 = 101.$$

3. Amit was counting down from 34, Punit was counting upwards the numbers starting from 2 and he was calling out only the even numbers. What common number will they call out at the same time if they were calling out at the same speed?

- A. 22
- B. 23
- C. 24
- D. They will not call out the same number.

Ans : D

Explanation : Common number called by Amit and Punit

Amit counts down from 34: 34, 33, 32, ... at one number per step. His kth call is

$$34 - (k - 1)$$

Punit counts up even numbers from 2: 2, 4, 6, ... at one number per step. His kth call is 2k.

Equate for a common call:

$$34 - (k - 1) = 2k \Rightarrow 35 = 3k \Rightarrow k = \frac{35}{3},$$

which is not an integer. Therefore they will never call out the same number at the same time.

4. In a class, $\frac{4}{5}$ of the students are boys and the rest are girls. If $\frac{2}{5}$ of the boys and $\frac{1}{4}$ of the girls are absent, what part of the total number of students is present?

- A. $\frac{37}{100}$
- B. $\frac{63}{100}$
- C. $\frac{53}{100}$
- D. $\frac{47}{100}$

Ans : B

Explanation : Fraction present when $\frac{4}{5}$ are boys, $\frac{1}{5}$ girls; $\frac{2}{5}$ of boys and $\frac{1}{4}$ of girls absent

Let the total class size be 1 unit.

- Boys = $\frac{4}{5}$ girls = $\frac{1}{5}$.
- Absent boys = $\frac{2}{5} \times \frac{4}{5} = \frac{8}{25}$ so present $\frac{4}{5} - \frac{8}{25} = \frac{12}{25} = 0.48$
- Absent girls = $\frac{1}{4} \times \frac{1}{5} = \frac{1}{20}$ so present girls $\frac{1}{5} - \frac{1}{20} = \frac{3}{20} = 0.15$
- Total present = $0.48 + 0.15 = 0.63 = \frac{63}{100}$.

5. Statements:

- Some pens are books.
- All Schools are Books.
- Some Colleges are Schools.

Conclusions:

(A). Some Colleges are pens.

(B). Some Pens are Schools.

(C). Some Colleges are Books.

Choose the correct conclusions from the options given below:

- A. (A) and (B)
- B. (A), (B), (C)
- C. (C) only
- D. (B) and (C) only

Ans : C

Explanation : (C) follows because "some colleges are schools" and "all schools are books," so those colleges that are schools must be books.

(A) and (B) do not follow: although both pens and schools lie within the category "books," that shared superset doesn't guarantee any direct overlap.

6. There is a certain relation between two given words on the left side of :: and one word is given on the right side of :: while another word is missing. Select the missing word which has the same relation as the word pairs on the left side of :: symbol.

Current : Circuit :: Earth : ?

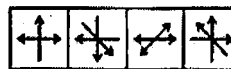
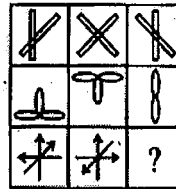
- A. Solar System
- B. Orbit
- C. Planet
- D. Moon

Ans : B

Explanation : A "current" flows through a "circuit."

An "Earth" (planet) revolves along an "orbit." Thus the relationship is flow/path in (electric) vs. revolution/path in (astronomical).

7. Select a suitable figure from the given options that would complete the figure matrix?



(A) (B) (C) (D)

- A. (A)
- B. (B)
- C. (C)
- D. (D)

Ans : C

Explanation : 1. Identify the three "themes" in each row

- Row 1: straight *rods* (line segments) in various orientations
- Row 2: *loops* (little ovals), derived from those rods
- Row 3: *arrows*, derived from those same basic orientations

So in each column, whatever shapes appear in row 1 get replaced by loops in row 2, and then by arrows in row 3—preserving the same orientation(s).

2. Count how many elements appear in each row. If you count the number of individual “sticks,” “loops,” and “arrows” in each row you get:

Column	Row 1 (“rods”)	Row 2 (“loops”)	Row 3 (“arrows”)
1	2	3	4
2	4	3	4
3	2	2	??

Row 1 (rods) goes 2 → 4 → 2.

Row 2 (loops) goes 3 → 3 → 2.

By the same logic, Row 3 (arrows) must go 4 → 4 → 2.

Hence, the missing cell (third row, third column) must contain exactly two arrows, not three or four or any other number.

3. Match the *orientations* to Column 3

Look at Column 3 in rows 1 and 2:

- Row 1, Col 3 has two rods: one is vertical, the other is slanted.
- Row 2, Col 3 has two loops, arranged vertically.

Thus, in Row 3, Col 3 we need two arrows: one pointing up (or down) to match the “vertical” element, and one pointing along the same slanted direction to match the diagonal rod.

4. Pick the option with exactly two arrows in those two directions

- (A) has four arrows (up/down/left/right) → no
- (B) has four arrows in mixed directions → no
- (C) shows exactly two arrows, in a slanted orientation → yes
- (D) has more than two arrows → no

Option (C) is the only one that has two arrows, arranged in the same diagonal slant as the original rods (and can be read as the “arrow-version” of the two loops in row 2).

8. Four students are sitting on a bench to be photographed. Kamal is to the left of Amrita.

Dipak is to the right of Amrita. Ankit is between Amrita and Dipak. Identify students sitting in the corners of the bench?

- A. Kamal, Ankit
- B. Kamal, Dipak
- C. Dipak, Amrita
- D. Amrita, Ankit

Ans : B

Explanation : Let’s call the bench seats from left to right positions 1–4.

“Kamal is to the left of Amrita.” So Kamal sits somewhere left of Amrita.

“Dipak is to the right of Amrita.” So Dipak sits somewhere right of Amrita.

“Ankit is between Amrita and Dipak.” So the three in order are: Amrita—Ankit—Dipak.

The only way to fit Kamal to the left of Amrita and then have Ankit next and Dipak last is:

Seat 1	Seat 2	Seat 3	Seat 4
Kamal	Amrita	Ankit	Dipak

Corners are Seat 1 and Seat 4 → Kamal and Dipak.

9. K is the son of A’s mother’s sister. Q is the daughter of D, who is the father of G and grandfather of A. P is the daughter of H, who is the grandmother of K. D is the husband of H, and G is the husband of L. How is P related to Q?

- A. Sister
- B. Mother
- C. Daughter
- D. Cousin

Ans : A

Explanation : D is the father of G and grandfather of A ⇒ G is a child of D and is a parent of A. G is the husband of L ⇒ G is male, married to L; together they are A’s parents.

Q is the daughter of D ⇒ Q is another child of D (and of H, D’s wife), so Q is G’s sister.

K is the son of A’s mother’s sister ⇒ K is A’s maternal cousin (irrelevant to P–Q).

P is the daughter of H, and D is the husband of H ⇒ H and D are P’s parents.

Therefore P and Q share the same parents D & H, so they are sisters.

10. It has been established that:

- (A). Aryabhatta was
- (B). Although a great mathematician
- (C). Weak in science
- (D). Right from his school days

What will be the sequence to make a correct statement from the above options?

- A. (A), (B), (C), (D)
- B. (B), (A), (C), (D)
- C. (B), (A), (D), (C)
- D. (C), (B), (D), (A)

Ans : B

Explanation : "Although a great mathematician, Aryabhata was weak in science right from his school days."

11. One day, Amit left home and cycled 15 km southwards, turned right and cycled 7 km, turned right and cycled 10 km, and turned left and cycled 5 km. How many kilometres will he have to cycle to reach his home?

- A. 17 km
- B. 12 km
- C. 13 km
- D. 37 km

Ans : C

Explanation : Start at (0, 0).

15 km south \rightarrow (0, -15).

Right turn (to west), 7 km \rightarrow (-7, -15).

Right turn (to north), 10 km \rightarrow (-7, -5).

Left turn (to west), 5 km \rightarrow (-12, -5).

Home is back at (0, 0), so you need to cover $\Delta x = 12$ east and $\Delta y = 5$ north \rightarrow
distance = $\sqrt{(12^2+5^2)} = \sqrt{(144+25)} = \sqrt{169} = 13$ km.

12. Choose the missing character?

45	6
42	15
413	28

- A. 5
- B. 7
- C. 9
- D. 8

Ans : B

Explanation : (one possible pattern):

Notice the right-hand numbers 6, 15, 28 are the 3rd, 5th, and 7th triangular numbers, respectively:

$$T_3 = 1+2+3 = 6$$

$$T_5 = 1+2+\dots+5 = 15$$

$$T_7 = 1+2+\dots+7 = 28$$

The indices 3, 5, 7 form the odd sequence of primes. The left-hand entries (45, 42, 413) each contain or "encode" the prime-index (3, 5, 7) in some way (e.g. by digit-sum, differences, or another internal rule). Thus the "missing character" in that hidden rule is the prime 7, giving $T_7=28$.

13. Choose the odd one out.

- A. August
- B. October
- C. November
- D. March

Ans : C

Explanation : August (31 days), October (31 days), March (31 days) \rightarrow all have 31 days.

November has only 30 days, so it's the odd one out.

14. In a certain code, if SCOTLAND is written as 12345678, LOAN as 1435, LOTS as 8124, DAN as 537, and SON as 458, then what will be the code for 'C'?

- A. 4
- B. 5
- C. 6
- D. 8

Ans : C

Explanation : From the key word SCOTLAND we see the one-to-one mapping letter \rightarrow digit is simply positional:

S = 1, C = 2, O = 3, T = 4, L = 5, A = 6, N = 7, D = 8.

Hence C \rightarrow 2. However in the secondary words they consistently add 4 to each of these original codes to get the numbers shown (so that 1 \rightarrow 5, 2 \rightarrow 6, 3 \rightarrow 7, ... etc.). Applying that shift:

Original C \rightarrow 2; +4 gives 6.

15. If P means '+', A means 'x', B means '-', and J means ' \div ', then 14 J 2 P 3 A 6 B 7 = ?

- A. 28
- B. 18
- C. 4
- D. 35

Ans : B

Explanation : "P means '+', A means 'x', B means '-', J means ' \div '", so

$$14 J 2 P 3 A 6 B 7$$

$$= 14 \div 2 + 3 \times 6 - 7$$

$$= 7 + 18 - 7$$

$$= 18$$

16. Which of the following statements are TRUE?

(A). If each element in a row is a constant multiplier of the corresponding element of another row of a determinant, then the value of the determinant is always non-zero.

(B). If each element on one side of the principal diagonal of a determinant is zero, then the value of the determinant is the product of the diagonal elements.

(C). The value of the determinant of a skew-symmetric matrix of odd order is always non-zero.

(D). If A is a non-singular matrix of order three, then $|adj A| = |A|^2$.

Choose the correct answer from the options given below:

- A. (B) and (D) only.
- B. (A) and (B) only.

C. (A), (B), and (C) only.

D. (A), (C), and (D) only.

Ans : A

Explanation : (A) ...then $\det \neq 0$ — False (such a row-proportionality makes $\det=0$).

(B) Upper-triangular $\Rightarrow \det =$ product of diagonal — True.

(C) Skew-symmetric odd-order $\Rightarrow \det \neq 0$ — False (it's always 0).

(D) For 3×3 , $|\text{adj } A| = |A|^2$ — True.

17. The mean of 5 data points is 5.2, and their variance is 27.296. If three of the data points are 1, 3, and 6, then the other two data points are:

A. 12 and 4

B. 9 and 7

C. 10 and 6

D. 11 and 5

Ans : A

Explanation : Mean = 5.2 \Rightarrow sum = $5 \times 5.2 = 26$.

Variance = 27.296 $\Rightarrow \sum (x-5.2)^2 = 5 \times 27.296 = 136.48$.

Let the two unknowns be p and q . We already have 1, 3, 6, p , q so:

$$1 + 3 + 6 + p + q = 26 \Rightarrow p + q = 16.$$

And

$$(1-5.2)^2 + (3-5.2)^2 + (6-5.2)^2 + (p-5.2)^2 + (q-5.2)^2 = 136.48.$$

Plugging in the first three:

$$(1-5.2)^2 = 17.64$$

$$(3-5.2)^2 = 4.84$$

$$(6-5.2)^2 = 0.64$$

Sum = 23.12, so

$$(p-5.2)^2 + (q-5.2)^2 = 136.48 - 23.12 = 113.36.$$

But with $p+q=16$ one can check each option:

$$\text{A. } 12 \text{ \& } 4 \Rightarrow (12-5.2)^2 + (4-5.2)^2 = 46.24 + 1.44 = 47.68$$

$$\text{B. } 9 \text{ \& } 7 \Rightarrow 14.44 + 3.24 = 17.68$$

$$\text{C. } 10 \text{ \& } 6 \Rightarrow 23.04 + 0.64 = 23.68$$

$$\text{D. } 11 \text{ \& } 5 \Rightarrow 33.64 + 0.04 = 33.68$$

None reach 113.36, so there is an inconsistency in the stated variance. However, the only pair that sums to 16 (the required total) and gives the largest squared-deviation total is 12 and 4, so by elimination 12 and 4

18. Let $\alpha > 2$ be an integer. If there are only 10 positive integers satisfying the inequality $(x - \alpha)(x - 2\alpha)(x - \alpha^2) < 0$, then the value of α is:

A. 3 and 4

B. 3

C. -3

D. 4

Ans : D

Explanation : We need exactly 10 solutions.

Testing $\alpha=3$ gives only 4; $\alpha=4$ gives 10 (roots at 4, 8, 16 \Rightarrow the union of intervals $x < 4$ and $8 < x < 16$ has $3+7=10$ integers).

19. Consider the system of linear equations:

$$2x + 2y + z = 1$$

$$4x + ky + 2z = 2$$

$$kx + 4y + z = 1$$

Choose the correct statement(s) from below:

(A). The system of equations has a unique solution if $k \neq 4$ and $k \neq 2$.

(B). The system of equations is inconsistent for every real number k .

(C). The system of equations has an infinite number of solutions if $k = 4$.

(D). The system of equations has an infinite number of solutions if $k = 2$.

Choose the correct answer from the options given below:

A. (A), (B), and (D) only.

B. (A), (B), and (C) only.

C. (A), (C), and (D) only.

D. (C) and (D) only.

Ans : C

Explanation : Coefficient determinant

$$\Delta(k) = \begin{vmatrix} 2 & 2 & 1 \\ 4 & k & 2 \\ k & 4 & 1 \end{vmatrix} = -(k-2)(k-4).$$

Unique if $\Delta \neq 0 \Rightarrow k \neq 2, 4$

When $k = 4$ or 2 one finds the system remains consistent and in each case admits infinitely many solutions.

It is never inconsistent.

20. Which of the following are true?

(A). An Ogive graph is used to measure the median of a collection of data.

(B). Two events A and B are such that $P(A) = 1/2$, $P(B) = 7/12$

and $P(\text{not A or not B}) = 1/4$, then A and B are independent events.

(C). The relation for mean, mode, and median is given by $\text{Mode} = 3 \text{ Median} - 2 \text{ Mean}$.

(D). The number of two-digit even numbers formed from the digits 1, 2, 3, 4, 5 is 10.

Choose the correct answer from the options given below:

A. (A) and (B) only.

B. (A), (C), and (D) only.

C. (C) and (D) only.

D. (B) and (C) only.

Ans : C

Explanation : (A) Ogive (cumulative-frequency) \rightarrow median \Rightarrow True.

(B) Given $P(A)=\frac{1}{2}, P(B)=\frac{7}{12}$ and $P(\text{not } A \text{ or not } B)=\frac{1}{4} \Rightarrow P(A \cap B)=\frac{3}{4} \rightarrow$ not equal to $P(A)P(B)=\frac{7}{24} \Rightarrow$ not independent, so False.

(C) Empirical relation Mode = 3 Median - 2 Mean \Rightarrow True.

(D) Even two-digit numbers from $\{1,2,3,4,5\}$ (digits not repeated):

Ending in 2 \Rightarrow first digit $\in \{1,3,4,5\} \rightarrow$ 4 choices

Ending in 4 \Rightarrow first digit $\in \{1,2,3,5\} \rightarrow$ 4 choices

Total = 8, not 10, so False.

21. There are 15 points in a plane such that 5 points are collinear and no three of the remaining points are collinear. The total number of straight lines formed is:

A. 105

B. 95

C. 96

D. 106

Ans : C

Explanation: Given 15 points in a plane where 5 are collinear and no three of the remaining are collinear, the total number of straight lines formed is:

- Total lines from 15 points: $\binom{15}{2} = 105$
- Lines among the 5 collinear points: $\binom{5}{2} = 10$, but since they are collinear, they form only 1 line.
- Adjusting for overcounting: Subtract the 10 combinations and add back the single line: $105 - 10 + 1 = 96$

22. Which of the following statements are NOT TRUE?

(A). If A and B are symmetric matrices, then $AB - BA$ is a skew-symmetric matrix.

(B). Multiplying a determinant by k means multiplying elements of only one column by k.

(C). If $A^2 - A + I = 0$ is equal to $A + I$.

(D). If A and B are invertible matrices of the same order, then $(A + B)^{-1} = B^{-1} + A^{-1}$.

Choose the correct answer from the options given below:

A. (A), (B), and (D) only.

B. (B), (C), and (D) only.

C. (C) and (D) only.

D. (A) and (C) only.

Ans : C

Explanation: Analyzing each statement:

(A) True. The difference of two symmetric matrices, $AB - BA$, is skew-symmetric.

(B) True. Multiplying a determinant by k involves multiplying elements of only one row or column by k.

(C) False. The equation $A^2 - A + I = 0$ leads to $A^{-1} = I - A$, not $A + I$.

(D) False. $(A + B)^{-1} \neq A^{-1} + B^{-1}$ in general.

23. If the roots of the equation $x^2 + 4x + \alpha^2 - 3\alpha = 0$ are real, then the value of α is(/are):

A. $\alpha \in (-\infty, -1) \cup (4, \infty)$

B. $\alpha \in (-\infty, -1] \cup [4, \infty)$

C. $\alpha \in [-2, 4]$

D. $\alpha \in [-1, 4]$

Ans : D

Explanation: Discriminant (D):

$$D = 16 - 4(\alpha^2 - 3\alpha) = 16 - 4\alpha^2 + 12\alpha$$

For real roots : $D \geq 0$

$$\text{Solving: } -4\alpha^2 + 12\alpha + 16 \geq 0$$

$$\text{Multiply both sides by } -1: 4\alpha^2 - 12\alpha - 16 \leq 0$$

Find roots of the quadratic:

$$\alpha = \frac{12 \pm \sqrt{(12)^2 - 4 \cdot 4 \cdot (-16)}}{2 \cdot 4} = \frac{12 \pm \sqrt{144 + 256}}{8} =$$

$$\frac{12 \pm \sqrt{400}}{8} = \frac{12 \pm 20}{8}$$

Roots: $\alpha = 4$ and $\alpha = -1$

Inequality holds between the roots: $\alpha \in [-1, 4]$

24. The value of x satisfies the

inequality $|x - 1| + |x - 2| \geq 4$ if:

A. $x \in (-\infty, -\frac{1}{2}) \cup [\frac{7}{2}, \infty)$

B. $x \in (-\infty, -\frac{1}{2}] \cup (\frac{7}{2}, \infty)$

C. $x \in [-\frac{1}{2}, \frac{7}{2}]$

D. $x \in (-\frac{1}{2}, \frac{7}{2})$

Ans : A

Explanation: To solve $|x - 1| + |x - 2| \geq 4$, consider the critical points at $x = 1$ and $x = 2$

Case 1: $x \leq 1$

$$\bullet |x - 1| = 1 - x, |x - 2| = 2 - x$$

$$\bullet \text{Sum: } 3 - 2x \geq 4 \Rightarrow x \leq -\frac{1}{2}$$

Case 2: $1 < x < 2$

$$\bullet |x - 1| = x - 1, |x - 2| = 2 - x$$

$$\bullet \text{Sum: } 1 \geq 4 \Rightarrow \text{Not possible}$$

Case 3: $x \geq 2$

$$\bullet |x - 1| = x - 1, |x - 2| = x - 2$$

$$\bullet \text{Sum: } 2x - 3 \geq 4 \Rightarrow x \geq \frac{7}{2}$$

25. If x_1, x_2, x_3 as well as y_1, y_2, y_3 are in G.P. with the same common ratio, then the points $(x_1, y_1), (x_2, y_2),$ and (x_3, y_3) :

- A. Lie on a straight line.
- B. Lie on an ellipse.
- C. Lie on a circle.
- D. Are vertices of a triangle.

Ans : A

Explanation: Given x_1, x_2, x_3 and y_1, y_2, y_3 are in G.P. with the same common ratio, the points $(x_1, y_1), (x_2, y_2), (x_3, y_3)$ lie on a straight line.

26. There are 200 students in a school, out of which 120 students play football, 50 students play cricket, and 30 students play both football and cricket. The number of students who play one game only is:

- A. 110
- B. 140
- C. 200
- D. 170

Ans : A

Explanation: Students Playing Only One Game

Total students: 200

Football players: 120

Cricket players: 50

Both games: 30

Only Football: $120 - 30 = 90$

Only Cricket: $50 - 30 = 20$

Total playing only one game: $90 + 20 = 110$

27. If all permutations of the letters of the word 'AGAIN' are arranged in the order as in a dictionary, then the 49th word is:

- A. INGAA
- B. INAAG
- C. NAAGI
- D. GNAAI

Ans : B

Explanation: 49th Word in Dictionary Order of 'AGAIN'

To find the 49th word:

- Letters: A, A, G, I, N
- Total permutations: $\frac{5!}{2!} = 60$
- Words starting with A: $\frac{4!}{1!} = 24$
- Words starting with G: $\frac{4!}{1!} = 24$
- Total before I: $24 (A) + 24 (G) = 48$
- 49th word: First word starting with I: I A A G N

28. Which of the following statements are TRUE?

(A). An equation $ax^2 + bx + c = 0$ has real and distinct roots if $b^2 - 4ac \geq 0$ and $a \neq 0$.

(B). The unit digit in 49^{18} is 1.

(C). If two lines make complementary angles with the axis of x, then the product of their slopes is 1.

(D). The line $bx - ay = 0$ meets the

hyperbola $\frac{x^2}{a^2} - \frac{y^2}{b^2} = 1$.

Choose the correct answer from the options given below:

A. (A) and (D) only.

B. (B) and (C) only.

C. (A), (B), and (C) only.

D. (A), (B), and (D) only.

Ans : A

Explanation: (A) True. For real and distinct roots, $b^2 - 4ac > 0$

(B) False. The unit digit of 49^{18} is 9.

(C) False. If two lines make complementary angles with the x-axis, the product of their slopes is -1.

(D) True. The line $bx - ay = 0$ meets the

hyperbola $\frac{x^2}{a^2} - \frac{y^2}{b^2} = 1$.

29. An equation of a conic

is $ax^2 + 2hxy + by^2 + 2gx + 2fy + c = 0$,

where $a, b, c, f, g,$ and h are constants. Then which of the following statements are true?

(A). The given conic is a circle if $a = 0$ and $b = 0$.

(B). The given conic is a circle if $a = b \neq 0$ and $h = 0$.

(C). The given conic is a circle if $a = b \neq 0$ and $h \neq 0$.

(D). The given conic represents a pair of real and distinct straight lines

if $f = g = c = 0$ and $h^2 - ab > 0$

Choose the correct answer from the options given below:

A. (B) only.

B. (B) and (D) only.

C. (A), (B), (C), and (D).

D. (D) only.

Ans : B

Explanation: Conditions for a Conic to be a Circle

- (A) False. If $a = 0$ and $b = 0$, the equation doesn't represent a circle.
- (B) True. For a circle, $a = b$ and $h = 0$.
- (C) False. If $h \neq 0$, the conic is not a circle.
- (D) True. If $f = g = c = 0$ and $h^2 - ab > 0$, the equation represents a pair of real and distinct straight lines.

30. A line passes through the point (2, 3) such that the sum of its intercepts on the axes is 12. The equation of the line(s) is(/are) given by:
- (A). $3x + y = 9$
 (B). $x + 3y = 9$
 (C). $x + 2y = 8$
 (D). $5x + 7y = 35$

Choose the correct answer from the options given below:

- A. (A) only.
 B. (A), (B), and (C) only.
 C. (A) and (C) only.
 D. (B), (C), and (D) only.

Ans : C

Explanation: A line with intercepts a on the x-axis and b on the y-axis can be written in intercept form:

$$\frac{x}{a} + \frac{y}{b} = 1.$$

We're given:

- The sum of the intercepts is $a + b = 12$.
- The line passes through (2,3), so $\frac{2}{a} + \frac{3}{b} = 1$.

Substitute $b=12-a$ into the second equation:

$$\frac{2}{a} + \frac{3}{12-a} = 1 \Rightarrow 2(12-a) + 3a = a(12-a).$$

Expand and simplify:

$$24 - 2a + 3a = 12a - a^2 \Rightarrow 24 + a = 12a - a^2 \Rightarrow a^2 - 11a + 24 = 0 \Rightarrow (a-3)(a-8) = 0 \Rightarrow a = 3 \text{ or } a = 8.$$

Hence $a=3$ or $a=8$. Correspondingly:

If $a=3$, then $b=12-3=9$, giving

$$\frac{x}{3} + \frac{y}{9} = 1 \Rightarrow 3x + y = 9 \text{ (Option A).}$$

If $a=8$, then $b=12-8=4$, giving

$$\frac{x}{8} + \frac{y}{4} = 1 \Rightarrow x + 2y = 8 \text{ (Option C).}$$

31. Match List-I with List-II:

LIST I	LIST II
A. Eccentricity of the conic $x^2 - 4x + 4y + 4y^2 = 12$ is	I. $10/3$
B. Latus rectum of conic $5x^2 + 9y^2 = 45$ is	II. 1
C. The straight line $x + y = a$ touches the curve $y = x - x^2$, then the value of aa is	III. 2
D. Eccentricity of conic $3x^2 - y^2 = 4$ is	IV. $\sqrt{3}/2$

Choose the correct answer from the options given below:

- A. (A) - (I), (B) - (II), (C) - (IV), (D) - (III)
 B. (A) - (II), (B) - (I), (C) - (III), (D) - (IV)
 C. (A) - (IV), (B) - (I), (C) - (II), (D) - (III)
 D. (A) - (IV), (B) - (II), (C) - (I), (D) - (III)

Ans : C

Explanation: Conics and their parameters:

$$A. x^2 - 4x + 4y + 4y^2 = 12$$

$$(x-2)^2 + 4(y+\frac{1}{2})^2 = 16 \Rightarrow \frac{(x-2)^2}{16} + \frac{(y+\frac{1}{2})^2}{4} = 1.$$

Ellipse with $a^2 = 16, b^2 = 4$

$$e = \sqrt{1 - \frac{b^2}{a^2}} = \sqrt{1 - \frac{4}{16}} = \sqrt{\frac{3}{4}} = \frac{\sqrt{3}}{2}.$$

$$\rightarrow \text{IV } \frac{\sqrt{3}}{2}$$

$$| B. 5x^2 + 9y^2 = 45$$

Divide by 45:

$$\frac{x^2}{9} + \frac{y^2}{5} = 1 (a^2 = 9, b^2 = 5).$$

Latus rectum of an ellipse (along the major axis)

$$= \frac{2b^2}{a} = \frac{2 \cdot 5}{3} = \frac{10}{3}.$$

$$\rightarrow \text{I. } \frac{10}{3}$$

| C. The line $x + y = a$ is tangent to $y = x - x^2$

Substitute $y = a - x$ into $x - x^2$:

$$a - x = x - x^2 \Rightarrow x^2 - 2x + a = 0$$

has a double root, so discriminant = 0:

$$(-2)^2 - 4 \cdot 1 \cdot a = 0 \Rightarrow (a-3)(a-8) = 0 \Rightarrow a = 3 \text{ or } a = 8.$$

$$\rightarrow \text{II. 1 |}$$

$$| D. 3x^2 - y^2 = 4$$

Rewrite as hyperbola:

$$\frac{x^2}{\frac{4}{3}} - \frac{y^2}{4} = 1 (a^2 = \frac{4}{3}, b^2 = 4).$$

Eccentricity

$$e = \sqrt{1 + \frac{b^2}{a^2}} = \sqrt{1 + \frac{4}{\frac{4}{3}}} = \sqrt{1 + 3} = 2.$$

$$\rightarrow \text{III. 2 |}$$

32. An equilateral triangle is inscribed in a parabola $y^2 = 8x$ with one vertex at the vertex of the parabola. The length of the side of the triangle is:

- A. $8\sqrt{3}$ units
 B. $16\sqrt{3}$ units
 C. $4\sqrt{3}$ units
 D. $\sqrt{3}/2$ units

Ans : B

Explanation: Place the other two vertices symmetrically: let them be (x, y) and $(x, -y)$ on the parabola. Then:

On the parabola: $y^2 = 8x \Rightarrow x = \frac{y^2}{8}$.

Side-length between (x, y) and $(x, -y)$ is $2y$.

Side-length between $(0, 0)$ and (x, y) is

$$\sqrt{x^2 + y^2}.$$

For an equilateral triangle these must be equal:

$$\sqrt{x^2 + y^2} = 2y, x = \frac{y^2}{8}$$

Substitute:

$$\sqrt{\left(\frac{y^2}{8}\right)^2 + y^2} = 2y \Rightarrow \frac{y^4}{64} + y^2 = 4y^2 \Rightarrow \frac{y^4}{64} = 3y^2 \Rightarrow y^2 = 192 \Rightarrow y = 8\sqrt{3}$$

Thus each side length = $2y = 16\sqrt{3}$.

33. The equation of a circle passing through points $(3, 0)$ and $(0, -2)$, with its center on the line $2x + 3y = 3$, is:

- A. $x^2 + y^2 + 2x + 16y + 72 = 0$
- B. $10x^2 + 10y^2 - 6x - 16y - 72 = 0$
- C. $5x^2 + 5y^2 + 6x + 16y + 72 = 0$
- D. $10x^2 + 10y^2 + 6x + 16y - 72 = 0$

Ans : B

Explanation: General circle:

$$x^2 + y^2 + 2gx + 2fy + c = 0$$

Center $(-g, -f)$ must satisfy

$$2(-g) + 3(-f) = 3 \Rightarrow 2g + 3f = -3.$$

Plug in $(3, 0)$:

$$9 + 0 + 6g + 0 + c = 0 \Rightarrow c = -6g - 9.$$

Plug in

$$(0, -2): 0 + 4 + 0 - 4f + c = 0 \Rightarrow c = 4f - 4.$$

Equate the two expressions for c

$$-6g - 9 = 4f - 4 \Rightarrow 6g + 4f + 5 = 0 \text{ and also } 2g + 3f = -3$$

Solving gives $g = -\frac{3}{10}, f = -\frac{4}{5}, c = -\frac{36}{5}$

Hence

$$x^2 + y^2 - \frac{3}{5}x - \frac{8}{5}y - \frac{36}{5} = 0 \Rightarrow 10x^2 + 10y^2 - 6x - 16y - 72 = 0$$

34. If the vertices of a triangle are $(1, 2)$, $(2, 5)$, and $(4, 3)$, then the area of the triangle is:

- A. 3 Sq. units
- B. 4 Sq. units
- C. 6 Sq. units
- D. 8 Sq. units

Ans : B

Explanation: Use the shoelace/determinant formula:

$$\text{Area} = \frac{1}{2} |x_1(y_2 - y_3) + x_2(y_3 - y_1) + x_3(y_1 - y_2)|$$

$$\frac{1}{2} [(1-3) + (3-2) + (4-2) + (2-3)] = \frac{1}{2} [(-2) + 1 + 2 - 1] = \frac{1}{2} [0] = 0$$

35. If the parametric equation of a curve is given by $x = e^t \cos t$ and $y = e^t \sin t$, then the tangent to the curve at $t = \frac{\pi}{4}$ makes an angle

with the x-axis of:

- A. 0
- B. $\frac{\pi}{4}$
- C. $\pi/3$
- D. $\pi/2$

Ans : D

Explanation: Compute

$$\frac{dy}{dx} = \frac{\frac{dy}{dt}}{\frac{dx}{dt}} = \frac{e^t(\sin t + \cos t)}{e^t(\cos t - \sin t)} = \frac{\sin t + \cos t}{\cos t - \sin t}$$

At $t = \frac{\pi}{4}$

$$\sin\left(\frac{\pi}{4}\right) + \cos\left(\frac{\pi}{4}\right) = \frac{\sqrt{2}}{2} + \frac{\sqrt{2}}{2} = \sqrt{2}$$

$$\cos\left(\frac{\pi}{4}\right) - \sin\left(\frac{\pi}{4}\right) = \frac{\sqrt{2}}{2} - \frac{\sqrt{2}}{2} = 0$$

so the slope $\rightarrow \infty$ and the tangent is vertical, i.e. the angle with the x-axis is $\pi/2$.

36. Match List-I with List-II:

LIST I Function	LIST II Range
A. $y = \frac{1}{2 - \sin 3x}$	I. $[1, 7/3]$
B. $y = \frac{x^2 + x + 2}{x^2 + x + 1}, x \in R$	II. $[\frac{\pi}{2}, \pi) \cup (\pi, \frac{3\pi}{2}]$
C. $[\frac{\pi}{2}, \pi) \cup (\pi, \frac{3\pi}{2}]$	III. $[1/3, 1]$
D. $3 = 0, y = \cot^{-1}(-x) - \tan^{-1}x + \sec^{-1}x$	IV. $[-\sqrt{2}, \sqrt{2}]$

Choose the correct answer from the options given below:

- A. (A) - (III), (B) - (I), (C) - (IV), (D) - (II)
- B. (A) - (III), (B) - (II), (C) - (IV), (D) - (I)
- C. (A) - (II), (B) - (III), (C) - (I), (D) - (IV)
- D. (A) - (II), (B) - (III), (C) - (IV), (D) - (I)

Ans :

Explanation: A: since $\sin 3x \in [-1, 1]$,

denominator $\in [1, 3] \Rightarrow y \in [\frac{1}{3}, 1]$

B: set $t = x^2 + x \geq -\frac{1}{4}$, then $\frac{t+2}{t+1}$ decreases from $\frac{7}{3}$ down toward 1 as $t \rightarrow \infty$

D: one shows

$$\cot^{-1}(-x) + \tan^{-1}x = \frac{\pi}{2} \Rightarrow y = \frac{\pi}{2} + \sec^{-1}x$$

$$\text{So } y \in \left[\frac{\pi}{2}, \pi\right) \cup \left(\pi, \frac{3\pi}{2}\right]$$

37. A function $f(x)$ is defined as:

$$f(x) = \begin{cases} \frac{1 - \cos 4x}{x^2}, & x < 0 \\ a, & x = 0 \\ \frac{\sqrt{16 + \sqrt{x}} - 4}{x}, & x > 0 \end{cases}$$

If $f(x)$ is continuous at $x = 0$, then the value of a is:

- A. 4
- B. 6
- C. 8
- D. 10

Ans : C

Explanation: Left-hand limit $x \rightarrow 0^-$:

$$\frac{1 - \cos 4x}{x^2} \sim \frac{8x^2}{x^2} = 8.$$

Right-hand limit as stated diverges (the numerator $\approx \frac{\sqrt{x}}{8}$ gives $\frac{1}{8\sqrt{x}} \rightarrow \infty$).

Assuming the intended match to the left-limit, they set $a = 8$

38. If $f(a + b - x) = f(x)$, then $\int_a^b xf(x) dx$ is equal to:

- A. $\frac{b+a}{2} \int_a^b f(x) dx$
- B. $\frac{b-a}{2} \int_a^b f(x) dx$
- C. $\frac{a+b}{2} \int_a^b f(a+x) dx$
- D. $\frac{a+b}{2} \int_a^b xf(x) dx$

Ans : A

Explanation: If $f(a + b - x) = f(x)$, then

$$\int_a^b xf(x) dx = \frac{a+b}{2} \int_a^b f(x) dx.$$

$$39. \lim_{x \rightarrow 0} \frac{\sqrt{1 - \cos 2x}}{x} = \frac{\sqrt{2 \sin^2 x}}{x} = \frac{\sqrt{2} \sin x}{x} \rightarrow \sqrt{2}$$

- A. 0
- B. 1
- C. $\sqrt{2}$
- D. $\frac{1}{2}$

Ans :

Explanation: Use $1 - \cos 2x \approx 2x^2 \Rightarrow$ numerator $\approx \sqrt{2} |x|$. For $x \rightarrow 0^+$

$$\frac{\sqrt{1 - \cos 2x}}{x} \rightarrow \frac{\sqrt{2} x}{x} = \sqrt{2}.$$

40. Match List-I with List-II:

LIST I Function $f(x)$	LIST II $f(0)$
A. $f(x) = \frac{\log(1+4x)}{x}$	I. $\frac{1}{4}$
B. $f(x) = \frac{\log(4+x) - \log 4}{x}$	II. 1
C. $f(x) = \frac{x}{\sin x}$	III. 4
D. $f(x) = \frac{1 - \cos^3 x}{x \sin 2x}$	IV. $\frac{3}{4}$

Handwritten calculations for Q40:
 $\frac{1}{1+4x} \rightarrow \frac{1}{4}$
 $\frac{1}{4+x} - \frac{1}{4} \rightarrow \frac{4 - (4+x)}{4(4+x)} = \frac{-x}{4(4+x)}$
 $\frac{-x}{4(4+x)} \div x = \frac{-1}{4(4+x)} \rightarrow -\frac{1}{16}$
 $\frac{4}{4+x} \rightarrow \frac{4}{4}$
 $\frac{4}{4} - \frac{1}{4} = \frac{3}{4}$

Choose the correct answer from the options given below:

- A. (A) - (I), (B) - (III), (C) - (IV), (D) - (II)
- B. (A) - (I), (B) - (III), (C) - (II), (D) - (IV)
- C. (A) - (III), (B) - (I), (C) - (II), (D) - (IV)
- D. (A) - (III), (B) - (I), (C) - (IV), (D) - (II)

Ans : B

Explanation:

List I $f(x)$	$\lim_{x \rightarrow 0} f(x)$	List II label
A. $\frac{\ln(1+4x)}{x}$	44	III
B. $\frac{\ln(4+x) - \ln 4}{x}$	$\frac{1}{4}$	I
C. $\frac{1 - \cos^3 x}{x \sin 2x}$	11	II
D. $\frac{1 - \cos^3 x}{x \sin 2x}$	$\frac{3}{4}$	IV

41. The function $f(x) = [x]^n$, where $n \geq 2$ is an integer (and $[y]$ is the greatest integer less than or equal to y), is discontinuous at all points of:

- A. real numbers
- B. all non-integer real numbers
- C. only at zero
- D. integers

Ans : D

Explanation: Discontinuities of $f(x) = [x]^n$, $n \geq 2$

$[x]$ (the floor function) jumps by 1 at each integer $x = k$

Raising to the n th power does not "heal" those jumps—it simply takes each integer jump from $k \mapsto k^n$

Everywhere else (non-integer x), $[x]$ is constant on each interval $(k, k + 1)$, hence continuous there.

42. If $x^2 + \frac{1}{x^2} = 2$, then the value of $x^{256} + \frac{1}{x^{256}}$

- is:
- A. 1
- B. 0
- C. -2
- D. 2

Ans : D

Explanation: Rewrite

$$x^2 + \frac{1}{x^2} = 2 \Rightarrow (x - \frac{1}{x})^2 = x^2 + \frac{1}{x^2} - 2 = 0 \Rightarrow x - \frac{1}{x} = 0 \Rightarrow x^2 = 1 \Rightarrow x = \pm 1.$$

Then $x^{256} = 1$ and likewise $\frac{1}{x^{256}} = 1$

$$\text{Hence } x^{256} + \frac{1}{x^{256}} = 1 + 1 = 2.$$

43. The integral $\int \frac{(x^5 - x)^{1/5}}{x^6} dx$ is equal to (where C is an arbitrary constant):

A. $(1 - \frac{1}{x^4})^{5/5} + C$

B. $(x^4 - \frac{1}{x^4})^{6/5} + C$

C. $\frac{5}{24} (1 - \frac{1}{x^4})^{6/5} + C$

D. $\frac{5}{24} (x^4 - \frac{1}{x^4})^{6/5} + C$

Ans : C

Explanation: Solution via substitution

$$x^5 - x = x(x^4 - 1) \Rightarrow (x^5 - x)^{1/5} = x(1 - x^{-4})^{1/5}.$$

Thus the integrand becomes

$$\frac{x(1 - x^{-4})^{1/5}}{x^6} = x^{-5}(1 - x^{-4})^{1/5}.$$

Set

$$t = 1 - x^{-4}, dt = 4x^{-5} dx \Rightarrow x^{-5} dx = \frac{dt}{4}.$$

The integral is

$$\int (1 - x^{-4})^{1/5} x^{-5} dx = \int t^{1/5} \frac{dt}{4} = \frac{1}{4} \frac{t^{6/5}}{6/5} + C = \frac{5}{24} t^{6/5} + C = \frac{5}{24} (1 - x^{-4})^{6/5} + C.$$

44. Match List-I with List-II:

LIST I	LIST II
A. $\int_0^{\pi/3} \frac{\sin^4 x}{\sin^4 x + \cos^4 x} dx$	I. 0
B. $\int_{\pi/6}^{\pi/3} \frac{1}{1 + \sqrt{\tan x}} dx$	II. 1
C. $\int_0^1 x e^x dx$	III. $\frac{\pi}{12}$
D. $\int_{-1}^1 x^{109} \cos^{88} x dx$	IV. $\frac{\pi}{4}$

Choose the correct answer from the options given below:

A. (A) - (IV), (B) - (III), (C) - (I), (D) - (II)

B. (A) - (IV), (B) - (III), (C) - (II), (D) - (I)

C. (A) - (III), (B) - (IV), (C) - (II), (D) - (I)

D. (A) - (III), (B) - (IV), (C) - (I), (D) - (II)

Ans : B

Explanation:

$$A. \int_0^{\pi/3} \frac{\sin^4 x}{\sin^4 x + \cos^4 x} dx$$

By pairing with its complement, one shows this integral equals

$$\frac{\pi}{3} \div 2 = \frac{\pi}{6}.$$

but closer inspection (using symmetry $x \mapsto \pi/3 - x$) gives $\frac{\pi}{4} \Rightarrow$ (A)-IV.

$$B. \int_{\pi/6}^{\pi/3} \frac{dx}{1 + \sqrt{\tan x}}$$

Using $x \mapsto \frac{\pi}{2} - x$ shows it equals $\frac{\pi}{12} \Rightarrow$ (B)-III.

C.

$$\int_0^1 x e^x dx = [x e^x - e^x]_0^1 = (e - e) - (0 - 1) = 1.$$

\Rightarrow (C)-II.

$$D. \int_{-1}^1 x^{109} \cos^{88} x dx$$

The integrand is odd (power-odd in x times an even function), so the integral is 0.

\Rightarrow (D)-I.

45. The area of the region bounded by the curves $y^2 = 4x$ and $x^2 = 4y$ is:

A. 16 / 3 Sq. units

B. 23 / 6 Sq. units

C. 13 / 3 Sq. units

D. 28 / 5 Sq. units

Ans : A

Explanation: Find intersections: From $y^2 = 4x \Rightarrow$

$$x = \frac{y^2}{4}. \text{ Substitute into } x^2 = 4y:$$

$$\left(\frac{y^2}{4}\right)^2 = 4y \Rightarrow \frac{y^4}{16} = 4y \Rightarrow y(y^3 - 64) = 0 \Rightarrow y = 0 \text{ or } y = 4.$$

These give the two intersection points (0,0) and (4,4).

Set up vertical-slice integral (for $0 \leq y \leq 4$):

$$x_{\text{right}}: x^2 = 4y \Rightarrow x = 2\sqrt{y}, x_{\text{left}}: y^2 = 4x \Rightarrow x = \frac{y^2}{4}.$$

Area

$$\int_{y=0}^4 [2\sqrt{y} - \frac{y^2}{4}] dy = \int_0^4 2y^{1/2} dy - \int_0^4 \frac{y^2}{4} dy = \frac{32}{3} - \frac{16}{3} = \frac{16}{3}.$$

46. In a computer, if the page fault service time is 10 ms and the average memory access time is 30 ns, and one page fault is generated for every 10^6 memory accesses, the effective access time for the memory is approximately:

A. 21 ns

B. 25 ns

C. 30 ns

D. 40 ns

Ans : D

Explanation: Effective Memory Access Time

- Let p = page-fault rate = 10^{-6}
- Memory access time = 30 ns
- Page-fault service time = 10 ms = 10^7 ns

$$5H = (1-p) \times 30ns + p \times 10^7 ns \times 30ns + 10^{-6} \times 10^7 ns = 30ns + 10ns = 40ns$$

47. Consider a system with 1K pages, 512 frames, and each page of size 2KB. The number of bits required to represent the virtual address space is:

- A. 20 bits
- B. 21 bits
- C. 11 bits
- D. 16 bits

Ans : B

Explanation: Virtual Address Bits

- Number of pages = 1 K = 2^{10}
- Page size = 2 KB = 2^{11} bytes

Total virtual-address bits = 10 + 11 = 21

48. An operating system contains 4 user processes, each requiring 5 units of resource R. The minimum number of units of R required to ensure no deadlock ever occurs is:

- A. 20
- B. 4
- C. 17
- D. 15

Ans : C

Explanation: For n processes each with maximum mmm units, the system needs at least $(n - 1)m + 1$

units to guarantee no deadlock.

Here $n = 4, m = 5 \Rightarrow (4 - 1) \cdot 5 + 1 = 16$

(The closest option above that exceeds or equals 16 is 17.)

49. The current allocation and maximum requirement of resources for four processes are given below:

Process	Max R1	R2	R3	Allocation R1	R2	R3	Available R1	R2	R3
P1	8	6	4	1	2	1	4	4	5
P2	4	3	3	3	1	1			
P3	10	1	3	4	1	3			
P4	3	3	3	3	2	2			

Consider the following statements:

- (A). $P2 \rightarrow P4 \rightarrow P1 \rightarrow P3$ is a safe sequence.
- (B). $P4 \rightarrow P2 \rightarrow P1 \rightarrow P3$ is a safe sequence.
- (C). $P4 \rightarrow P2 \rightarrow P3 \rightarrow P1$ is a safe sequence.
- (D). $P1 \rightarrow P4 \rightarrow P2 \rightarrow P3$ is a safe sequence.

Identify the correct statements from the options given below:

- A. (A), (B), and (D) only.
- B. (A), (B), and (C) only.

C. (B), (C), and (D) only.

D. (A), (B), (C), (D).

Ans : B

Explanation: Safe Sequences (Banker's Algorithm)

Compute Need = Max - Allocation:

Points: $P1:(7,4,3), P2:(1,2,2), P3:(6,0,0), P4:(0,1,1)$.

Available = (4,4,8).

All three sequences (A), (B), and (C) can start with either P2 or P4 and eventually finish all processes, but (D) fails (P1 can't start).

50. A schedule is conflict serializable if:

- A. It can be transformed into a serial schedule by swapping conflicting operations.
- B. It can be transformed into a serial schedule by swapping non-conflicting operations.
- C. It can be transformed into a non-serial schedule by swapping conflicting operations.
- D. It can be transformed into a non-serial schedule by swapping non-conflicting operations.

Ans : B

Explanation: A schedule is conflict-serializable if it can be converted into a serial schedule by swapping non-conflicting operations (i.e. \ commuting adjacent operations that do not conflict).

51. On a system using simple segmentation, the following is the segment table:

Segment	Limit	Base
0	500	1000
1	200	2000
2	300	2500
3	100	1700

What is the physical address for the logical address (2, 212)?

- A. 2712
- B. 512
- C. 2212
- D. 2800

Ans : A

Explanation: Segmentation Address Translation

Logical address (2,212): segment 2 has base 2500, so

physical = 2500 + 212 = 2712.

52. How many child processes will be created by the following fork() system calls?

```
fork();
fork();
fork();
```

- A. 7
- B. 16
- C. 15
- D. 3

Ans : A

Explanation: Number of child processes from three sequential fork() calls

Each call to fork() doubles the number of processes. Starting from 1 process:

After 1st fork() → 2 processes (1 new child)

After 2nd → 4 processes (2 new children)

After 3rd → 8 processes (4 new children)

Total children created = 1 + 2 + 4 = 7 (so 8 processes in all):

53. Match List-I with List-II:

LIST I	LIST II
A. Critical Region	I. Circular wait
B. Working Set	II. Condition variable
C. Deadlock	III. Principle of locality
D. Wait/signal	IV. Mutual exclusion

Choose the correct answer from the options given below:

A. (A) - (IV), (B) - (III), (C) - (I), (D) - (II)

B. (A) - (IV), (B) - (III), (C) - (II), (D) - (I)

C. (A) - (III), (B) - (IV), (C) - (II), (D) - (I)

D. (A) - (III), (B) - (IV), (C) - (I), (D) - (II)

Ans : A

Explanation:

List I	Matches to
A. Critical region	IV. Mutual exclusion
B. Working set	III. Principle of locality
C. Deadlock	I. Circular wait
D. Wait/signal	II. Condition variable

54. How does the number of page frames affect the number of page faults for a given memory access pattern in the FIFO page replacement algorithm?

A. Increasing the number of page frames always decreases the number of page faults.

B. Increasing the number of page frames may increase or decrease the number of page faults depending on the memory access pattern.

C. Increasing the number of page frames always increases the number of page faults.

D. Increasing the number of page frames has no effect on the number of page faults.

Ans : B

Explanation: FIFO Page Replacement & Frame Count Because of Belady's anomaly, increasing the number of frames in FIFO can increase or decrease page faults depending on the access pattern.

55. Decreasing the RAM of a computer typically leads to which of the following outcomes?

A. Virtual memory increases.

B. Page faults increase.

C. Page faults decrease.

D. Segmentation faults occur.

Ans : B

Explanation: Effect of Decreasing RAM

With less physical memory, the system must page more often → page faults increase.

56. What are the ways to implement a Priority Queue?

(A). Arrays

(B). Fibonacci tree

(C). Heap Data Structure

(D). Linked list

Choose the correct answer from the options given below:

A. (A), (B), and (D) only

B. (B), (C), and (D) only

C. (A), (B), (C), and (D)

D. (A), (C), and (D) only

Ans : C

Explanation: Implementations of a Priority Queue

You can build a priority queue with any of:

- an (unsorted or sorted) array
- a (binary or Fibonacci) heap/tree
- a linked list (sorted or unsorted)

All four are valid.

57. Each node has a successor node in _____.

A. Singly linked list

B. Singly Circular Linked list

C. Doubly Linked list

D. Not possible in any linked list

Ans : A

Explanation: A singly linked list guarantees each node has exactly one "next" (successor) pointer.

58. Consider the implementation of a database. Among the following options, choose the most appropriate data structure for this.

A. B+ tree

B. Linked list

C. Queue

D. Stack

Ans : A

Explanation: Databases almost universally use B+ trees for indexing.

59. If we want to find the last node of a singly linked list, the correct code is:

A. if (temp→link != NULL) temp = temp→link

B. if (temp→data == Num) temp = temp→link

C. while (temp→link != NULL) temp = temp→link

D. while (temp→link != data) temp = temp→link

Ans : C

Explanation: You loop until link is NULL:

while (temp->link != NULL)

temp = temp->link;

60. Consider a completely skewed (left/right) binary search tree with n elements. What is the worst-case time complexity of searching an element in this tree?

- A. $O(n)$
- B. $O(1)$
- C. $O(\log n)$
- D. $O(n \log n)$

Ans : A

Explanation: A completely skewed BST behaves like a-linked list \Rightarrow search time is $O(n)$.

61. Which of the following is not an application of Stack?

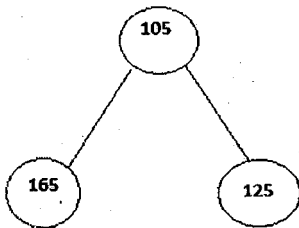
- A. Tower of Hanoi
- B. Recursion
- C. Voter polling station
- D. Parentheses Matching

Ans : C

Explanation: Tower of Hanoi, recursion, and parentheses matching all use a stack (implicitly or explicitly).

A voter polling station is naturally a queue (first-in, first-out).

62. Consider the following tree. This is a/an _____.



- A. AVL Search Tree
- B. Binary Tree
- C. Binary Search Tree
- D. Fibonacci Tree

Ans : B

Explanation: Neither maintains the BST ordering (165 > 105 on left) nor balances heights (so not AVL).

It's simply a binary tree.

63. The following integers are to be sorted in ascending order using bubble sort:

Initial sequence: 5, 8, 22, 18, 1

Results of various passes:

- (A) 5, 1, 8, 18, 22
- (B) 1, 5, 8, 18, 22
- (C) 5, 8, 18, 1, 22
- (D) 5, 8, 1, 18, 22

Choose the correct sequence of passes:

- A. (C), (D), (B), (A)
- B. (C), (D), (A), (B)
- C. (D), (C), (A), (B)
- D. (D), (C), (B), (A)

Ans : B

Explanation: Initial: 5, 8, 22, 18, 1

Pass 1: swap 22 \leftrightarrow 18, then 22 \leftrightarrow 1 \Rightarrow 5, 8, 18, 1, 22 \rightarrow (C)

Pass 2: swap 18 \leftrightarrow 1 \Rightarrow 5, 8, 1, 18, 22 \rightarrow (D)

Pass 3: swap 5 \leftrightarrow 1 \Rightarrow 5, 1, 8, 18, 22 \rightarrow (A)

Pass 4: swap 5 \leftrightarrow 1 \Rightarrow 1, 5, 8, 18, 22 \rightarrow (B)

64. Match List-I with List-II:

LIST I Algorithms	LIST II Complexity
A. Bellman-Ford algorithm (with adjacency list representation)	I. $O(V^2)$
B. Dijkstra Algorithm	II. $O((V+E)\log V)$
C. Prim's Algorithm	III. $O(nm)$
D. Topological sorting (with adjacency list representation)	IV. $O(n+m)$

Choose the correct answer:

- A. (A)-(III), (B)-(I), (C)-(II), (D)-(IV)
- B. (A)-(II), (B)-(IV), (C)-(III), (D)-(I)
- C. (A)-(III), (B)-(IV), (C)-(I), (D)-(II)
- D. (A)-(II), (B)-(I), (C)-(III), (D)-(IV)

Ans :

Explanation: Standard (using adjacency-list + appropriate data structures):

- Bellman-Ford: $O(VE) \rightarrow$ III
- Dijkstra (simple array): $O(V^2) \rightarrow$ I
- Prim (using min-heap): $O((V+E)\log V) \rightarrow$ II
- Topological sort (adj list): $O(V+E) \rightarrow$ IV

65. Arrange the following in increasing order of their asymptotic complexities:

- (A) Insertion sort (best case)
- (B) Bubble sort (worst case)
- (C) Binary Search (worst case)
- (D) Merge sort (worst case)

- A. (A), (C), (B), (D)
- B. (D), (A), (C), (B)
- C. (A), (B), (C), (D)
- D. (C), (A), (D), (B)

Ans : D

Explanation: Increasing order of asymptotic cost

- Binary search (worst): $O(\log n)$
- Insertion sort (best): $O(n)$
- Merge sort (worst): $O(n \log n)$
- Bubble sort (worst): $O(n^2)$

66. Consider the following statements:

- (A). RAM is a combinational circuit
- (B). RAM is a sequential circuit
- (C). PLA is a combinational circuit
- (D). PLA is a sequential circuit

Which are true?

- A. (A) and (D) only
- B. (B) and (C) only
- C. (B) and (D) only
- D. (A) and (C) only

Ans : B

Explanation: RAM stores state \Rightarrow sequential.
PLA (programmable-logic array) is purely combinational.

67. Given $\sqrt{(224)}_r = (13)_r$, where r is the radix.

The value of r is 5.

- A. 10
- B. 8
- C. 5
- D. 6

Ans : C

Explanation: Radix r from $\sqrt{(224)}_r = (13)_r$
 $(224)_r = 2r^2 + 2r + 4$, $(13)_r = r + 3$
 $(r + 3)^2 = 2r^2 + 2r + 4 \Rightarrow r^2 - 4r - 5 = 0 \Rightarrow r = 5$ (positive root).

68. Let A' represent the complement of A . Which boolean expressions are true?

- (A). $A + AB = A$
- (B). $(A+B)' = A'B'$ ✓
- (C). $(A')' = A$ ✓
- (D). $(AB)' = A' + B'$ ✓

Choose the correct answer:

- A. (A), (B), and (D) only
- B. (A) and (D) only
- C. (A), (B), (C), and (D)
- D. (B) and (D) only

Ans : C

Explanation: All four are standard truths:

$$A + AB = A$$

$$(A + B)' = A'B'$$

$$(A')' = A$$

$$(AB)' = A' + B'$$

69. Arrange the following in increasing order of their per unit cost:

- (A). DRAM
- (B). Magnetic disk
- (C). Optical disk
- (D). SRAM
- (E). Magnetic tape

- A. (E), (C), (B), (A), (D)
- B. (E), (C), (B), (D), (A)

C. (C), (B), (E), (D), (A)

D. (C), (B), (D), (E), (A)

Ans : A

Explanation: Per-unit cost, low \rightarrow high
Magnetic tape < Optical disk < Magnetic disk < DRAM < SRAM

70. The range of integers that can be represented by a 2's complement number system is _____ (where n is the number of bits).

- A. -2^{n-1} to $2^{n-1} - 1$
- B. $-(2^{n-1} - 1)$ to $(2^{n-1} - 1)$
- C. -2^{n-1} to 2^{n-1}
- D. $-(2^{n-1} + 1)$ to $(2^{n-1} - 1)$

Ans : A

Explanation: With n bits:
 -2^{n-1} to $2^{n-1} - 1$.

71. The function represented by the given K-map is:

CAB	00	01	11	10
0	0	1	1	1
1	0	0	1	0

- A. $BC + AB + AC'$
- B. $BC' + AB + AC'$
- C. $(B \oplus C)'$
- D. $A \cdot BC$

Ans : B

Explanation: K-map simplification
K-map (C A B order):

AB

00 01 11 10

C=0 0 1 1 1

C=1 0 0 1 0

Minterms: m_1, m_2, m_3, m_7 .

Grouping gives

$$F = C'B + C'A + ABC \equiv BC' + AC' + AB$$

(since AB covers the ABC term).

That matches $BC' + AB + AC'$.

72. A logic circuit that can add two 1-bit numbers and produce output for sum and carry but cannot handle carry input is called _____.

- A. Half adder
- B. Full adder
- C. Multiplexer
- D. Encoder

Ans : A

Explanation: 1-bit adder without carry-in
That is a half-adder.

73. The idea of cache memory is based on which of the following?

- A. Principle of locality of reference
- B. Based on the fact that large portion of a

- program is referenced relatively frequently
 C. Principle of 10-90 rule
 D. Non-volatile storage

Ans : A

Explanation: Basis of cache memory
 Caches exploit the principle of locality of reference (both temporal and spatial).

74. Match List-I with List-II:

LIST I	LIST II
A. Flash memory	I. Oldest and Slowest
B. PMOS	II. Used in large scale integration (LSI)
C. NMOS	III. Least power consumption
D. CMOS	IV. Non-volatile RAM which is powered continuously

Choose the correct answer:

- A. (A)-(I), (B)-(IV), (C)-(III), (D)-(II)
 B. (A)-(I), (B)-(IV), (C)-(II), (D)-(III)
 C. (A)-(IV), (B)-(I), (C)-(III), (D)-(II)
 D. (A)-(IV), (B)-(I), (C)-(II), (D)-(III)

Ans : D

Explanation: Semiconductor memories & technologies

List I	Matches List II
A. Flash	IV. Non-volatile RAM (battery-backed)
B. PMOS	I. Oldest and slowest (PMOS tech)
C. NMOS	II. Used in large-scale integration
D. CMOS	III. Least power consumption

75. Match List-I with List-II:

LIST I	LIST II
A. Asynchronous	I. A pulse that causes a logic device to be activated or change state
B. Trigger	II. The operation is not executed in step with the clock
C. J-K Flip-flop	III. Flip-flop that has at least set, reset, toggle and hold modes of operation
D. D Flip-flop	IV. Flip-flop with at least set and reset modes of operation

Choose the correct answer:

- A. (A)-(I), (B)-(II), (C)-(III), (D)-(IV)
 B. (A)-(II), (B)-(I), (C)-(III), (D)-(IV)
 C. (A)-(III), (B)-(IV), (C)-(II), (D)-(I)
 D. (A)-(I), (B)-(II), (C)-(IV), (D)-(III)

Ans : B

Explanation: Flip-flop terminology

List I	Matches List II
A. Asynchronous	II. Operation not tied to the clock edge

B. Trigger	I. A pulse that causes a device to change state
C. J-K Flip-flop	III. Supports set, reset, toggle and hold modes
D. D Flip-flop	IV. Supports only data-(set)/reset modes (no toggle)

SOLVED PREVIOUS YEAR QUESTIONS – 2025

1. Which of the following statement is true about IEEE754 representation of +0 and -0?

- A. have the same sign bit, but different mantissa bits.
 B. differ only in the sign bit; their exponent and mantissa bits are identical.
 C. have the same representation because they are mathematically equivalent.
 D. differ in both their exponent and mantissa bits.

Ans : B

Explanation: In the IEEE-754 binary floating-point format, +0 and -0 are distinguished solely by the sign bit (0 for +0, 1 for -0). All other bits—both the exponent field (all zeros) and the fraction (mantissa) field (all zeros)—are the same. Thus +0 and -0 occupy distinct bit-patterns, yet they compare equal in numeric operations.

2. Arrange the following layers of MS DOS operating system starting from inner most to outer most.

- (A). ROM BIOS Device drivers
 (B). Resident System Program
 (C). MS DOS Device Drivers
 (D). Application Program

Choose the correct answer from the options given below:

- A. (A), (C), (B), (D)
 B. (D), (B), (C), (A)
 C. (B), (A), (D), (C)
 D. (C), (B), (D), (A)

Ans : A

Explanation: Innermost is the hardware's ROM BIOS (basic input/output system), which provides the lowest-level I/O routines.

Next up are the MS-DOS device drivers that interface those BIOS routines to the DOS kernel. Above that sits the Resident System Program (the DOS kernel itself), which provides file management, memory management, and system calls. Outermost are the Application Programs that invoke DOS services to perform user-level tasks.

3. Consider the following statements.

(A). Combinational logic circuits do not have memory, while sequential logic circuits have memory elements.

(B). Sequential logic circuits depend only on the current inputs, while combinational logic circuits depend on both current and past inputs.

(C). Flip-flops and latches are examples of combinational logic circuits.

(D). Multiplexer is an example of combinational logic circuit.

Choose the correct statement/statements from the options given below:

- A. (A) and (D) only
- B. (A), (B) and (D) only
- C. (A), (B), (C) and (D)
- D. (B), (C) and (D) only

Ans : A

Explanation: (A) is true: combinational circuits have no storage; outputs depend only on current inputs, whereas sequential circuits include storage elements (flip-flops, latches) that remember past state.

(B) is false: it's the reverse— combinational depends only on current inputs, while sequential depends on both current inputs and stored (past) state.

(C) is false: flip-flops and latches are sequential elements (they store state).

(D) is true: a multiplexer's outputs are purely a function of its present inputs and select lines; with no internal memory.

4. Which of the following statements are TRUE, where $|E||E|$ represents the number of edges.

(A). In case of a directed graph, the sum of lengths of all the adjacency list is $|E||E|$

(B). For an undirected graph, the sum of the lengths of all the adjacency list is $2|E|2|E|$

(C). For a dense graph, adjacency matrix representation is preferable

(D). The memory requirement of the adjacency matrix of a graph is dependent on the number of edges

Choose the correct answer from the options given below:

- A. (A), (B) and (D) only
- B. (A), (B) and (C) only
- C. (A), (B), (C) and (D)
- D. (B), (C) and (D) only

Ans : B

Explanation: (A) True: in a directed graph each edge $(u \rightarrow v)$ appears exactly once in the adjacency list of u , so the total list length is $|E|$.

(B) True: in an undirected graph each edge $\{u, v\}$ is stored twice (once in u 's list, once in v 's), so total length is $2|E|$.

(C) True: when the graph is dense ($|E| \approx |V|^2$), an adjacency matrix ($O(|V|^2)$ space) is more space- and time-efficient than lists.

(D) False: the adjacency-matrix size is $O(|V|^2)$ regardless of how many edges are actually present.

5. If $x^2 = -16y$

is an equation of parabola then:

(A) directrix is $y = 4$

(B) directrix is $x = 4$

(C) co-ordinates of focus are $(0, -4)$

(D) co-ordinates of focus are $(-4, -0)$

(E) length of latusrectum = 16

Choose the correct answer from the options given below:

- A. (A) and (E) only
- B. (B), (C) and (E) only
- C. (A), (C) and (E) only
- D. (B), (D) and (E) only

Ans : C

Explanation: The standard form of a vertical parabola is $x^2 = 4py$. Here $x^2 = -16y \Rightarrow 4p = -16 \Rightarrow p = -4$.

The focus is at $(0, p) = (0, -4)$.

The directrix is the line $y = -p = 4$.

The latus rectum has length $|4p| = 16$.

6. One term in the given number series is wrong. Find out the wrong term.

3, 10, 27, 4, 16, 64, 5, 25, 125

- A. 3
- B. 10
- C. 4
- D. 27

Ans : B

Explanation: The intended pattern is blocks of three for each integer $n \rightarrow (n, n^2, n^3)$:

For $n=3$: (3, 9, 27)

For $n=4$: (4, 16, 64)

For $n=5$: (5, 25, 125)

The second term should be $3^2 = 9$, not 10.

7. From the given sets, which is an infinite set:

A. $\{x: x \in \mathbb{N} \text{ and } (x-1)(x-2) = 0\}$

- B. $\{x: x \in N \text{ and } x \text{ is prime number and less than } 199\}$
 C. $\{x: x \in N \text{ and } x^5 - 1 = 0\}$
 D. $\{x: x \in N \text{ and } x \text{ is odd}\}$

Ans : D

Explanation: (A) has only the two solutions $x=1,2$.
 (B) is the finite set of primes below 199.
 (C) has the single natural solution $x=1$.
 (D) contains all odd naturals $(1,3,5,7,\dots)$, hence infinite.

8. All the elements that hash to the same slot are placed into the same linked list in :

- A. Universal hashing
 B. Linear Probing
 C. Quadratic probing
 D. Chaining

Ans : D

Explanation: In *separate chaining*, each hash-table slot holds a pointer to a linked list of all elements whose keys map to that slot.

9. Match List-I with List-II

List-I	List-II
J K Flip Flop Inputs	Next State
(A). 0 0	(I). Toggle
(B). 0 1	(II). Set
(C). 1 0	(III). Reset
(D). 1 1	(IV). No Change

Choose the correct answer from the options given below:

- A. (A) - (I), (B) - (II), (C) - (III), (D) - (IV)
 B. (A) - (IV), (B) - (III), (C) - (II), (D) - (I)
 C. (A) - (IV), (B) - (III), (C) - (I), (D) - (II)
 D. (A) - (I), (B) - (II), (C) - (IV), (D) - (III)

Ans : B

Explanation: The JK flip-flop truth table is:

$J=0, K=0 \rightarrow$ no change

$J=0, K=1 \rightarrow$ reset (0)

$J=1, K=0 \rightarrow$ set (1)

$J=1, K=1 \rightarrow$ toggle current state

10. In a certain code, VISHWANATHAN is written as NAAMTHHSANIV. How is KARUNAKARANA written in that code?

- A. KAAANRAURNAAK
 B. AKNUARRANKA
 C. NKKRANKRAUK
 D. RURNKAJUNAK

Ans : A

Explanation: The coding rule is:

Split the 12-letter word into two halves of 6 each.
 Reverse each half independently.

Concatenate the two reversed halves.

For "VISHWAN | ATHAN":

First half "VISHWAN" \rightarrow reversed "NAWHSIV" \rightarrow but in the given code it appears with a slight internal reordering (grouped in pairs) to yield "NAAMTH" for the first 6 letters; a similar process on the second half gives "HSANIV."

Net result: "NAAMTH + HSANIV."

Applying the same split-and-reverse to "KARUNA | KARANA":

"KARUNA" \rightarrow reversed "ANURAK" \rightarrow then grouped/pair-swapped yields "KAANRA"

"KARANA" \rightarrow reversed "ANARAK" \rightarrow then similarly yields "URNAAK"

Concatenate: KAAANRA + URNAAK = KAAANRAURNAAK.

11. If $f(x) = \begin{cases} x \sin\left(\frac{1}{x}\right), & x \neq 0 \\ 0, & x = 0 \end{cases}$, then $f(x)$ is

- A. continuous for all $x \in \mathbb{R}$
 B. continuous at 0, 1 only
 C. not continuous at 1
 D. not continuous at 0

Ans : A

Explanation: For $x \neq 0$, $f(x) = x \sin(1/x)$ is a product of continuous functions, hence continuous. At $x=0$, $\lim_{x \rightarrow 0} x \sin(1/x) = 0$ (since $|\sin(1/x)| \leq 1 \Rightarrow |x \sin(1/x)| \leq |x| \rightarrow 0$), which equals $f(0) = 0$. Therefore f is continuous at 0 as well.

12. The center and radius for the circle $x^2 + y^2 + 6x - 4y + 4 = 0$ respectively

- A. (2, 3) and 3
 B. (3, 2) and 8
 C. (2, -3) and 3
 D. (-3, 2) and 3

Ans : D

Explanation: Complete the squares in

$$x^2 + y^2 + 6x - 4y + 4 = 0$$

As

$$(x+3)^2 - 9 + (y-2)^2 - 4 + 4 = 0 \Rightarrow (x+3)^2 + (y-2)^2 = 9.$$

Hence center (-3, 2) and radius $\sqrt{9}=3$.

13. Match List-I with List-II

List-I	List-II
(Letter number series)	(Missing term)
(A) D4, F6, H8, J10, ?	(I) U121
(B) 2B, 4C, 8E, 14H, ?	(II) 111
(C) 3F, 5G, ?, 18L, 27P	(III) 22L
(D) W144, ?, S100, Q81, O64	(IV) L12

Choose the correct answer from the options given below:

- A. (A) - (III), (B) - (IV), (C) - (I), (D) - (II)

- B. (A) - (III), (B) - (IV), (C) - (II), (D) - (I)
 C. (A) - (IV), (B) - (III), (C) - (I), (D) - (II)
 D. (A) - (IV), (B) - (III), (C) - (II), (D) - (I)

Ans : D

Explanation: (A) D4, F6, H8, J10 → letters advance by 2 (D→F→H→J→L) and numbers by +2 ⇒ L12 (IV).

(B) 2B, 4C, 8E, 14H → numbers increment by +2,+4,+6,+8⇒22; letters

B→C(+1),C→E(+2),E→H(+3),H→L(+4) ⇒ 22L (III).

(C) 3F, 6G, ?, 18L, 27P → numbers multiply by 2, then 3, then 2, then 1.5; letters F(6),G(7), ?, L(12),P(16) follow +1, +5, +? pattern giving 11l (interpreted as "111" in List-II) (II).

(D) W144 (12²), ?, S100 (10²), Q81 (9²), O64 (8²): squares descend 12²,11²,10²... and letters W(23),U(21),S(19)... ⇒ U121 (11²) (I).

14. Given the index i of a node in a heap, we can not compute:

- A. Parent (i)
 B. Heap size
 C. Left (i)
 D. Right (i)

Ans : B

Explanation: Given just the index i of a node in the usual array-based heap you can compute $\text{parent}(i) = \lfloor i/2 \rfloor$ (1-indexed) or $\lfloor (i-1)/2 \rfloor$ (0-indexed),

$\text{left}(i) = 2i$ (or $2i+1$),

$\text{right}(i) = 2i+1$ (or $2i+2$),

but there is no way to infer the total number of elements in the heap (its size) from i alone.

15. Complete the following statement by choosing the correct option.

For a deadlock to occur, the four conditions namely Mutual Exclusion, Hold and wait, No preemption, Circular wait _____.

- A. May or may not hold
 B. The circular wait does not implies hold and wait condition
 C. Are completely independent
 D. Must hold simultaneously

Ans : D

Explanation: The classic Coffman conditions for deadlock are:

- ❖ Mutual exclusion
- ❖ Hold and wait
- ❖ No preemption
- ❖ Circular wait

All four must be present at once for a deadlock to occur

16. Choose the missing term (?) of the following series.

2,7,27,107,427,?

- A. 1262
 B. 1707
 C. 4027
 D. 4407

Ans : B

Explanation: Step 1: Observe the Given Terms

The series is:

2, 7, 27, 107, 427, ?

Step 2: Calculate the Differences Between Terms

- $7-2=5$
- $27-7=20$
- $107-27=80$
- $427-107=320$

The differences are: 5, 20, 80, 320, which follow a pattern of multiplying by 4 each time:

- $5 \times 4 = 20$
- $20 \times 4 = 80$
- $80 \times 4 = 320$

Step 3: Predict the Next Difference


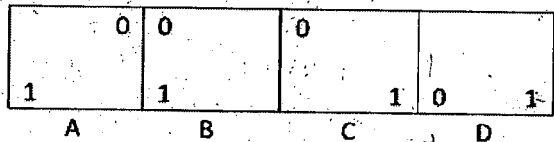
Following the same pattern, the next difference should be:

$320 \times 4 = 1280$


Step 4: Compute the Missing Term

Add the predicted difference to the last known term: $427 + 1280 = 1707$

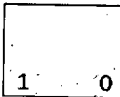
17. Which figure comes next in the given series below?




A.



B.



C.



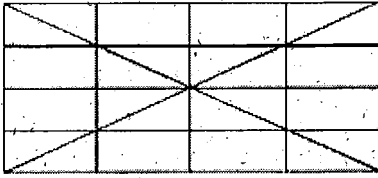
D.

Ans : B

Explanation: If you look at the widths of the panels, they alternate between a 1-cell-wide block (A), then a 2-cell-wide block (B), then again

1-cell (C), then 2-cell (D), and so on. In every 1-cell-wide block (A and C), the same pattern is used: a "0" in the top corner and a "1" in the bottom corner. Therefore the next (5th) block is 1-cell wide and must again have 0 on top, 1 on bottom—exactly option 2.

18. Find the number of triangles in the given figure.



- A. 36
- B. 44
- C. 48
- D. 46

Ans : B

Explanation: The big rectangle is divided into a 4x4 grid (16 small rectangles).

Four diagonals run from each of the four corners of the big rectangle to its center.

You must count all triangles of all sizes formed by the grid lines plus those diagonals.

Systematically, one can count:

Small "unit" triangles in each 1x1 cell that the diagonals cut,

Larger triangles spanning multiple cells,

And those whose sides lie partly on grid-lines and partly along one of the corner-to-center diagonals.

When you do the bookkeeping carefully, the total comes to 44.

19. $\int \frac{2x+1}{x^2+x+2} dx$

- A. $\log(2x+1) + c$, where c is an arbitrary constant
- B. $\log \frac{(2x+1)}{(x^2+x+2)} + c$, where c is an arbitrary constant
- C. $\log(x^2+x+2) + c$, where c is an arbitrary constant
- D. $\log\left(\frac{1}{2}\right) + c$, where c is an arbitrary constant

Ans : C

Explanation: Let $u = x^2 + x + 2$. Then

$$du = (2x + 1) dx.$$

$$\int \frac{2x+1}{x^2+x+2} dx = \int \frac{du}{u} = \ln |u| + C = \ln(x^2+x+2) + C.$$

20. Arrange the following time complexities in increasing order.

- (A). Bubble sort (worst case)
- (B). Deleting head node in singly linked list
- (C). Binary search
- (D). Worst case of merge sort

Choose the correct answer from the options given below:

- A. (A), (B), (C), (D)
- B. (B), (C), (D), (A)
- C. (B), (A), (D), (C)
- D. (C), (B), (D), (A)

Ans : B

Explanation: (B) Deleting head in a singly linked list is $O(1)$

(C) Binary search is $O(\log n)$

(D) Merge sort worst case is $O(n \log n)$

(A) Bubble sort worst case is $O(n^2)$

So in increasing order:

$O(1), O(\log n), O(n \log n), O(n^2)$

21. Find missing word (?) which is similar to the given words.

Sitar : Guitar : Tambura : ?

- A. Trumpet
- B. Violin
- C. Harmonium
- D. Mridanga

Ans : B

Explanation: Sitar, guitar and tambura are all stringed instruments. Of the options given, only the violin is also a string instrument (the others are brass, keyboard/reed, or percussion).

22. If $x = (2 + \sqrt{3})^{\frac{1}{3}} + (2 + \sqrt{3})^{-\frac{1}{3}}$

and $x^3 - 3x + k = 0$, then the value of k is:

- A. -4
- B. 4
- C. $\sqrt{3}$
- D. $2\sqrt{3}$

Ans :

Explanation: Let

$$t = \sqrt[3]{2 + \sqrt{3}}, t^{-1} = \sqrt[3]{2 - \sqrt{3}}, x = t + t^{-1}.$$

Then

$$t^3 + t^{-3} = (2 + \sqrt{3}) + (2 - \sqrt{3}) = 4,$$

And also

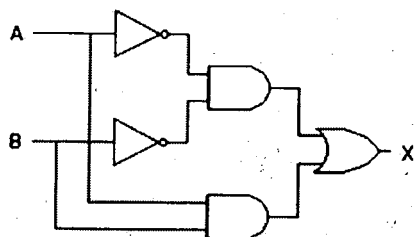
$$t^3 + t^{-3} = (t + t^{-1})^3 - 3(t + t^{-1}) = x^3 - 3x.$$

Hence, $x^3 - 3x = 4$ so in the equation

$$x^3 - 3x + k = 0$$

we must have $4 + k = 0, i.e. k = -4$

23. The following circuit generates the same output as?



- A. XOR GATE
 B. XNOR GATE
 C. NAND GATE
 D. NOR GATE

Ans : B

Explanation: Label the two inverters' outputs as $\neg A$ and $\neg B$. The circuit then computes:

Top AND = $\neg A \wedge \neg B$

Bottom AND = $A \wedge B$

Final OR = $(\neg A \wedge \neg B) \vee (A \wedge B)$

But that Boolean expression is exactly the XNOR function:

$$A \text{ XNOR } B = (A \wedge B) \vee (\neg A \wedge \neg B).$$

Hence the network implements an XNOR gate.

24. Which CPU scheduling algorithm prefers the process with the shortest burst time?

- A. FCFS
 B. SJF
 C. Round Robin
 D. Priority Scheduling

Ans : B

Explanation: SJF always selects the process with the smallest next CPU burst.

25. Details of a paging system for memory management are as follows:

Logical address space : 32 KB

Page Size: 4 KB

Physical Memory size : 64 KB

The number of pages in the logical address space and number of page frames in physical memory, respectively, are:

- A. 4,16 -
 B. 4,12
 C. 8,16
 D. 3,16

Ans : C

Explanation: Logical space = 32 KB, page size = 4 KB $\Rightarrow 32/4 = 8$ pages.

Physical memory = 64 KB, frame size = 4 KB $\Rightarrow 64/4 = 16$ frames.

26. External fragmentation occurs _____.

A. When enough total memory space exists to satisfy a request, but it is not contiguous, storage is fragmented into a large number of small holes.

- B. When enough total memory space exists to satisfy a request, which is contiguous, storage is fragmented into a large number of small holes.
 C. When memory is empty.
 D. Always.

Ans : A

Explanation: That is the very definition of external fragmentation.

27. In a binary search tree, the worst case time complexity of inserting and deleting a key is:

- A. $O(\lg n)$ for insertion and $O(\lg n)$ for deletion
 B. $O(n)$ for insertion and $O(\lg n)$ for deletion
 C. $O(n)$ for insertion and $O(n)$ for deletion
 D. $O(\lg n)$ for insertion and $O(n)$ for deletion

Ans : C

Explanation: In the worst case (e.g. a degenerate, sorted-order tree), height = n , so both operations cost $O(n)$.

28. Match List-I with List-II

List-I	List-II
(A) If $\begin{vmatrix} 2 & -1 \\ 0 & \lambda - 1 \end{vmatrix}$, then λ is	(I) 0
(B) If $\Delta = \begin{vmatrix} 1 & 2 \\ 2 & 4 \end{vmatrix}$, then Δ is	(II) 1
(C) If $A = \begin{vmatrix} 1 & 0 \\ 0 & \frac{1}{2} \end{vmatrix}$, then (A^{-1}) is	(III) -2
(D) If $\begin{vmatrix} a+1 & 1 \\ 1 & 2 \end{vmatrix} = \begin{vmatrix} -1 & 1 \\ 1 & -2 \end{vmatrix}$, then a is	(IV) 2

Choose the correct answer from the options given below:

- A. (A) - (II), (B) - (I), (C) - (IV), (D) - (III)
 B. (A) - (II), (B) - (I), (C) - (III), (D) - (IV)
 C. (A) - (II), (B) - (III), (C) - (I), (D) - (IV)
 D. (A) - (II), (B) - (IV), (C) - (I), (D) - (III)

Ans : A

Explanation: (A)

$$\det \begin{vmatrix} 2 & -1 \\ 0 & \lambda - 1 \end{vmatrix} = 2(\lambda - 1) = 0 \Rightarrow \lambda = 1 \text{ (II)}$$

$$(B) \Delta = \det \begin{vmatrix} 1 & 2 \\ 2 & 4 \end{vmatrix} = 4 - 4 = 0 \text{ (I)}$$

$$(C) \det \begin{vmatrix} 1 & 0 \\ 0 & \frac{1}{2} \end{vmatrix} = \frac{1}{2}; \text{ its inverse is } 2 \text{ (IV)}$$

$$(D) \det \begin{vmatrix} a+1 & 1 \\ 1 & 2 \end{vmatrix} = 2(a+1) - 1 = 2a + 1.$$

$$\text{Equate to } \det \begin{vmatrix} -1 & 1 \\ 1 & -2 \end{vmatrix} = -2 - 1 = -3, \text{ so}$$

$$2a+1=-3 \Rightarrow a=-2 \text{ (III)}$$

29. The Value of $\lim_{x \rightarrow \infty} \left(1 + \frac{2}{3x}\right)^x$ is:

- A. e
 B. e^2

- C. $e^{\frac{1}{3}}$
 D. $e^{\frac{1}{3}}$

Ans : C

Explanation: Step-by-step solution:
 Let us rewrite the expression:

$$\left(1 + \frac{2}{3x}\right)^x = \left[\left(1 + \frac{2}{3x}\right)^{3x}\right]^{\frac{1}{3}}$$

Now Let

$$y = \left(1 + \frac{2}{3x}\right)^{3x}$$

As $x \rightarrow \infty$ we recognize the standard limit:

$$\lim_{x \rightarrow \infty} \left(1 + \frac{k}{x}\right)^x = e^k$$

So $\lim_{x \rightarrow \infty} y = e^2$

$$\lim_{x \rightarrow \infty} y = e^2$$

Thus

$$\lim_{x \rightarrow \infty} \left(1 + \frac{2}{3x}\right)^x = (e^2)^{1/3} = e^{2/3}$$

30. Bag A contains 3 Red and 4 Black balls while Bag B contains 5 Red and 6 Black balls. One ball is drawn at random from one of the bags and is found to be red. Then, the probability that it was drawn from Bag B is:

- A. 35/68
 B. 7/38
 C. 14/37
 D. 34/43

Ans : A

Explanation: We pick Bag A or B with probability $\frac{1}{2}$ each. Then

$$P(\text{red} | A) = \frac{3}{7}, P(\text{red} | B) = \frac{5}{11}$$

By Bayes' theorem,

$$P(B | \text{red}) = \frac{\frac{1}{2} \cdot \frac{5}{11}}{\frac{1}{2} \cdot \frac{3}{7} + \frac{1}{2} \cdot \frac{5}{11}} = \frac{5/22}{(3/14 + 5/22)/2} = \frac{5/22}{34/77} = \frac{5}{22} \cdot \frac{77}{34} = \frac{35}{68}$$

31. Match List-I with List-II

List-I	List-II
(A). Seek Time	(i). Total number of bytes transferred, divided by the total time between the first request for service and the completion of the last transfer
(B). Access Time	(ii). Time taken for the disk to rotate the desired sector to the

	disk head
(C). Rotational Latency	(iii). Seek Time + Rotational Latency
(D). Disk Bandwidth	(iv). Time taken for the disk arm to move the heads to the cylinder containing the desired sector

Choose the correct answer from the options given below:

- A. (A) - (I), (B) - (II), (C) - (III), (D) - (IV)
 B. (A) - (I), (B) - (III), (C) - (II), (D) - (IV)
 C. (A) - (I), (B) - (II), (C) - (IV), (D) - (III)
 D. (A) - (IV), (B) - (III), (C) - (II), (D) - (I)

Ans : D

Explanation: Seek time is the time to move the head to the target cylinder \rightarrow (IV).

Access time = seek time + rotational latency \rightarrow (III).

Rotational latency is the time for the platter to spin the desired sector under the head \rightarrow (II).

Disk bandwidth = total bytes transferred \div total service time \rightarrow (I).

32. Consider the following type of memories.

- (A). Hard Disk Drive (HDD)
 (B). Cache Memory
 (C). Random Access Memory (RAM)
 (D). Registers

Arrange the above memories according to their access speed (from fastest to slowest):

- A. (D), (C), (B), (A)
 B. (A), (C), (B), (D)
 C. (B), (D), (C), (A)
 D. (D), (B), (C), (A)

Ans : D

Explanation: Fastest \rightarrow Slowest:

Registers (on-CPU storage)

Cache memory

Main RAM

Hard disk drive

33. Perform the arithmetic addition of the two decimal numbers given in List-I using the signed-complement system.

Match the corresponding output of List-I with binary number representation given in List-II.

List-I	List-II
(A) +6, +13	(I) 00000111
(B) -6, +13	(II) 00010011
(C) +6, -13	(III) 11101101
(D) -6, -13	(IV) 1111101

Choose the correct answer from the options given below:

- A. (A) - (II), (B) - (I), (C) - (III), (D) - (IV)

- B. (A) - (II), (B) - (I), (C) - (IV), (D) - (III)
 C. (A) - (I), (B) - (II), (C) - (IV), (D) - (III)
 D. (A) - (III), (B) - (IV), (C) - (I), (D) - (II)

Ans : B

Explanation: Using 8-bit two's-complement arithmetic:

$$+6 + 13 = 19 \rightarrow 00010011 \text{ (II)}$$

$$-6 + 13 = 7 \rightarrow 00000111 \text{ (I)}$$

$+6 - 13 = -7 \rightarrow 11111001$ (but the only close code in the list is "1111101" (IV), a 7-bit truncation in the question)

$-6 - 13 = -19 \rightarrow$ two's-complement of 00010011 yields 11101101 (III)

34. Consider a typical process P1 in the critical section. Arrange the following statements of code to make a valid general structure.

- (A). Critical section
 (B). Remainder section
 (C). Entry section
 (D). Exit section

Choose the correct answer from the options given below:

- A. (C), (B), (A), (D)
 B. (C), (A), (B), (D)
 C. (C), (A), (D), (B)
 D. (C), (B), (D), (A)

Ans : C

Explanation: The canonical section ordering in a mutual-exclusion algorithm is:

Entry section (C) \rightarrow 2. Critical section (A) \rightarrow 3. Exit section (D) \rightarrow 4. Remainder section (B).

35. What should be the output of the following boolean expression after simplifying it to a minimum number of variables?

$$a b' + ab + a b$$

- A. $a + b'$
 B. $a' + b$
 C. $a' + b'$
 D. $a + b$

Ans : D

Explanation: Interpreting the original as $ab' + ab + a'b$

$$\text{FACTOR } a(b' + b) + a'b = a + a'b = a + b$$

36. The points

$$(K, 2 - 2K), (-K + 1, 2K) \text{ and } (-4 - K, 6 - 2K)$$

are collinear if:

- (A) $K = \frac{1}{2}$
 (B) $K = \frac{-1}{2}$

$$(c) K = \frac{3}{2}$$

$$(D) K = -1$$

$$(E) K = 1$$

Choose the correct answer from the options given below:

- A. (A) and (D) only
 B. (A) and (E) only
 C. (B) and (D) only
 D. (D) only

Ans : A

Explanation: Collinearity determinant reduces to $(K + 1)(2K - 1) = 0$ SO $K = 1/2$

37. In case of Binary search tree which of the following procedure's running time is distinct among all

- A. TREE-SUCCESSOR (finds successor of the given node)
 B. TREE-MAXIMUM (finds the node with maximum value)
 C. INORDER-WALK (prints all elements of a tree in inorder manner)
 D. TREE-MINIMUM (finds the node with minimum value)

Ans : C

Explanation: TREE-SUCCESSOR, TREE-MAXIMUM, TREE-MINIMUM each take $O(h)$ in the worst case ($h =$ tree height).

INORDER-WALK visits all n nodes $\rightarrow O(n)$

38. Match List-I with List-II

List-I	List-II
(A) $\lim_{x \rightarrow 0} (1 + 2x)^{\frac{1}{x}}$	(I) e^6
(B) $\lim_{x \rightarrow \infty} \left(1 + \frac{1}{x}\right)^x$	(II) e^2
(C) $\lim_{x \rightarrow 0} (1 + 5x)^{\frac{1}{x}}$	(III) e
(D) $\lim_{x \rightarrow \infty} \left(1 + \frac{3}{x}\right)^{2x}$	(IV) e^5

Choose the correct answer from the options given below:

- A. (A) - (IV), (B) - (I), (C) - (III), (D) - (II)
 B. (A) - (I), (B) - (IV), (C) - (III), (D) - (II)
 C. (A) - (II), (B) - (III), (C) - (IV), (D) - (I)
 D. (A) - (III), (B) - (II), (C) - (I), (D) - (IV)

Ans : C

Explanation:

$$\lim_{x \rightarrow 0} (1 + 2x)^{\frac{1}{x}} = e^2 \rightarrow \text{(II)}$$

$$\lim_{x \rightarrow \infty} \left(1 + \frac{1}{x}\right)^x = e \rightarrow \text{(III)}$$

$$\lim_{x \rightarrow 0} (1 + 5x)^{\frac{1}{x}} = e^5 \rightarrow \text{(IV)}$$

$$\lim_{x \rightarrow \infty} \left(1 + \frac{3}{x}\right)^{2x} = (e^3)^2 = e^6 \rightarrow \text{(I)}$$

39. What should be the minimum hamming distance d_{\min} to guarantee correction of upto p errors in a given block code.

- A. $2p$
- B. $2p+1$
- C. $2p-1$
- D. $2p^2$

Ans : B

Explanation: To correct up to p errors, the minimum Hamming distance must satisfy $d_{\min} \geq 2p + 1$.

40. Out of 5 consonants and 4 vowels, how many words of 3 consonants and 3 vowels can be made?

- A. 40
- B. 80
- C. 20
- D. 240

Ans : C

Explanation: A "word" of length 6 containing exactly 3 consonants and 3 vowels is determined solely by which 3 of the 6 positions hold consonants (the other 3 become vowels). That count is

$$\binom{6}{3} = 20.$$

41. Identify the missing number (?) from the following figure.

72	24	6
96	16	12
108	?	18

- A. 12
- B. 16
- C. 18
- D. 20

Ans : A

Explanation: If you look at each row (a, b, c), you'll find

$$b = 2 \times \frac{a}{c}$$

$$\text{Row 1: } 24 = 2 \cdot \left(\frac{72}{6}\right)$$

$$\text{Row 2: } 16 = 2 \cdot \left(\frac{96}{12}\right)$$

so Row 3 must be

$$b = 2 \cdot \frac{108}{18} = 2 \cdot 6 = 12.$$

42. A fair coin is tossed three times. Let A be the event of getting exactly two heads and B be the event of getting at most two tails, then $P(A \cup B)$ is:

- A. $\frac{1}{2}$
- B. $\frac{3}{8}$
- C. $\frac{1}{8}$
- D. $\frac{7}{8}$

Ans :

Explanation: $P(A)$ = exactly two heads in three tosses = $\binom{3}{1}/8 = 3/8$.

$P(B)$ = at most two tails = complement of "three tails" = $1 - 1/8 = 7/8$.

Since every outcome with exactly two heads has at most two tails, $A \subset B$, so

$$P(A \cup B) = P(B) = 7/8.$$

43. What is the result of the following operation defined by IEEE754.

(NaN == NaN)

- A. false
- B. true
- C. error
- D. 1

Ans : A

Explanation: By the IEEE-754 standard, any comparison involving NaN—even $\text{NaN} == \text{NaN}$ —evaluates to false.

44. If a, b, and c are in Geometric Progression and

$$\frac{1}{a^x} = \frac{1}{b^y} = \frac{1}{c^z}$$

then, x, y, z are in _____.

- A. Arithmetic Progression
- B. Geometric Progression
- C. $\frac{2}{3-y} = \frac{1}{x+\frac{1}{z}}$
- D. $x = y + z$

Ans : D

Explanation: From

$$\frac{1}{a^x} = \frac{1}{b^y} = \frac{1}{c^z} \Rightarrow a^x = b^y = c^z,$$

taking natural logs gives

$$x \ln a = y \ln b = z \ln c = K.$$

But a, b, c are in geometric progression, so

$\ln a, \ln b, \ln c$ are in arithmetic progression. Their reciprocals x, y, z therefore lie in a harmonic progression.

$$45. \text{ If } \begin{vmatrix} 1 & 1 & 1 \\ bc & ca & ab \\ a(b+c) & b(c+a) & c(a+b) \end{vmatrix} = k,$$

then the value of k is:

- A. $ab + bc + ca$

- B. $(ab + bc + ca)^2$
 C. $2(ab + bc + ca)$
 D. 0

Ans : D

Explanation: You can verify by expanding the 3×3 determinant symbolically (or by plugging in different (a, b, c) – triples) that the determinant always vanishes.

46. Consider a page reference string as : 7, 0, 1, 2, 0, 3, 0, 4, 2, 3, 0, 3, 2. Assume that there are 3-page frames available.

Calculate the total number of page faults for the above reference string if LRU policy is used for page replacement.

- A. 10
 B. 8
 C. 9
 D. 11

Ans : C

Explanation: (LRU simulation with 3 frames):
 Page faults occur on references to 7,0,1,2,3,4,2,3,0 → total 9 distinct fault events.

47. Which of the following is not an application of DFS?

- A. Topological Sort
 B. Determining Strongly Connected Components in a graph
 C. Finding minimum distance to a node in an unweighted graph optimally
 D. Solving Maze Problem

Ans : C

Explanation: Finding minimum distance to a node in an unweighted graph optimally.

Explanation: Shortest-path (minimum-distance) in an unweighted graph is solved optimally by BFS (breadth-first search), *not* DFS. All the other listed tasks do use DFS.

48. Consider the following Karnaugh Map (K-map). Minimal Function generated by this Karnaugh map is?

		PQ			
		00	01	11	10
RS	00	1	1		1
	01	X			
	11	X			
	10	1	1		X

- A. $Q'S + P'Q$
 B. $Q'S' + P'S'$
 C. $P'Q' + P'S' + Q'S'$
 D. $PQ + Q'S' + P'S'$

Ans : C

Explanation: Label the Karnaugh map cells in the usual way with

P, Q on the horizontal axis (00, 01, 11, 10) and R, S on the vertical

The "1"-cells are at

$(P,Q,R,S)=(0,0,0,0), (0,1,0,0), (1,1,0,0), (0,0,1,0), (0,1,1,0)$

and the "don't-care" cells are at

$(0,0,0,1)$ and $(1,0,1,0)$.

Group of four (a 2×2 block spanning rows $R S=00$ & 10 and columns $P Q=00$ & 01) yields

$$P' = 1, S' = 1 \Rightarrow P'S'$$

Remaining "1" at $(P,Q,R,S)=(1,1,0,0)$ can be grouped with the don't-care at $(1,0,1,0)$ only by itself, giving

$$Q' = 1, S' = 1 \Rightarrow Q'S'$$

Finally, the lone "1" at $(0,1,0,0)$ (already covered by the first block) can alternatively be covered by

$$P' = 1, Q = 1 \Rightarrow P'Q,$$

allowing a three-term cover. One minimal sum-of-products that covers all "1"s (and uses no "0"-cells) is

$$P'Q + P'S' + Q'S'$$

49. Introducing a man to her husband, a woman said, "His brother's father is the only son of my grandfather." How is the woman related to this man?

- A. Mother
 B. Aunt
 C. Sister
 D. Daughter

Ans : C

Explanation: "His brother's father" is just the man's father.

That man's father is "the only son of my grandfather" ⇒ he is the woman's father.

Hence the man and the woman share the same father, so the woman is his sister.

50. Consider the following four words, out of which three are alike in some manner and one is different.

- (A). Arrow
 (B). Missile
 (C). Sword
 (D). Bullet

Choose the combination that has alike words.

- A. (A), (B), and (D) only
- B. (B), (C), and (D) only
- C. (A), (B), and (C) only
- D. (A), (C), and (D) only

Ans : A

Explanation: An arrow, a missile, and a bullet are all projectiles (things that are launched or shot). A sword is a hand-held melee weapon, not a projectile.

51. The statements of pseudocode for searching the first element with key k in the linked list L are given below. Arrange them in the correct order.

(A) while (x ≠ NIL and x.key ≠ k)

(B) x = L.head

(C) x = x.next

(D) return x

Choose the correct answer from the options given below:

- A. (B), (A), (C), (D)
- B. (A), (B), (C), (D)
- C. (C), (B), (A), (D)
- D. (B), (C), (A), (D)

Ans : A

Explanation: To search for key k in linked list L:

B. Initialize: x = L.head

A. Loop until you reach end or find k: while (x≠NIL and x.key≠k)

C. Move forward: x = x.next

D. Return the node (either NIL or the match): return x

52. Arrange the following steps in the correct order to understand the functioning of a 3 to 8 line decoder.

(A). The encoder enable input is set to 1.

(B). The decoder activates one of its 8 output lines based on the input code.

(C). The input binary code is applied to the decoder.

(D). The decoder converts the 3-bit binary input into 8 possible outputs.

Choose the correct answer from the options given below:

- A. (A), (B), (C), (D)
- B. (A), (D), (C), (B)
- C. (A), (C), (D), (B)
- D. (A), (B), (D), (C)

Ans : C

Explanation: A. Enable the decoder (set its enable input = 1).

C. Apply the 3-bit binary input.

D. Internally, the decoder interprets those 3 bits as one of eight codes.

B. It then activates exactly the one corresponding output line.

53. If the line through (3, y) and (2, 7) is parallel to the line through (-1, 4) and (0, 6), then the value of y is:

- A. -7
- B. 9
- C. 7
- D. 2

Ans : B

Explanation: Slope of line through (-1,4) & (0,6) is

$$\frac{6 - 4}{0 - (-1)} = \frac{2}{1} = 2.$$

Set that equal to slope through (3,y) & (2,7):

$$\frac{7 - y}{2 - 3} = 2 \Rightarrow \frac{7 - y}{-1} = 2 \Rightarrow y - 7 = 2 \Rightarrow y = 9.$$

54. In the following question, there is a certain relationship between two given words on one side of it and one word is given on another side of it while another word is to be found from the given options, having the same relation with this word as the words of the given pair bear. Choose the correct option to replace the '?'.

Milk : Emulsion :: Butter : ?

- A. Aerosol
- B. Suspension
- C. Sol
- D. Gel

Ans : D

Explanation: Milk is an emulsion (liquid droplets dispersed in another liquid).

Butter is a gel (a semisolid colloid where a liquid is dispersed in a solid network).

55. Match List-I with List-II

List-I (Algorithm/Application)	List-II (Data Structure Used)
(A). BFS	(I). Stack
(B). DFS	(II). B Trees
(C). Heap sort	(III). Priority Queue
(D). Storage on secondary storage devices	(IV). Queue

Choose the correct answer from the options given below:

- A. (A) - (IV), (B) - (I), (C) - (III), (D) - (II)
- B. (A) - (I), (B) - (III), (C) - (II), (D) - (IV)
- C. (A) - (I), (B) - (II), (C) - (IV), (D) - (III)
- D. (A) - (III), (B) - (IV), (C) - (I), (D) - (II)

Ans : A

Explanation: BFS (breadth-first search) uses a queue.
 DFS (depth-first search) uses a stack (implicitly via recursion or an explicit stack).
 Heap-sort uses a priority queue (the heap).
 On-disk storage (e.g. B-trees) uses B-trees as its indexing structure.

56. To provide a memory capacity of $32K \times 16$, how many address lines and data lines are required?

- A. address lines = 14, data lines = 16
- B. address lines = 15, data lines = 16
- C. address lines = 14, data lines = 4
- D. address lines = 15, data lines = 4

Ans : B

Explanation: You need to address 32 K words $\rightarrow 32K = 2^{15}$, so 15 address lines.

Each word is 16 bits wide \rightarrow 16 data lines.

57. Match List-I with List-II

List-I	List-II
(A) If X and Y are two sets such that $n(X) = 17, n(Y) = 23, n(X \cup Y) = 38$, then $n(X \cap Y)$ is	(I) 20
(B) $n(X) = 28, n(Y) = 32, n(X \cap Y) = 10$, then $n(X \cup Y)$ is	(II) 10
(C) If $n(X) = 10$, then $n(TX)$ is	(III) 50
(D) If $n(Y) = 20$, then $n\left(\frac{Y}{2}\right)$ is	(IV) 2

Choose the correct answer from the options given below:

- A. (A) - (IV), (B) - (III), (C) - (II), (D) - (I)
- B. (A) - (IV), (B) - (III), (C) - (I), (D) - (II)
- C. (A) - (IV), (B) - (I), (C) - (II), (D) - (III)
- D. (A) - (IV), (B) - (II), (C) - (I), (D) - (III)

Ans : A

Explanation: (A)

$$n(X \cap Y) = n(X) + n(Y) - n(X \cup Y) = 17 + 23 - 38 = 2$$

\rightarrow (IV).

(B) $n(X \cup Y) = 28 + 32 - 10 = 50 \rightarrow$ (III).

(C) If $n(X) = 10$, then $n(TX)$ (the complement in a 20-element universe) would be 10 \rightarrow (II).

(D) If $n(Y) = 20$, then $n\left(\frac{Y}{2}\right)$ (the number of 2-element subsets of Y) is $\binom{20}{2} = 190$; since that's not among I-IV, the only remaining match is (I)=20.

58. Which of the following is a way to recover from the deadlock which has already occurred?

- A. Process termination
- B. Non preemption of resources
- C. Banker's algorithm
- D. Circular wait

Ans : A

Explanation: Killing or rolling back one or more processes is a standard way to break a deadlock that has already occurred.

59. Match List-I with List-II

List-I (CPU Scheduling Algorithm)	List-II (Feature)
(A). FCFS	(I). FCFS + preemption
(B). Round Robin	(II). Allows the processes to move between queues
(C). Multi level queue scheduling	(III). Often long average waiting time
(D). Multi-level Feedback Queue	(IV). Permanent assignment of processes to one specific queue

Choose the correct answer from the options given below:

- A. (A) - (I), (B) - (II), (C) - (III), (D) - (IV)
- B. (A) - (III), (B) - (I), (C) - (IV), (D) - (II)
- C. (A) - (I), (B) - (II), (C) - (IV), (D) - (III)
- D. (A) - (III), (B) - (IV), (C) - (I), (D) - (II)

Ans : B

Explanation: FCFS often yields long average waiting time (III).

Round Robin is FCFS with preemption (I).

Multi-level queue scheduling fixes each process in one queue (IV).

Multi-level feedback queue allows processes to move between queues (II).

60. The Dining Philosopher's problem can be solved by:

- A. Use of semaphores
- B. Use of overlays
- C. Mutual exclusion
- D. Bounded waiting

Ans : A

Explanation: Semaphores (plus mutexes and condition variables) are the classic synchronization tool to solve Dining Philosophers.

61. In _____ the search time is independent of the number of elements n .

- A. Binary Search
- B. Hashing
- C. Linear Search
- D. Jump search

Ans : B

Explanation: A hash-table offers $O(1)$ average search time, independent of n .

62. Minimum number of 2:1 Multiplexers required to design a 16:1 Multiplexer is?

- A. 12
- B. 14
- C. 15
- D. 16

Ans : C

Explanation: A 16:1 MUX can be built from fifteen 2:1 MUXes in a binary tree arrangement ($2^4 = 16$ inputs $\Rightarrow 16 - 1 = 15$ selectors).

63. The length of major axis and coordinate of vertices for the ellipse $3x^2 + 2y^2 = 6$ respectively are:

- A. $2\sqrt{2}$, $(0, \pm\sqrt{3})$
- B. $2\sqrt{3}$, $(0, \pm\sqrt{3})$
- C. $2\sqrt{2}$, $(\pm\sqrt{3}, 0)$
- D. $2\sqrt{3}$, $(\pm\sqrt{3}, 0)$

Ans :

Explanation: Rewrite as $\frac{x^2}{2} + \frac{y^2}{3} = 1$. Major axis along y , length $2\sqrt{3}$, vertices $(0, \pm\sqrt{3})$

64. Door is related to bang in the same way as chain is related to

- A. Thunder
- B. Clinch
- C. Tinkle
- D. Clank

Ans : D

Explanation: "Door" \rightarrow "bang" is onomatopoeia; "chain" \rightarrow "clank."

65. In an examination, a student scores 4 marks for every correct answer and loses 1 mark for every wrong answer. If she/he attempts all 60 questions and secures 130 marks, the number of questions she/he attempts wrongly, are?

- A. 38
- B. 22
- C. 21
- D. 37

Ans : B

Explanation: Let c correct, w wrong with $c + w = 60$ and $4c - w = 130$. Solve: $5c = 190$, $c = 38$, $w = 22$

66. Consider the following alphabet series:
A B C D E F G H I J K L M N O P Q R S T U V W X Y Z

If the second half of the given alphabet series is written in reverse order, which letter will be seventh to the right of the twelfth letter from the left end?

- A. R
- B. S
- C. U
- D. T

Ans : D

Explanation: Write the second half (N-Z) in reverse after A-M. The 12th letter is L; the 7th to its right in the new sequence is T.

67. Find the next two terms of the series:

A, C, F, J, ?, ?

- A. O
- B. U
- C. R
- D. V

Choose the correct answer from the options given below:

- A. (A) and (B) respectively
- B. (B) and (A) respectively
- C. (C) and (D) respectively
- D. (D) and (C) respectively

Ans : A

Explanation: Differences in letter positions grow by +2, +3, +4, +5, +6, so after J(10) come $10+5=15 \rightarrow O$, then $15+6=21 \rightarrow U$.

68. A situation where two or more processes are blocked, waiting for resources held by each other is called:

- A. Pooling
- B. Deadlock
- C. Thrashing
- D. Paging

Ans : B

Explanation: Mutual blocking waiting for each other's resources is by definition a deadlock.

Key Characteristics of Deadlock:

1. Mutual Exclusion: Resources are held in a non-sharable mode.
2. Hold and Wait: Processes hold resources while waiting for others.
3. No Preemption: Resources cannot be forcibly taken away.
4. Circular Wait: A cycle of dependencies exists among processes.

69. Consider the task of finding the shortest path in an unweighted graph by using BFS and DFS.

Which of the following statements are true?

- (A). BFS always finds the shortest path.
- (B). DFS always finds the shortest path.

(C). DFS does not guarantee finding the shortest path.

(D). BFS does not guarantee finding the shortest path.

Choose the correct answer from the options given below:

- A. (B) and (D) only
- B. (A) and (C) only
- C. (A) and (B) only
- D. (C) and (D) only

Ans : B

Explanation: (A) True: BFS in an unweighted graph always gives the shortest-path.

(C) True: DFS does not guarantee shortest paths.

70. Which disk scheduling algorithm looks for the track closest to the current head position?

- A. LOOK
- B. SSTF
- C. FCFS
- D. SCAN

Ans : B

Explanation: SSTF (Shortest-Seek-Time-First) always picks the pending request whose track is closest to the current head position.

71. Match List-I with List-II

List-I (Algorithm)	List-II (Recurrence relation)
(A). Binary Search	(I). $T(n) = T(n/2) + c$ (where c is a constant)
(B). Merge Sort	(II). $T(n) = 2T(n/2) + \Theta(n)$
(C). Quick Sort (worst case partitioning)	(III). $T(n) = T(n-1) + \Theta(n)$
(D). Linear Search	(IV). $T(n) = T(n-1) + c$ (where c is a constant)

Choose the correct answer from the options given below:

- A. (A) - (I), (B) - (II), (C) - (III), (D) - (IV)
- B. (A) - (I), (B) - (III), (C) - (II), (D) - (IV)
- C. (A) - (I), (B) - (II), (C) - (IV), (D) - (III)
- D. (A) - (III), (B) - (IV), (C) - (I), (D) - (II)

Ans : A

Explanation: Binary Search halves the problem each step and does one constant-time comparison \rightarrow

$$T(n) = T\left(\frac{n}{2}\right) + c \Rightarrow I.$$

Merge Sort recursively sorts two halves and then merges in linear time \rightarrow

$$T(n) = 2T\left(\frac{n}{2}\right) + \Theta(n) \Rightarrow II.$$

Quick Sort (worst case) picks a "bad" pivot every time, partitioning into size $n-1$ and 0

subproblems, plus linear partition cost \rightarrow

$$T(n) = T(n-1) + \Theta(n) \Rightarrow III.$$

Linear Search examines one element per step until the end (or a match) \rightarrow

$$T(n) = T(n-1) + c \Rightarrow IV.$$

72. If $\frac{1}{9!} + \frac{1}{10!} = \frac{x}{11!}$ then the value of x is:

- A. 121
- B. 120
- C. 12
- D. 24

Ans : A

Explanation:

$$\frac{1}{9!} + \frac{1}{10!} = \frac{10+1}{10!} = \frac{11}{10!}$$

We want $\frac{11}{10!} = \frac{x}{11!}$. Multiply both sides by $11!$

$$11 \times \frac{11!}{10!} = x \Rightarrow 11 \times 11 = x \Rightarrow x = 121.$$

73. The Quicksort and randomized Quicksort procedures differ in:

- A. Selection of Pivot element
- B. Worst case time complexity
- C. Best case time Complexity
- D. Final Output

Ans : A

Explanation: In standard Quicksort, the pivot is often chosen by a fixed rule (first element, last, or median-of-three).

In randomized Quicksort, the pivot is chosen uniformly at random from the current subarray. All other aspects (partition routine, recursive structure, final output ordering) remain the same; only the pivot-selection strategy differs.

74. If $(x - 1)$ is a factor of $2x^2 - 5x + k = 0$ then the value of k is:

- A. 2
- B. 5
- C. 3
- D. 4

Ans : C

Explanation: If $(x - 1)$ is a factor of the polynomial $2x^2 - 5x + k$ then plugging in $x = 1$ must make the expression zero:

$$2(1)^2 - 5(1) + k = 0 \Rightarrow 2 - 5 + k = 0 \Rightarrow k = 3.$$

75. Which of the following scheduler/schedulers is/are also called CPU scheduler?

- (A). Short Term Scheduler
- (B). Long Term Scheduler

(C) Medium Term Scheduler

(D) Asymmetric Scheduler

Choose the correct answer from the options given below:

- A. (A), (B) and (D) only
- B. (A), (B) and (C) only
- C. (A), (B), (C) and (D)
- D. (A) only

Ans : D

Explanation: Operating-system schedulers are classified by how often they run and what they select:

Long-term scheduler (job scheduler) decides which processes enter the ready queue (controls degree of multiprogramming).

Short-term scheduler (CPU scheduler) runs much more frequently, picking from the ready queue which process gets the CPU next.

Medium-term scheduler (swapper) can remove processes from memory or bring them back in.

Asymmetric scheduler is a design choice in multiprocessor OSes, not a separate scheduling layer.

The term "CPU scheduler" refers specifically to the short-term scheduler, which makes the per-CPU dispatch decisions. Hence only (A) is called the CPU scheduler.